

Seat No.

--	--	--	--	--	--	--	--	--	--

**0502**

Set

**A**

**Medium : English**

**Paper No. II**

**Third Language and**

**Time : 1.30 P.M. to 3.00 P.M.**

**Pages : 32**

**Intelligence Test**

**Total Marks : 150**

*Read the following instructions carefully before you answer the questions.*

- (1) Question paper consists of *two* sections—Section **I** and Section **II**. Section **I** consists of **25** questions on Third Language and in Section **II** there are **50** questions on Intelligence Test. *All 75* questions are compulsory.
- (2) *All* questions carry **2** marks each.
- (3) Time limit given to solve the question paper is **90** minutes.
- (4) Separate answer sheet is provided to register the answers. Four circles are given in front of every question. Choose the most correct alternative and mark it on the answer paper as shown below.

Example :— If Q. No. **6** has option number **2** as the correct answer, then completely darken the circle no. **2** as shown below :

Question No. **6**



- (5) Answers marked in the following way will carry zero marks.



- (6) Use blue or black ball pen to darken the circle. Pencil is not allowed. Circles darkened by pencil will not be accepted.
- (7) Once you have darkened the circle as correct alternative you cannot change it.
- (8) If more than one circles are darkened or overwriting is done, the answer will not be accepted.
- (9) The rough work is to be done in the space given under each page or on the last pages of the question paper.
- (10) If you do not know the answer to any question, do not spend much time on it and pass on to the next one. If the time permits you can come back to the question which you have left in the first instance and try them again.
- (11) If you find any question incomplete or with error, then do not ask anything to the Supervisor or Centre Incharge.
- (12) For any error/mistake/objection about the questions one must give written application in person/by post/by E-mail directly to the Commissioner of the Council Examination. The school or parents should not approach Block Education Officer (BEO) or Education Officer (EO) for this matter.
- (13) The application regarding the objection on any question must reach the Council of Examination within 10 days, after the answer key is published by Council of Examination on their web-site. Only the applications that will reach within the given time limit will be considered.
- (14) Questions can be cancelled due to printing mistake or any other reason, on the basis of the suggestions given by the Committee of Experts.

## विभाग I

### तृतीय भाषा

प्र. 1 ते 3 साठी सूचना : खालील उतारा वाचून त्यावर आधारित विचारलेल्या प्रश्नांची

उत्तरे पर्यायांतून निवडा.

मोराइतका सुरेख पक्षी जगात नाही. एकदा त्याने पिसारा फुलवला, की आपण पाहतच राहतो. असा सप्तरंगी पिसारा पाहून आपण आश्चर्यचकित होतो. अशा सुंदर पक्ष्याला 1962 साली भारताने आपला 'राष्ट्रीय पक्षी' म्हणून खूप मानाचे स्थान मिळवून दिले. सर्व जगाने ते मान्य केले, कारण-मोराचे सौंदर्य. मोराने नाचायला सुरुवात केली, की तो पिसारा फुलवतो. कथक या नृत्यप्रकारात 'मयूरनृत्य' प्रसिद्ध आहे. मोराच्या डोक्यावर तुरा असतो. मोर हा चालायला लागला, की त्याची गर्द निळी मान एकसारखी डोलत राहते.

1. मयूरनृत्य कोणत्या नृत्यप्रकारात प्रसिद्ध आहे ?

- |             |                |
|-------------|----------------|
| (1) मणीपूरम | (2) भरतनाट्यम् |
| (3) कथक     | (4) भांगडा     |

2. भारताने मोराला कोणते मानाचे स्थान दिले आहे ?

- (1) भारताचा पक्षी (2) राष्ट्रीय पक्षी  
(3) सुंदर पक्षी (4) सप्तरंगी पक्षी

3. मोराच्या पिसान्यासाठी कोणता शब्द वापरला आहे ?

- (1) गर्द निळी (2) बहुरंगी  
(3) सुरेख (4) सप्तरंगी

प्र. 4 ते 6 साठी सूचना : खालील सुसंगत वाक्यांचा परिच्छेद वाचून त्यावर आधारित

विचारलेल्या प्रश्नांची उत्तरे पर्यायातून निवडा.

4. आज ..... तारीख आहे.

- (1) 1 ऑगस्ट (2) 30 जानेवारी  
(3) 2 ऑक्टोबर (4) 25 मे

5. यादिवशी ..... यांची पुण्यतिथी असते.

- (1) पं. नेहरू (2) लालबहादूर शास्त्री  
(3) लो. टिळक (4) म. गांधी

6. हा दिवस ..... म्हणूनही साजरा करतात.

- |                 |                  |
|-----------------|------------------|
| (1) किसान दिन   | (2) हुतात्मा दिन |
| (3) क्रांती दिन | (4) बाल दिन      |

7. खालीलपैकी समानार्थी शब्दांची चुकीची जोडी ओळखा :

- |                |              |
|----------------|--------------|
| (1) ढग-खग      | (2) नभ-गगन   |
| (3) धरित्री-भू | (4) मोठे-थोर |

8. पुढीलपैकी विरुद्धार्थी शब्दांची अचूक जोडी निवडा :

- |                  |                 |
|------------------|-----------------|
| (1) चढणे x बसणे  | (2) मान x अपमान |
| (3) स्वच्छ x छान | (4) जड x वर     |

9. 'मोठ्या प्रमाणात दान करणारी व्यक्ती' या शब्द-समूहासाठी योग्य शब्द पर्यायातून

निवडा :

- |             |            |
|-------------|------------|
| (1) श्रीमंत | (2) धनवान  |
| (3) कंजूष   | (4) दानशूर |



10. खालीलपैकी ध्वनिदर्शक नसलेल्या शब्द कोणता ?

- (1) झगमगाट (2) चिवचिवाट  
(3) खळखळट (4) खडखडाट

11. 'जसे गवताची गंजी तसे ..... ची जुडी' रिकाम्या जागी योग्य पर्याय निवडा.

- (1) केसांची (2) पानांची  
(3) फळांची (4) पालेभाजी

12. गाळलेल्या जागी योग्य पर्यायाचा क्रमांक निवडा :

घोड्याच्या घराला ..... म्हणतात.

- (1) गोठा (2) खुराडे  
(3) तबेला (4) गुहा

13. खालील वाक्यासाठी योग्य वाक्प्रचार निवडा :

सरपंचांनी सुमनच्या धाडसाचे कौतुक करताना तिची .....

- (1) हात देणे (2) अभय देणे  
(3) पाठ थोपटणे (4) चेहरा खुलणे

14. खाली दिलेल्या अर्थाची योग्य म्हण पर्यायातून निवडा :

‘सगळीकडे सारखीच परिस्थिती असणे’

- (1) बुडत्याला काडीचा आधार (2) पळसाला पाने तीनच  
(3) चोराच्या मनात चांदणे (4) चार दिवस सासूचे चार दिवस सुनेचे

15. ‘प्रामाणिकपणे काम केल्याशिवाय समाजात मान मिळत नाही-या वाक्यातील अधोरेखित शब्दाचा योग्य अर्थ कोणता ?

- (1) अभिमान (2) समानता  
(3) अपमान (4) प्रतिष्ठा

16. खालील पर्यायातील कोणता शब्द जोडशब्द नाही ?

- (1) आगळवेगळ (2) वेळीअवेळी  
(3) काळानिळ (4) वेळेवर

17. ‘र वे गा हि र’ या पाच अक्षरांपासून अर्थपूर्ण शब्द तयार केल्यास त्यात मध्यभागी कोणते अक्षर येईल ?

- (1) हि (2) गा  
(3) वे (4) र

18. खालील गटात नाम असलेला पर्याय कोणता ?

- |           |          |
|-----------|----------|
| (1) सुंदर | (2) किती |
| (3) माधव  | (4) मधाळ |

19. दिलेल्या वाक्यातील क्रियापद ओळखा :

आकाशात तू चंद्र पाहिला का ?

- |           |            |
|-----------|------------|
| (1) आकाश  | (2) पाहिला |
| (3) चंद्र | (4) तू     |

20. दिलेल्या पर्यायांतून पुल्लिंग नसलेला शब्द ओळखा :

- |         |          |
|---------|----------|
| (1) गळा | (2) वाळा |
| (3) फळा | (4) शाळा |

21. खालील शब्दगटातील निश्चितपणे अनेकवचनी असणारा शब्द ओळखा :

- |         |          |
|---------|----------|
| (1) तळे | (2) नारळ |
| (3) मळे | (4) फणस  |

22. 'स्वल्पविराम' साठी असणारे योग्य विरामचिन्ह कोणते ?

(1) ; (2) ,

(3) . (4) ?

23. दिलेल्या शब्दांपैकी किती शब्द शुद्ध आहेत ?

पुसून, पूर्व, कीर्त, प्रदूषित मंजुळ, शीतल, जावून, कोकिळ, फूल

(1) सहा (2) चार

(3) पाच (4) आठ

24. 'गीतरामायण' हा काव्यसंग्रह कोणी रचला ?

(1) मुकुंद तळवलकर (2) आनंद माडगूळकर

(3) बाळ गाडगीळ (4) ग.दि. माडगूळकर

25. 'शिक्षक दिन' म्हणून कोणता दिवस साजरा करतात ?

(1) 14 नोव्हेंबर (2) 5 सप्टेंबर

(3) 15 ऑगस्ट (4) 1 ऑगस्ट







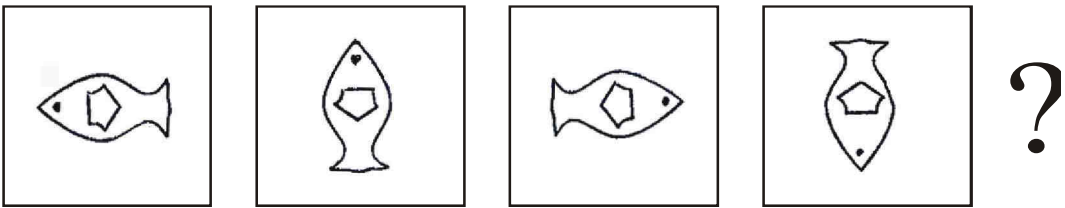




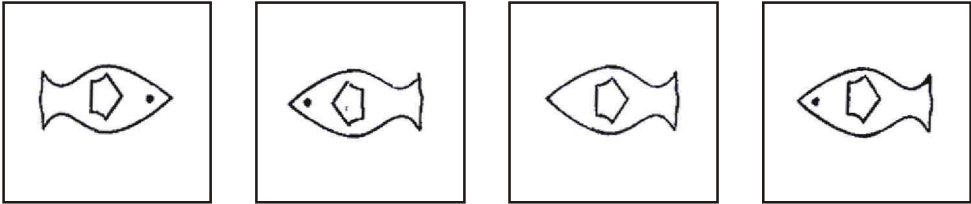
**Alphabets : ABCDE    FGHIJ    KLMNO    PQRST    UVWXY**

38. In the following question a problem figure is given. The constituents of the problem figure move in a particular sequence. Identify the sequence and find the figure in place of the question mark from the alternatives given.

**Problem Figures**



**Answer Figures**



(1)                      (2)                      (3)                      (4)

39. Find the *wrong* term from the given number series :

26, 37, 50, 63, 86, 109

- (1) 86                                      (2) 37
- (3) 63                                      (4) 109


---

**SPACE FOR ROUGH WORK**





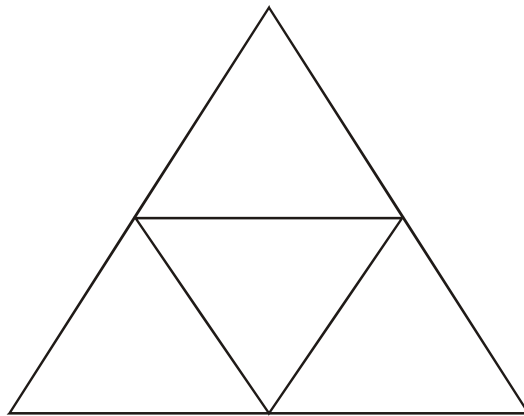
44. Find the number of triangles in the given figure.



- (1) 13
- (3) 17

- (2) 11
- (4) 12

45. Find the number of quadrilaterals in the given figure.



- (1) 6
- (3) 4

- (2) 5
- (4) 3

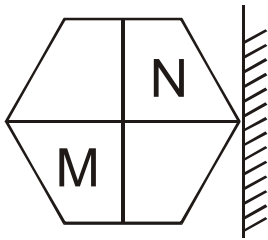
---

SPACE FOR ROUGH WORK

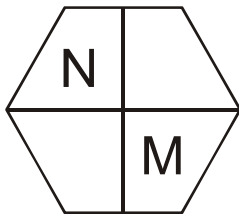
Alphabets : ABCDE    FGHIJ    KLMNO    PQRST    UVWXY

Instructions for Q. Nos. 46 and 47 : In the following question one question figure is given. How will the reflection of the given figure in mirror look ? Select the correct alternative.

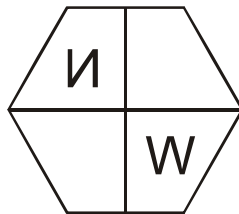
46. Question Figure



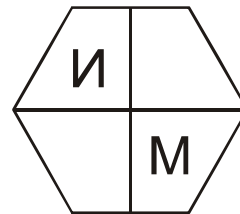
Answer Figures



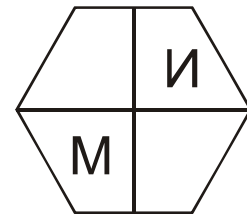
(1)



(2)



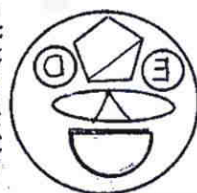
(3)



(4)

47. Question Figure

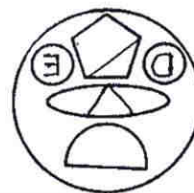
Answer Figures



(1)



(2)



(3)



(4)

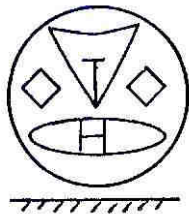
---

SPACE FOR ROUGH WORK

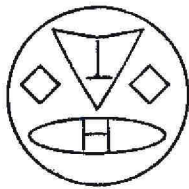
Alphabets : ABCDE    FGHIJ    KLMNO    PQRST    UVWXY

**Instructions for Q. Nos. 48 and 49 :** In the following questions, a question figure is given. Find from the given alternatives the water reflection of the 'question figure' if the 'question figure' is held upright on the water surface.

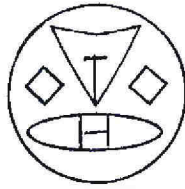
**48. Question Figure**



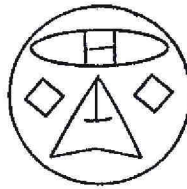
**Answer Figures**




(1)



(2)



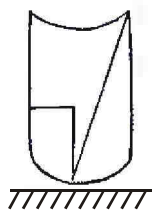
(3)



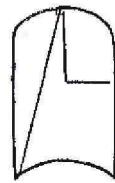
(4)

**49. Question Figure**

**Answer Figures**



(1)



(2)



(3)



(4)

---

**SPACE FOR ROUGH WORK**

**Alphabets : ABCDE    FGHIJ    KLMNO    PQRST    UVWXY**

50. Shubham who has gone for a trip, scribbles his name on the wall of the fort by a pointed object. What will you do in such situation ?
- (1) As a friend you will tell to scribble your name also
  - (2) You will try to make him understand the importance of conservation of historical monuments
  - (3) I will not help him in any way
  - (4) I shall force him to scribble on the wall

**Instructions for Q. Nos. 51 to 55 : In the following questions the first and second term has the same relation as the third and fourth term has. Find the relation and write correct option at the place of question mark.**

51. Moro Trimbak Pingale : Chief :: Niraji Ravaji : ?
- (1) Judge
  - (2) Minister
  - (3) Sumant
  - (4) Amatya

---

**SPACE FOR ROUGH WORK**





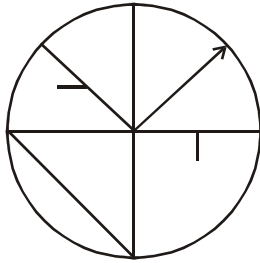
Alphabets : ABCDE	FGHIJ	KLMNO	PQRST	UVWXY
-------------------	-------	-------	-------	-------

55. 3927 : 4845 :: 1845 : ?

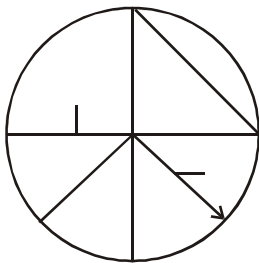
- |          |          |
|----------|----------|
| (1) 2763 | (2) 2805 |
| (3) 2967 | (4) 2956 |

**Instructions for Q. Nos. 56 and 57 : From the following figures, find exactly matching figure to the given question figure.**

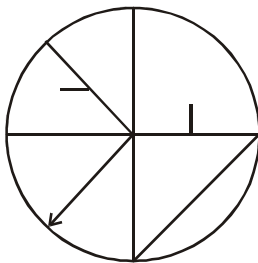
56. **Question Figure**



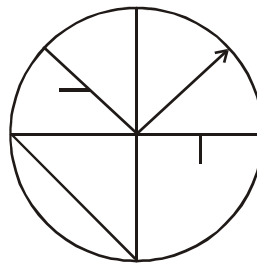
**Answer Figures**



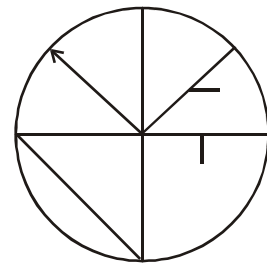
(1)



(2)



(3)

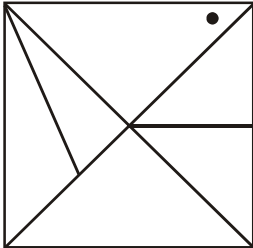


(4)

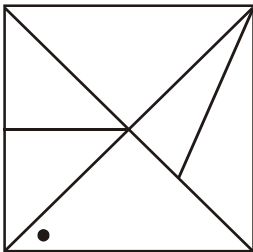
---

**SPACE FOR ROUGH WORK**

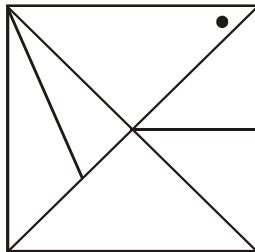
**57. Question Figure**



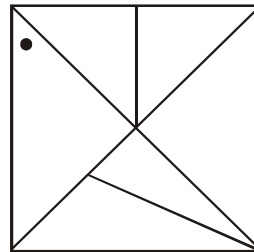
**Answer Figures**



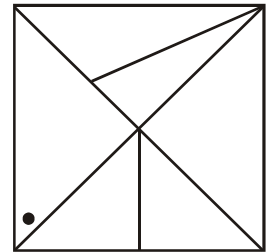
(1)



(2)



(3)



(4)

**58.** In a row 15 boys are standing on the right and 21 boys are standing on the left of Virat. At which place is Vinit standing who is exactly at the middle place of the row ?

(1) 18th

(2) 19th

(3) 20th

(4) 21th

---

**SPACE FOR ROUGH WORK**



**61.** Ruksana walks a distance of 19 km towards west. Then she turns and walks 13.5 km towards south. Then she walks towards east 7.5 km and then she walks 13.5 km to north and stops. How far is she from the origin ?

(1) 10.5 km

(2) 12.5 km

(3) 11.5 km

(4) 13.5 km

**62.** Manda was born on Sunday 8th July 2007, then her second birthday will fall on which day ?

(1) Thursday

(2) Monday

(3) Tuesday

(4) Wednesday

---

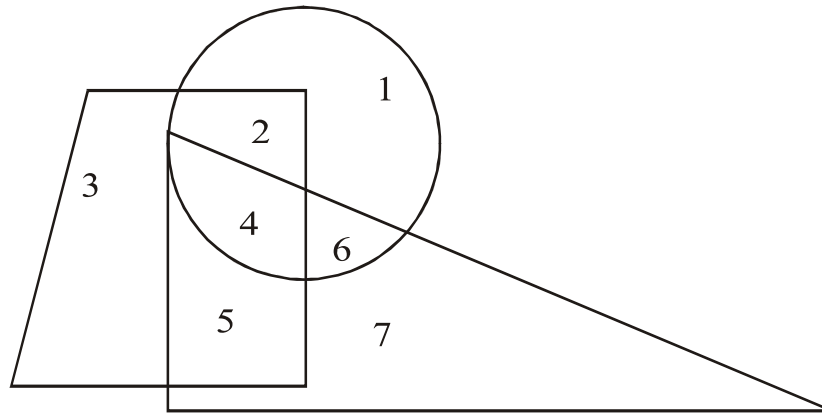
**SPACE FOR ROUGH WORK**

**Alphabets : ABCDE    FGHIJ    KLMNO    PQRST    UVWXY**

**63.** In a year 2nd August comes on Wednesday, then in the same year 4th September will come on which day ?

- (1) Tuesday                      (2) Sunday  
(3) Saturday                      (4) Monday

**64.** Observe the following figure and choose the correct alternative to answer question that follows :



Which number is common in all the three figures—circle, triangle and quadrilateral ?

- (1) 2                                      (2) 5  
(3) 4                                      (4) 6

---

**SPACE FOR ROUGH WORK**

**Alphabets : ABCDE    FGHIJ    KLMNO    PQRST    UVWXY**

**65.** Choose the correct alternative to replace the question mark.

8	5	9
7	2	25
9	7	?

(1) 4

(2) 16

(3) 2

(4) 6

**Instructions for Q. Nos. 66 to 70 : Find out the term/figure from the alternatives that matches the given set of terms/figures in each question.**

**66.** Large intestine, stomach, small intestine :

(1) Oesophagus

(2) Diaphragm

(3) Heart

(4) Kidney

---

**SPACE FOR ROUGH WORK**

67. Ganga, Mahanadi, Godavari :

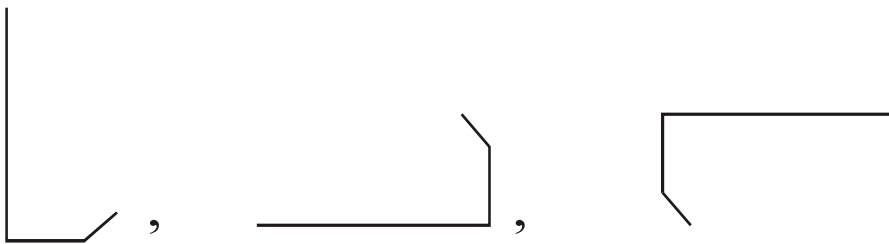
(1) Narmada

(2) Kaveri


(3) Tapi

(4) Sabarmati

68.



(1)



(2)



(3)



(4)

---

SPACE FOR ROUGH WORK

<b>Alphabets : ABCDE</b>	<b>FGHIJ</b>	<b>KLMNO</b>	<b>PQRST</b>	<b>UVWXY</b>
--------------------------	--------------	--------------	--------------	--------------

**69.** (29, 31), (17, 19), (59, 61) :

(1) (41, 43)

(2) (15, 17)

(3) (69, 71)

(4) (19, 21)

**70.** 5985, 8541, 6984 :

(1) 9389

(2) 9387

(3) 9487

(4) 9587

**71.** In a code language 5 = 13, 7 = 19 and 8 = 22, then 1 = ?

(1) 5

(2) 3

(3) 1

(4) 2

---

**SPACE FOR ROUGH WORK**





**Alphabets : ABCDE    FGHIJ    KLMNO    PQRST    UVWXY**

**74.** In a code language 'SON' = + - ÷, 'SUN' = - + × and 'FUN' = × - □, then in the same code language how will you write the word 'UFO'.

**(Instruction :** The sequence of letters and signs may not be the same)

(1) □ × -

(2) × □ ÷

(3) + × □

(4) ÷ + ×

**75.** There is a Kho-Kho match going on the ground. It is a very critical situation in the match. Suddenly there is a commotion on the ground.

What will you do ?

(1) I will try to find the cause of commotion and will try to calm them down

(2) I will beat them badly

(3) I will join them

(4) I will run back to my class

---

**SPACE FOR ROUGH WORK**

**SPACE FOR ROUGH WORK**

**SPACE FOR ROUGH WORK**