

								سیت نمبر
--	--	--	--	--	--	--	--	----------

0622

Set

B

Medium : Sindhi

پيپر نمبر II
32 : پيچ

ٽين پاشا ۽ دماغي قوت آزمائش
Third Language and
Intelligence Test

تائيم : 1.30 To 3.00
150 : مارڪون

- سوال پتر حل ڪرڻ کان اڳ هيشيون سوچنائون ڌيان سان پڙهو.
- (1) هن سوالِي پيپر ۾ ٻه ڀاڱا آهن. انهن مان ڀاڱي I ۾ 25 سوال ٽين پاشا (سنڌي) جا ۽ ڀاڱي II ۾ دماغي قوت آزمائش جا 50 سوال آهن. سڀ سوال حل ڪرڻ ضروري آهن.
 - (2) هر هڪ سوال تي 2 مارڪون آهن.
 - (3) سوالِي پيپر حل ڪرڻ لاءِ ڪل 90 منٽن جو وقت ڏنو ويندو.
 - (4) جوابن کي درج ڪرڻ لاءِ الڳ الڳ جوابي پيپر ڏنل آهي. هر سوالِي نمبر جي سامهون متبادل جوابن جا چار گول ڏنل آهن. ان مان صحيح جواب جو گول هيٺ ڏيکاريل نموني رنگيو.
- مثال: سوال نمبر 6 جو صحيح جواب نمبر 2 هوندو، ته اهو هيٺين نموني درج ڪريو.
- سوال نمبر 6 : (1) ● (3) (4)
- (5) هيٺين نموني درج ڪيل جوابن جو ويچار نه ڪيو ويندو. جواب ائين درج ڪرڻ تي '0' مارڪ ڏني ويندي. جيئن ته : (1) (2) (3) (4)
 - (6) جواب درج ڪرڻ لاءِ فقط نيري يا ڪاري بال پين جو اڀيوگ ڪيو. پينسل يا جيل پين سان درج ڪيل جوابن جو ويچار نه ڪيو ويندو.
 - (7) هڪ دفعو درج ڪيل جواب بدلائي نتا سگهجن.
 - (8) سوالِي پيپر ۾ وڌ ۾ وڌ 20% سوالن لاءِ جوابي چئن متبادل جوابن مان ٻه جواب برابر هوندا. اهي ٻئي جواب درج ڪرڻ ضروري آهن. ان لاءِ ان سوال جي اڳيان ٻه برابر جواب چونڊيو. اهڙي سوچنا ڏنل آهي.
 - (9) ٻه برابر جواب چونڊيو، اهڙي سوچنا ڏنل سوالن کان سواءِ باقي هر هڪ سوال لاءِ هڪ کان وڌيڪ گولن ۾ درج ڪيل جواب ۽ ڊاهيم ڊوهه ڪري درج ڪيل جوابن جو ويچار نه ڪيو ويندو.
 - (10) سوالِي پيپر ۾ هر هڪ ڀني تي هيٺ ۽ آخري ڀني تي ڪچو ڪم ڪرڻ لاءِ خالي جاءِ آهي. ان تي ئي ڪچو ڪم ڪرڻو آهي.
 - (11) امتحان لاءِ محدود وقت ڏنل هئڻ سبب جيڪڏهن ڪنهن سوال جو جواب توهان کي نتو آچي ته ٻيو سوال حل ڪريو. آخري ۾ وقت بچي ته رهيل سوال لاءِ وري ڪوشش ڪريو.
 - (12) جيڪڏهن ڪنهن سوال ۾ چڪ/غلطي نظر آچي تي ان بابت نگران ماسٽر (Supervisor) يا ڪيندر سنچالڪ کان ڪجهه به پڇڻو نه آهي.
 - (13) سوال ۾ چڪ/غلطي/اعتراض بابت پنهنجو لکيل وينتي پتر اسڪول يا مائٽن کي بلاڪ ايڊيوڪيشن آفيسر يا ايڊيوڪيشن آفيسر کي نه موڪليندي سڌو پريڪشا پريشد ڏانهن مانپه ايوڪٽ پريڪشا پريشد جي نالي سان سامهون آچي/ٽپال/رستي/اي ميل رستي موڪليندا.
 - (14) غلطي/چڪ/اعتراض بابت لکيل وينتي موڪلڻ جو عرصو پريڪشا پريشد جي ويب سائيٽ تي عارضي (Temporary) جوابي لسٽ ظاهر ٿيڻ کان پوءِ 10 ڏينهن تائين رهندي. ڏنل عرصي جي آخري تاريخ تائين ميل لکي وينتي دخل ورتي ويندي.
 - (15) چيائي جي غلطي يا ٻئي ڪنهن ڪارڻ سبب سوال غلط هئڻ جي ڄاڻ پوڻ تي ماهر سميتي جي صلاح انوسارا هورڊ ڪيو ويندو.

پاڻي ۱

ٽين پاشا

1. Find out meaningful word related to internet from jumbled words :

kipewidia

- (1) Encyclopedia (2) Web-site
(3) Knowledge (4) Wikipedia

2. Read the sentences. Find out the word which gives correct meaning of sentence :

Gopal wanted to choose the royal physician for Maharaja. He called the candidates who could relieve him from

- (1) pens (2) pains
(3) panes (4) pence

3. Choose the *correct* alternative from the following options which means :

Mansukh could not walk fast but he found a long, thick rope out of his luggage. The ill feeling vanished in a flash.

- (1) in some seconds (2) at once
(3) after sometime (4) with lightening

4. Four pairs are given. Which pair is not pair of opposite words ?

- (1) incomplete × complete (2) poor × rich
(3) hard × easy (4) praise × admire

5. Choose the *correct* option which doesn't match the situation :

Raman got first prize in competition. His mother showed happiness. She said,

- (1) "What a pleasant surprise !"
- (2) "What a clever boy you are !"
- (3) "How hardworking you are !"
- (4) "Don't run away."

6. Read the sentence and choose two correct options by guessing the meaning of underlined word :

The teacher said, "Look at every plant. Choose that part which has medicinal value."

- (1) place where industrial process takes place
- (2) to put in the ground to grow, useful to us in many ways
- (3) a place where power is produced
- (4) a living thing that grows on the earth and usually has stem, leaves, roots

7. Read the riddle and choose the correct alternative :

I have three blades,

It rotates in clockwise direction,

It gives cool air and breeze when you switch on,

It makes you pleasant in summer.

- (1) window
- (2) fan
- (3) helicopter
- (4) grinder

10. Choose the correct alternative from the following table :

Column 'A'	Column 'B'
(1) Teacher told many stories.	(a) Many stories will be told by teacher.
(2) Teacher was telling many stories.	(b) Many stories were told by teacher.
(3) Teacher tells many stories.	(c) Many stories were being told by teacher.
(4) Teacher will tell many stories.	(d) Many stories are told by teacher.

(1) (1)—(b), (2)—(c), (3)—(d), (4)—(a)

(2) (1)—(c), (2)—(b), (3)—(a), (4)—(d)

(3) (1)—(d), (2)—(a), (3)—(b), (4)—(c)

(4) (1)—(a), (2)—(c), (3)—(b), (4)—(d)

11. Find out the *correct* alternative for the type of tense of underlined word :

Ninad flew his kite and the kite rose high in the sky.

(1) Simple present tense (2) Present perfect tense

(3) Past perfect tense (4) Simple past tense

12. Complete the sentence using the *correct* conjunction to form sentence of indirect speech :

Don Quixote said he was not afraid of his enemy.

- | | |
|--------|----------|
| (1) to | (2) that |
| (3) if | (4) why |

13. Identify the adjectives from the given words. choose two *correct* alternatives :

- | | |
|-------------|----------|
| (1) small | (2) buy |
| (3) hopeful | (4) cook |

14. Read the following conversation. Choose the *correct* alternative which shows permission :

Student → I come in ?

Teacher → Yes, come in.

- | | |
|----------|-----------|
| (1) Can | (2) Could |
| (3) Will | (4) May |

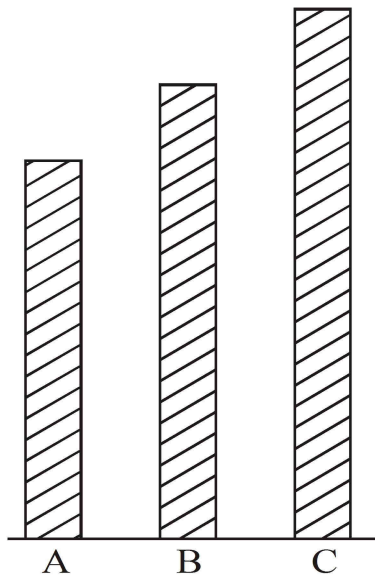
15. Read the dialogue. Choose the correct alternative :

Meenakshi → Where is the bird ?

Madhukaka → There it is. It is that bush.

- | | |
|------------|-----------|
| (1) behind | (2) into |
| (3) in | (4) above |

16. Choose one *correct* alternative :



- (1) Stick 'C' is the largest stick of all.
- (2) Stick 'B' is not as long as stick 'A'.
- (3) Stick 'A' is longer than stick 'B'.
- (4) The stick 'C' is no longer than stick 'A'.

17. Read the following note. Choose the *correct* alternative :

Mother returned home along with grandfather. she found Prachi's note.

Dear Mother,

I have gone out to buy books. My friend will stay with us. Please
cook some food.


- (1) tasty
- (2) salty
- (3) boiled
- (4) raw

Instruction for Q. No. 20 :

Read the advertisement and choose one *correct* alternative :

Aniket Tours and Travels

Spend your summer vacation with fun
and site seeing.



Book for two adults and get booking
for two kids free.

Offer closes on 10th May.

Mode of Transport of your choice.

Aeroplane, Railway, Bus Service, Boat Service.

Choose tour plans

Goa	Coastal Karnataka
Mumbai	Gujrat
Delhi	Madhya Pradesh
Hyderabad	Kullu-Manali

e-mail : aniket.tour@gmail.com

20. Your friend Joseph wants to visit Coastal Karnataka. His father is busy. So they want to choose mode of transport which will make their trip of short duration.

Choose one *correct* option which make their trip of short duration :

- | | |
|-----------------|---------------|
| (1) Bus Service | (2) Railway |
| (3) Boat | (4) Aeroplane |

Instructions for Q. No. 21 to Q. No. 23 :

Read the passage and choose the *correct* option :

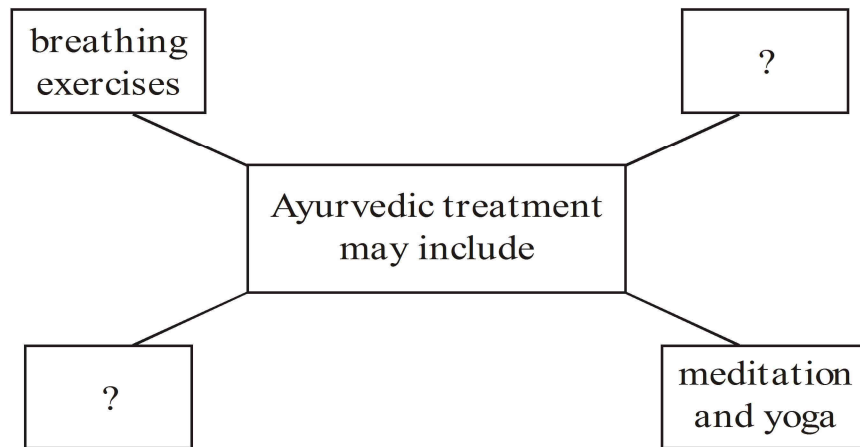
Medicine is the science and practice of diagnosis, treatment and prevention of disease. The word medicine is derived from Latin medicus, meaning 'a physician'. Ayurvedic medicine is one of the world's holistic healing. Ayurved has historical roots in Indian sub-continent. Plant based treatment is Ayurveda may be derived from roots, fruits, barks or seeds. The primary focus of Ayurvedic medicine is to promote good health rather than fight diseases. Treatment may include breathing exercises, diet changes, lifestyle changes, meditation and yoga.

21. Choose the correct alternative of the following :

The primary focus of Ayurvedic medicine is to promote

- (1) diet changes, lifestyle changes
- (2) good health rather than fight diseases
- (3) diagnosis, treatment and prevention of disease
- (4) meditation and yoga

22. Choose two correct alternatives to form the web diagram :



- (1) diet changes
- (2) historical roots
- (3) lifestyle changes
- (4) practice

23. Choose one correct alternative :

If the medicine is the science and practice of diagnosis, then
is the science of earth surface and physical features.

- (1) geometry
- (2) geography
- (3) physics
- (4) global

Instructions for Question Nos. 24 and 25 :

Read the passage and choose the *correct* alternatives for Question Nos. 24 and 25 :

This is the special radio-programme about earthquakes, and what people should do in case an earthquake occurs. Of all the natural calamities earthquakes are the worst. They strike without warning, last for only a few

seconds and cause heavy damage. But remember : Do not panic during an earthquake. If you can reach open ground within seconds, do so. If you are in a building, turn away from glass windows. Take cover under a desk or table. Put both hands on the back of your neck and tuck your head down. If you are outside a building, stay out. When the earthquake is over, you can leave your shelter.

24. Complete the following web by choosing the correct option :

If earthquake occurs and you are in building, what should you do ?

(1)

Put both hands on the back of your neck.

(2)

Turn away from glass windows.

(3)

Tuck your head down.

(4)

?

- (1) climb on the bed
- (2) pull on a blanket and sleep
- (3) take cover under a desk or table
- (4) none of the above

25. Find the odd man out :

- (1) Flood
- (2) Earthquake
- (3) Drought
- (4) Bomb explosion

ڀاڱي II

دماغي قوت آزمائش


سوال 26 کان 29 لاءِ سوچنا : گروهه ۾ اٺهڪنڌڙ پڌ لهو :

(2) پاڻي

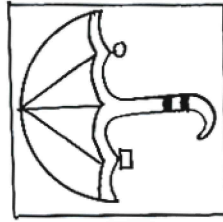
(1) 26. آب

(4) هوا


(3) 27. جل



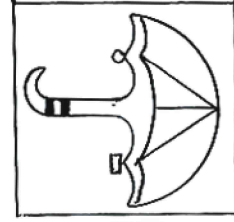
(1)



(2)



(3)



(4)

28.

(2) 2325

(1) 3436

(4) 5249

(3) 7164

(2) DVC

(1) 29. GSF

(4) KOL

(3) EUD

Space for Rough Work

آڪرن جا ميٽر : ABCDE FGHIJ KLMNO PQRST UVWXY

30. گروه سان ٺهڪندڙ پڊ ڳولھيو. (په مناسب جواب چونڊيو)

924, 1342, 3498

1331 (2) 1214 (1)

3905 (4) 4441 (3)

31. پھرين ٻن پڊن جو لاڳاپو سڃاڻي سوالي نشاني جي جاء تي مناسب جواب چونڊيو (په مناسب جواب چونڊيو)

? : بانٻو (لڪڙي) :: کائڻ جو تيل : سويابين

(1) لاک (2) چمڙي

(3) کاغذ (4) ٽوڪري

32. پھرين ٻن پڊن جو لاڳاپو ڌيان سان جاچي ڪري سوالي نشانيءَ جي جاء تي ايندڙ مناسب پڊ چونڊيو. (په مناسب جواب چونڊيو)

? : ويڌن :: ضرورت : گھرج

(1) ناچ (2) خوشي

(3) ماجرا (4) تڪليف

Space for Rough Work

آڪرن جا ميٽر : ABCDE FGHIJ KLMNO PQRST UVWXY

سوال 33 کان 35 لاءِ سوچنا : هيٺ ڏنل هر سوالن ۾ پهرين ٻن پڊن جو لاڳاپو ڏيان سان جاچي ڪري سوالي نشانيءَ جي جاءِ تي ايندڙ صحيح پڊ

چونڊيو.

.33 237 : 1728 :: 412 : ?

637 (2)

3024 (1)

343 (4)

2401 (3)

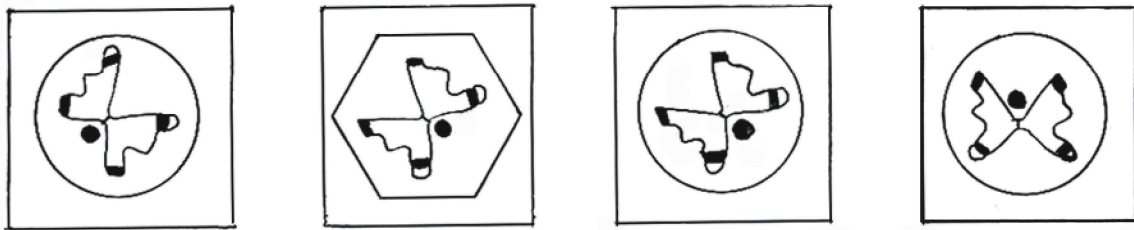
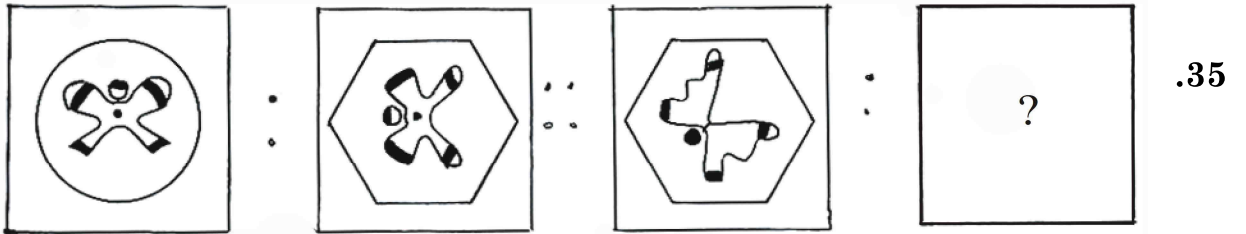
.34 CFI : WTQ :: DHL : ?

VPM (2)

VRN (1)

UQM (4)

UPM (3)



(1)

(2)

(3)

(4)

Space for Rough Work

آڪرن جا ميٽر : ABCDE FGHIJ KLMNO PQRST UVWXY

سوال 36 کان 39 لاءِ سوچنا : هيٺين سلسلن ۾ سوالِي نشانيءَ جي جاءِ تي ايندڙ
پد جوابن مان ڳولھيو.

.36 568, 467, 370, 281, 198, 119 ?

46 (2)

50 (1)

52 (4)

56 (3)

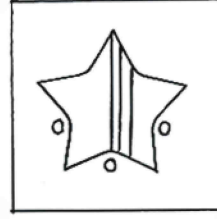
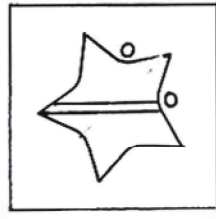
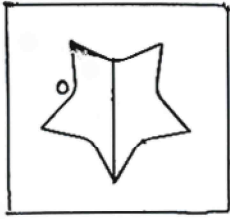
.37 1, 2, 6, 21, 88 ? 2676

645 (2)

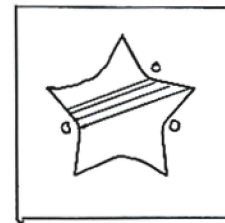
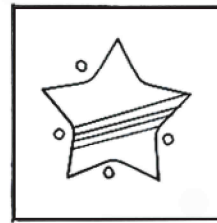
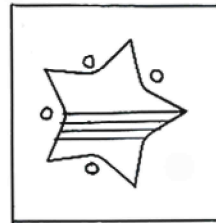
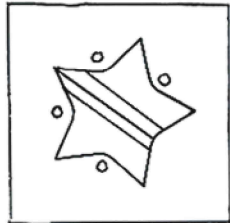
445 (1)

1350 (4)

357 (3)



.38



(1)

(2)

(3)

(4)

Space for Rough Work

آڪرن جا ميٽر : ABCDE FGHIJ KLMNO PQRST UVWXY

39. $\triangle \oplus \square \ominus \boxplus \square \ominus \boxplus \triangle \oplus \boxplus \triangle \oplus ? ? ? \square \ominus \boxplus \triangle \ominus \boxplus \triangle \oplus \square$

$\square \oplus \circ$ (2)

$\triangle \circ \oplus$ (1)

$\square \triangle \oplus$ (4)

$\square \circ \oplus$ (3)

سوال 40 ۽ 41 لاءِ سوچنا : اڳيان ڏنل سلسلي ۾ غلط پد ڳولھيو.

40. 23, 34, 49, 64, 83, 106, 135, 166

49 (2)

64 (1)

135 (4)

83 (3)

41. B V F R J N M J R

V (2)

F (1)

M (4)

B (3)

Space for Rough Work

آڪرن جا ميٽر : ABCDE FGHIJ KLMNO PQRST UVWXY

سوال 42 ۽ 43 لاءِ سوچنا : هڪ گجھي پاشا ۾ 'ڪ س ر (KSR) = 407،
'ر ج ڪ (RJK) = 420، 'س د ر (SDR) = 467 ته هيٺين سوالن جا جواب لکو.

42. ساڳي پاشا ۾ 'د س ڪ (DSK) ڪيئن لکبو؟

604 (2) 760 (1)

407 (4) 764 (3)

43. 4 ۽ 7 کي گڏ ڪري ڪهڙا معنيٰ ڀريل لفظ ٺاهي سگهجن ٿا؟ (ٻه جواب
چونڊيو)

د ر (2) ر س (1)

ر د (4) س ر (3)

44. هڪ گجھي پاشا ۾ A کي C، B کي D ۽ C کي E ائين چوڻ سان P کي ڇا
چئبو؟

R (2) N (1)

S (4) Q (3)

Space for Rough Work

آڪرن جا ميٽر : ABCDE FGHIJ KLMNO PQRST UVWXY

سوال 48 کان 50 لاءِ سوچنا : هيٺئين پراميد (Pyramid) کي ڇاڇي ڪري سوالن ۾ ڏنل انگن جي جاءِ جو نمبر ڏيان ۾ رڪي بيهڪ ڇاڇي مناسب جواب ڳولهيو.

17

18 19

23 24 25

28 29 30 31

33 34 35 36 37

38 39 40 41 42 43

28, 33, 39, 29 : 31, 37, 42, 30 :: 34, 29, 35, 40 : ? .48

36, 30, 35, 41 (2) 41, 35, 30, 36 (1)

35, 30, 36, 41 (4) 36, 30, 25, 31 (3)

18, 28, 30, 25 : 19, 31, 29, 23 :: 38, 39, 28, 23 : ? .49

25, 31, 42, 37 (2) 25, 31, 42, 43 (1)

43, 42, 25, 31 (4) 43, 42, 31, 25 (3)

50. پراميد (Pyramid) ڇاڇي ڪري عددن جي سلسلي ۾ سوالن نشانين جي جاءِ تي مناسب جواب ڳولهيو :

33, 39, 34, 40, 35 ? 36, 42, 37.



41 (2) 30 (1)

31 (4) 40 (3)

Space for Rough Work

آڪرن جا ميٽر : ABCDE FGHIJ KLMNO PQRST UVWXY


51. هيٺ ڏنل سوالِي شڪل جي پاڻيءَ ۾ عڪس جي مناسب شڪل ڳولهيو :



(1)



(2)




(3)

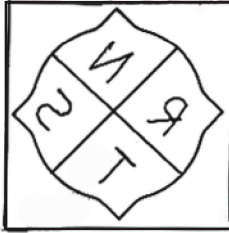


(4)

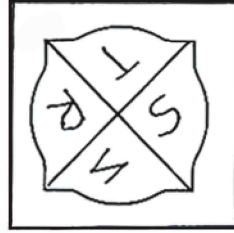
سوال 52 ۽ 53 لاءِ سوچنا : سوالِي شڪل جي آرسِيءَ ۾ عڪس جي مناسب شڪل ڳولهيو.



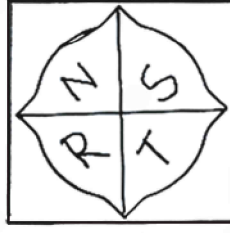
52




(1)



(2)




(3)






(4)

Space for Rough Work



.53



(1)

(2)

(3)

(4)

54. اڃيه جي عمر، رميش جي عمر جي $\frac{3}{2}$ اوڻ کان 3 سال گهٽ ۽ ڏونڊبا جي عمر

جي $\frac{4}{7}$ اوڻ کان 2 سال وڌيڪ آهي. جيڪڏهن ڏونڊبا جي عمر 70 سال

آهي ته تنهن جي عمر جي جوڙا پٽ ڪيتري ٿيندي ؟

(1) 139 سال (2) 125 سال

(3) 142 سال (4) 152 سال

55. هيٺين مان ڪهڙي وقت تي گهڙيال جي ڪلاڪ ڪانٽي ۽ منٽ ڪانٽي وڃي

105° ماپ جي ڪنڊ ٺهندي آهي ؟ (به مناسب جواب چونڊيو)

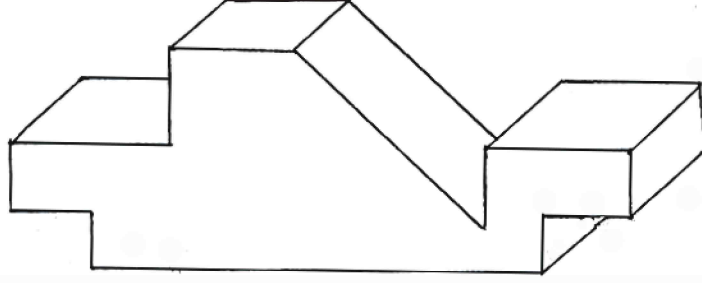
(1) 3 وڃي 30 منٽ (2) 2 وڃي 30 منٽ

(3) 10 وڃي 30 منٽ (4) 9 وڃي 30 منٽ

Space for Rough Work

آڪرن جا ميٽر : ABCDE FGHIJ KLMNO PQRST UVWXY

56. هيٺ ڏنل لڪڙيءَ جي ٽڪر کي ڪيترا مٿاڇرا (سطح) آهن؟



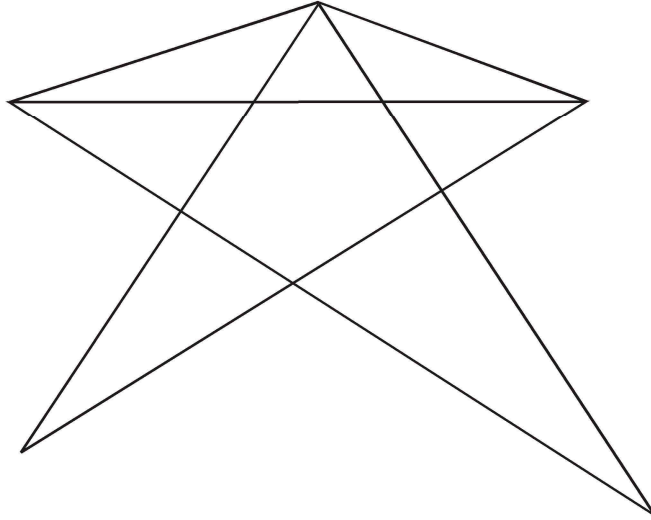
13 (2)

15 (1)

11 (4)

16 (3)

57. هيٺ ڏنل شڪل ۾ ڪل ڪيترا ٽڪنڊا آهن؟



13 (2)

14 (1)

17 (4)

15 (3)

Space for Rough Work

اڪرن جا ميٽر : ABCDE FGHIJ KLMNO PQRST UVWXY

سوال 58 ۽ 59 لاءِ سوچنا : ڏنل عددن جي بيهڪ ۽ اڏاوت سمجهي سوالِي نشانِيءَ

جي جاءِ تي ايندڙ صحيح جواب چونڊيو.

58. $9 \times 4 = 17$, $7 \times 2 = 41$, $10 \times 3 = 73$, ته $8 \times 1 = ?$

65 (2)

67 (1)

69 (4)

63 (3)

$$\begin{array}{c} 7 \\ 4 \boxed{20} 2 \\ 5 \end{array}$$

$$\begin{array}{c} 4 \\ 7 \boxed{27} 3 \\ 2 \end{array}$$

$$\begin{array}{c} 1 \\ 5 \boxed{22} 3 \\ 6 \end{array}$$

$$\begin{array}{c} 7 \\ 2 \boxed{?} 8 \\ 9 \end{array}$$

59.

24 (2)

27 (1)

26 (4)

32 (3)

60. هڪ قطار ۾ گووند آخريءَ کان ستين جاءِ تي بيٺو آهي ۽ گوپال وچ ۾ 23

(ٽيوهين) جاءِ تي آهي ته ٻنهي جي وچ ۾ ڪيترا ٻار آهن ؟

15 (2)

14 (1)

16 (4)

17 (3)

Space for Rough Work

اڪرن جا ميٽر : ABCDE FGHIJ KLMNO PQRST UVWXY

61. سوراج ڪجهه مفاصلو اوڀر طرف وڌي گوني ڪنڊ ۾ ڪاٻي پاسي پاسي مٽيو

۽ 50 ميٽر اڳتي هليو. اُتان هو ساڄي طرف 135° ڪنڊ ۾ مٽيو ۽ 15 ميٽر اڳتي

هليو، ته هاڻي هنجي ڪاٻي پاسي ڪهڙو طرف هوندو؟

(1) اتر-اوڀر (2) اتر-اولهه

(3) ڏکڻ-اولهه (4) ڏکڻ-اوڀر

62. هڪ ليپ سال ۾ 15 مارچ تي منگل هو، ته هن کان پوءِ ساڳئي سال 13

نومبر تي ڪهڙو ڏينهن ايندو؟

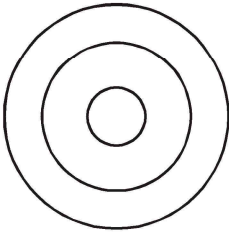
(1) آرتوار (2) چنڇر

(3) ٻڌر (4) سومر

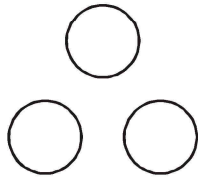
سوال 63 ۽ 64 لاءِ سوچنا : سوال ۾ ڏنل ٻه ڪهڙي وين شڪل سان صحيح

ڏيکارين ٿا. اهو ڳولهيو.

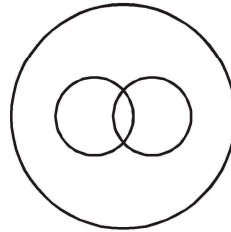
63. ڪا (اڌم)، عجب جي نشاني، بيهڪ جي نشانيون.



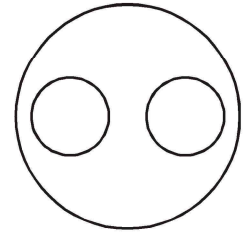
(1)



(2)



(3)

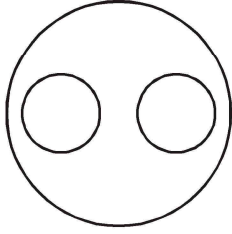


(4)

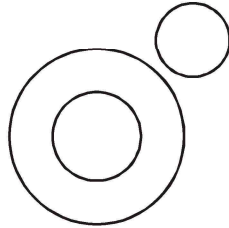
Space for Rough Work

آڪرن جا ميٽڙ : ABCDE FGHIJ KLMNO PQRST UVWXY

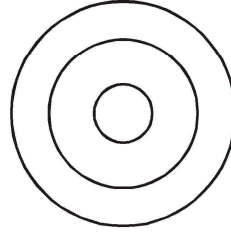
64. غير گرنگهيدار جانور، نانگ، ڪيچئون



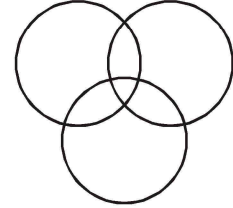
(1)



(2)



(3)



(4)

65. ڏنل چوڪنڊي ۾ سوالِي نشانيءَ جي جڳهه تي ڪهڙو صحيح جواب ايندو؟

53	17	67
11	?	23
41	83	13

29 (2)

43 (4)

37 (1)

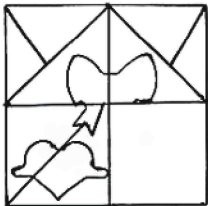
31 (3)

سوال 66 ۽ 67 لاءِ سوچنا : ڏنل سوالِي شڪل پوري ڪرڻ لاءِ مناسب جواب چونڊيو.

سوال شڪل

جواب شڪليون

66



(1)



(2)



(3)



(4)

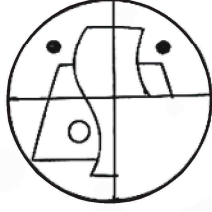
Space for Rough Work

آڪرن جا ميٽر : ABCDE FGHIJ KLMNO PQRST UVWXY

سوال شڪل

جواب شڪليون

.67



(1)



(2)



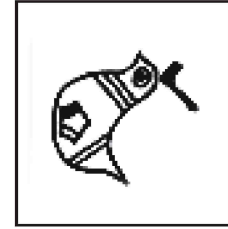
(3)




(4)

.68 سوالی شڪل سان هوبهو ملندڙ شڪل ڳولھيو :

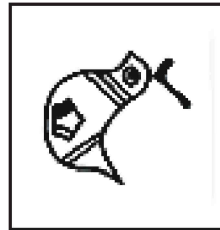
سوال شڪل



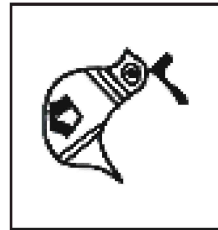
جواب شڪليون



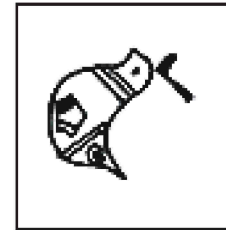
(1)



(2)



(3)




(4)

Space for Rough Work


آڪرن جا ميٽڙ : ABCDE FGHIJ KLMNO PQRST UVWXY

69. هيٺ ڏنل سوالِي شڪل جي کاغذ کي موڙي ڏنل هنڌن تان ڪپيو ۽ پوءِ کوليو ته اهو هيٺين شڪلين مان ڪيئن ڏسڻ ۾ ايندو؟

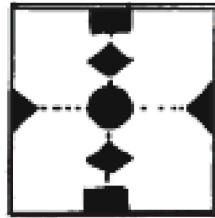
سوال شڪل



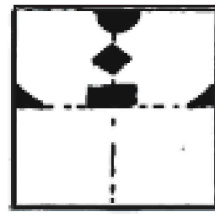
جواب شڪليون



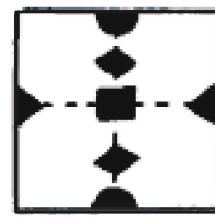
(1)



(2)




(3)



(4)

70. هيٺ ڏنل سوالِي شڪل ۾ لڪيل شڪل هيٺين مان ڳولهيو:

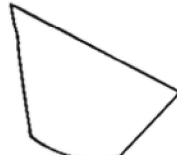
سوال شڪل



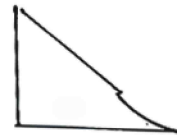
جواب شڪليون



(1)



(2)



(3)



(4)

Space for Rough Work

اڪرن جا ميٽر : ABCDE FGHIJ KLMNO PQRST UVWXY

71. 'اسان ڪالهه مهاڀليشور گهمڻ وياسين.'

ان جملي ۾ 'س' اکر 'ب' اکر کان ڪيترا دفعا وڌيڪ يا گهٽ آيل آهي؟

(1) 1 وڌيڪ (2) 2 وڌيڪ

(3) 3 وڌيڪ (4) 4 وڌيڪ

72. 'مضبوط' اکبار، طاقت، غلاظت، لفظن مان ڪيترا لفظ غلط لکيل آهن؟

(1) 3 (2) 1

(3) 2 (4) 4

73. هيٺين لفظن مان ڪهڙا لفظ 'ان' جي ماترا وارا آهن؟ انب، نفرت،

نوڪري، منجهند. (ٻه مناسب جواب ڳولھيو)

(1) منجهند (2) نوڪري

(3) نفرت (4) انب

Space for Rough Work

آڪرن جا ميٽر : ABCDE FGHIJ KLMNO PQRST UVWXY

74. ت، ر، پ، س آڪرن مان ٺهندڙ معنيٰ ڀريل لفظ جيڪو 'عجب' لفظ جو ساڳي

معنيٰ وارو آهي. اهو ٺاهڻ لاءِ نمبروار ڪهڙا آڪر کڻڻا پوندا؟

(1) پ، ت، ر، س (2) ر، س، پ، ت

(3) ت، پ، ر، س (4) پ، ر، ت، س

75. آڪري مالها :

bddpqpdbbbqpdqdb

پ) مٿين ڏنل آڪري مالها ۾ وچ واري آڪر جي ڪاٻي پاسي چوٿين آڪر کان

کان شروع ڪري) ساڄي طرف ستون آڪر ڪهڙو آهي؟

(1) b (2) d

(3) p (4) q

Space for Rough Work

Space for Rough Work

Space for Rough Work