

پاڻي ۱

ٽين پاشا

1. Choose the correct alternative which is used to make food tasty and delicious :

O	P	E	S	S	P
F	I	A	A	L	E
A	R	L	L	M	P
N	Y	H	T	N	P
Z	G	S	S	O	E
G	I	N	G	E	R

- (1) GARLIC (2) CHILLY
(3) MINT (4) GINGER
2. Choose the correct alternative :

Ancient Indian the science of ship-building and navigation very well.

- (1) knows (2) know
(3) knew (4) had known

3. Choose the correct alternative from the following table :

Column 'A'	Column 'B'
(1) Teacher told many stories.	(a) Many stories will be told by teacher.
(2) Teacher was telling many stories.	(b) Many stories were told by teacher.
(3) Teacher tells many stories.	(c) Many stories were being told by teacher.
(4) Teacher will tell many stories.	(d) Many stories are told by teacher.

(1) (1)—(b), (2)—(c), (3)—(d), (4)—(a)

(2) (1)—(c), (2)—(b), (3)—(a), (4)—(d)

(3) (1)—(d), (2)—(a), (3)—(b), (4)—(c)

(4) (1)—(a), (2)—(c), (3)—(b), (4)—(d)

4. Find out the *correct* alternative for the type of tense of underlined word :

Ninad flew his kite and the kite rose high in the sky.

(1) Simple present tense (2) Present perfect tense

(3) Past perfect tense (4) Simple past tense

5 Complete the sentence using the *correct* conjunction to form sentence of indirect speech :

Don Quixote said he was not afraid of his enemy.

- (1) to (2) that
(3) if (4) why

6. Identify the adjectives from the given words. choose two *correct* alternatives :

- (1) small (2) buy
(3) hopeful (4) cook

7. Read the following conversation. Choose the *correct* alternative which shows permission :

Student → I come in ?

Teacher → Yes, come in.

- (1) Can (2) Could
(3) Will (4) May

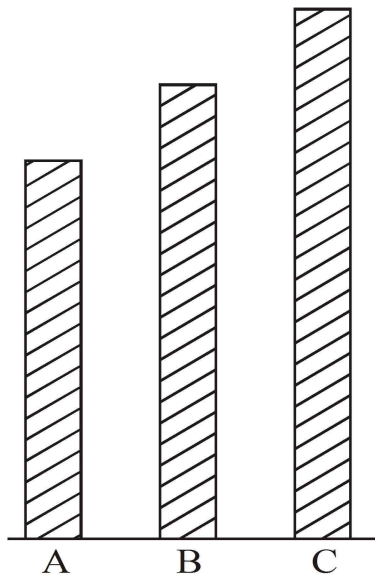
8. Read the dialogue. Choose the correct alternative :

Meenakshi → Where is the bird ?

Madhukaka → There it is. It is that bush.

- (1) behind (2) into
(3) in (4) above

9. Choose one *correct* alternative :



- (1) Stick 'C' is the largest stick of all.
 - (2) Stick 'B' is not as long as stick 'A'.
 - (3) Stick 'A' is longer than stick 'B'.
 - (4) The stick 'C' is no longer than stick 'A'.
10. Read the following note. Choose the *correct* alternative :

Mother returned home along with grandfather. she found Prachi's note.

Dear Mother,

I have gone out to buy books. My friend will stay with us. Please cook some food.

- (1) tasty
- (2) salty
- (3) boiled
- (4) raw

11. Read the conversation between Sanjay and the stranger at the bus-stop.

Choose one *correct* alternative :

Sanjay → Excuse me, which bus does go to railway station ?

Stranger → Bus No. 143 goes to railway station.

Sanjay → Thanks.

Stranger → please.

Sanjay → Yes, Sir.

- | | |
|------------------|------------------------|
| (1) Hold on | (2) Wait for your turn |
| (3) Show your ID | (4) Silence |

12. Choose one correct alternative :

Use cycle, gain health, save wealth, free from


- | | |
|----------------|------------------|
| (1) meditation | (2) conversation |
| (3) relation | (4) pollution |

Instruction for Q. No. 13 :

Read the advertisement and choose one *correct* alternative :

Aniket Tours and Travels

Spend your summer vacation with fun
and site seeing.



Book for two adults and get booking
for two kids free.

Offer closes on 10th May.

Mode of Transport of your choice.

Aeroplane, Railway, Bus Service, Boat Service.

Choose tour plans

Goa	Coastal Karnataka
Mumbai	Gujrat
Delhi	Madhya Pradesh
Hyderabad	Kullu-Manali

e-mail : aniket.tour@gmail.com

13. Your friend Joseph wants to visit Coastal Karnataka. His father is busy. So they want to choose mode of transport which will make their trip of short duration.

Choose one *correct* option which make their trip of short duration :

- | | |
|-----------------|---------------|
| (1) Bus Service | (2) Railway |
| (3) Boat | (4) Aeroplane |

Instructions for Q. No. 14 to Q. No. 16 :

Read the passage and choose the *correct* option :

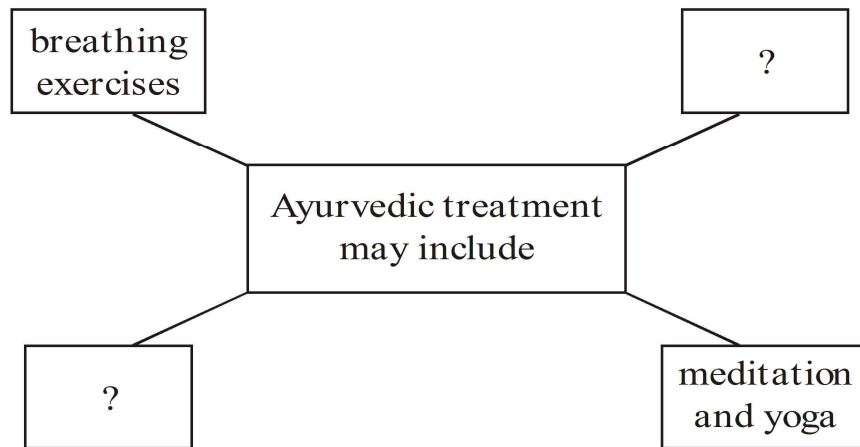
Medicine is the science and practice of diagnosis, treatment and prevention of disease. The word medicine is derived from Latin *medicus*, meaning 'a physician'. Ayurvedic medicine is one of the world's holistic healing. Ayurved has historical roots in Indian sub-continent. Plant based treatment in Ayurveda may be derived from roots, fruits, barks or seeds. The primary focus of Ayurvedic medicine is to promote good health rather than fight diseases. Treatment may include breathing exercises, diet changes, lifestyle changes, meditation and yoga.

14. Choose the correct alternative of the following :

The primary focus of Ayurvedic medicine is to promote

- (1) diet changes, lifestyle changes
- (2) good health rather than fight diseases
- (3) diagnosis, treatment and prevention of disease
- (4) meditation and yoga

15. Choose two correct alternatives to form the web diagram :



- (1) diet changes
- (2) historical roots
- (3) lifestyle changes
- (4) practice

16. Choose one correct alternative :

If the medicine is the science and practice of diagnosis, then
is the science of earth surface and physical features.

- (1) geometry
- (2) geography
- (3) physics
- (4) global

Instructions for Question Nos. 17 and 18 :

Read the passage and choose the *correct* alternatives for Question Nos. 17 and 18 :

This is the special radio-programme about earthquakes, and what people should do in case an earthquake occurs. Of all the natural calamities earthquakes are the worst. They strike without warning, last for only a few

seconds and cause heavy damage. But remember : Do not panic during an earthquake. If you can reach open ground within seconds, do so. If you are in a building, turn away from glass windows. Take cover under a desk or table. Put both hands on the back of your neck and tuck your head down. If you are outside a building, stay out. When the earthquake is over, you can leave your shelter.

17. Complete the following web by choosing the correct option :

If earthquake occurs and you are in building, what should you do ?

(1)

Put both hands on the back of your neck.

(2)

Turn away from glass windows.

(3)

Tuck your head down.

(4)

?

- (1) climb on the bed
- (2) pull on a blanket and sleep
- (3) take cover under a desk or table
- (4) none of the above

18. Find the odd man out :

- (1) Flood
- (2) Earthquake
- (3) Drought
- (4) Bomb explosion

19. Find out meaningful word related to internet from jumbled words :

kipewidia

- | | |
|------------------|---------------|
| (1) Encyclopedia | (2) Web-site |
| (3) Knowledge | (4) Wikipedia |

20. Read the sentences. Find out the word which gives correct meaning of sentence :

Gopal wanted to choose the royal physician for Maharaja. He called the candidates who could relieve him from

- | | |
|-----------|-----------|
| (1) pens | (2) pains |
| (3) panes | (4) pence |

21. Choose the *correct* alternative from the following options which means :

Mansukh could not walk fast but he found a long, thick rope out of his luggage. The ill feeling vanished in a flash.

- | | |
|---------------------|---------------------|
| (1) in some seconds | (2) at once |
| (3) after sometime | (4) with lightening |

22. Four pairs are given. Which pair is not pair of opposite words ?

- | | |
|---------------------------|---------------------|
| (1) incomplete × complete | (2) poor × rich |
| (3) hard × easy | (4) praise × admire |

23. Choose the *correct* option which doesn't match the situation :

Raman got first prize in competition. His mother showed happiness. She said,

- (1) "What a pleasant surprise !"
- (2) "What a clever boy you are !"
- (3) "How hardworking you are !"
- (4) "Don't run away."

24. Read the sentence and choose two correct options by guessing the meaning of underlined word :

The teacher said, "Look at every plant. Choose that part which has medicinal value."

- (1) place where industrial process takes place
- (2) to put in the ground to grow, useful to us in many ways
- (3) a place where power is produced
- (4) a living thing that grows on the earth and usually has stem, leaves, roots

25. Read the riddle and choose the correct alternative :

I have three blades,

It rotates in clockwise direction,

It gives cool air and breeze when you switch on,

It makes you pleasant in summer.

- (1) window
- (2) fan
- (3) helicopter
- (4) grinder

ڀاڱي II

دماغي قوت آزمائش

سوال 26 کان 29 لاءِ سوچنا : هيٺين سلسلن ۾ سوالِي نشانيءَ جي جاءِ تي ايندڙ


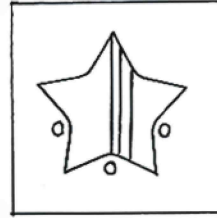
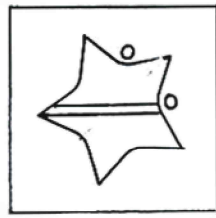
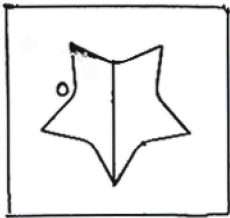
پڊ جوابن مان ڳولھيو.

26. 568, 467, 370, 281, 198, 119 ?

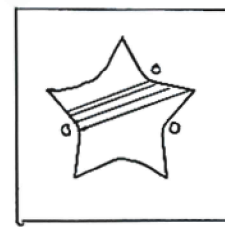
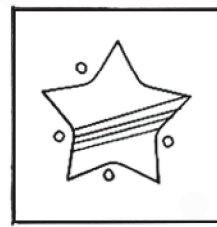
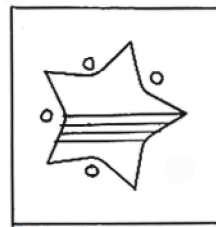
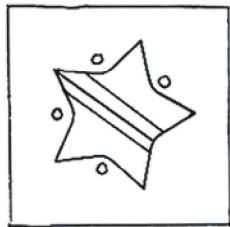
(1) 50 (2) 46 (3) 56 (4) 52

27. 1, 2, 6, 21, 88 ? 2676

(1) 445 (2) 645 (3) 357 (4) 1350



28



(1)

(2)

(3)

(4)

Space for Rough Work

آڪرن جا ميٽر : ABCDE FGHIJ KLMNO PQRST UVWXY

سوال 32 ۽ 33 لاءِ سوچنا : هڪ گجھي پاشا ۾ 'ڪ س ر (KSR) = 407'،
'رج ڪ (RJK) = 420' س د ر (SDR) = 467' ته هيٺين سوالن جا جواب لکو.

32. ساڳي پاشا ۾ 'د س ڪ (DSK)' ڪيئن لکبو؟

604 (2) 760 (1)

407 (4) 764 (3)

33. 4 ۽ 7 کي گڏ ڪري ڪهڙا معنيٰ ڀريل لفظ ناهي سگهجن ٿا؟ (ٻه جواب
چونڊيو)

د ر (2) ر س (1)

ر د (4) س ر (3)

34. هڪ گجھي پاشا ۾ A کي C، B کي D ۽ C کي E ائين چوڻ سان P کي ڇا
چئبو؟

R (2) N (1)

S (4) Q (3)

Space for Rough Work

آڪرن جا ميٽر : ABCDE FGHIJ KLMNO PQRST UVWXY

سوال 38 کان 40 لاءِ سوچنا : هيٺئين پراميد (Pyramid) کي ڇاڇي ڪري سوالن ۾ ڏنل انگن جي جاءِ جو نمبر ڏيان ۾ رکي بيهڪ ڇاڇي مناسب جواب ڳولهيو.

17

18 19

23 24 25

28 29 30 31

33 34 35 36 37

38 39 40 41 42 43

38. 28, 33, 39, 29 : 31, 37, 42, 30 :: 34, 29, 35, 40 : ?

36, 30, 35, 41 (2) 41, 35, 30, 36 (1)

35, 30, 36, 41 (4) 36, 30, 25, 31 (3)

39. 18, 28, 30, 25 : 19, 31, 29, 23 :: 38, 39, 28, 23 : ?

25, 31, 42, 37 (2) 25, 31, 42, 43 (1)

43, 42, 25, 31 (4) 43, 42, 31, 25 (3)

40. پراميد (Pyramid) ڇاڇي ڪري عددن جي سلسلي ۾ سوالن جي نشانين جي جاءِ تي مناسب جواب ڳولهيو :

33, 39, 34, 40, 35 ? 36, 42, 37.

41 (2) 30 (1)

31 (4) 40 (3)

Space for Rough Work

آڪرن جا ميٽڙ : ABCDE FGHIJ KLMNO PQRST UVWXY


41. هيٺ ڏنل سوالِي شڪل جي پاڻيءَ ۾ عڪس جي مناسب شڪل ڳولھيو :




(1)



(2)





(3)

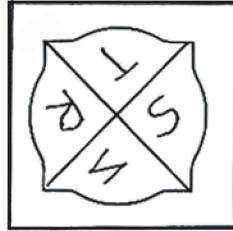


(4)

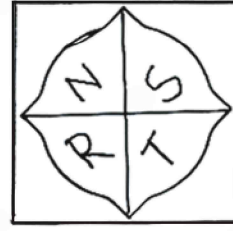
سوال 42 ۽ 43 لاءِ سوچنا : سوالِي شڪل جي آرسِيءَ ۾ عڪس جي مناسب شڪل ڳولھيو.




(1)



(2)




(3)






(4)

42

Space for Rough Work



.43



(1)

(2)

(3)

(4)

44. اڃيه جي عمر، رميش جي عمر جي $\frac{3}{2}$ اوڻ کان 3 سال گهٽ ۽ ڏونڊبا جي عمر جي $\frac{4}{7}$ اوڻ کان 2 سال وڌيڪ آهي. جيڪڏهن ڏونڊبا جي عمر 70 سال آهي ته تنهن جي عمر جي جوڙاڻ ڪيتري ٿيندي ؟

(1) 125 سال

(2) 139 سال

(3) 142 سال

(4) 152 سال

45. هيٺين مان ڪهڙي وقت تي گهڙيال جي ڪلاڪ ڪانٽي ۽ منٽ ڪانٽي وڃي 105° ماپ جي ڪنڊ ٺهندي آهي ؟ (ٻه مناسب جواب چونڊيو)

(1) 3 وڃي 30 منٽ

(2) 2 وڃي 30 منٽ

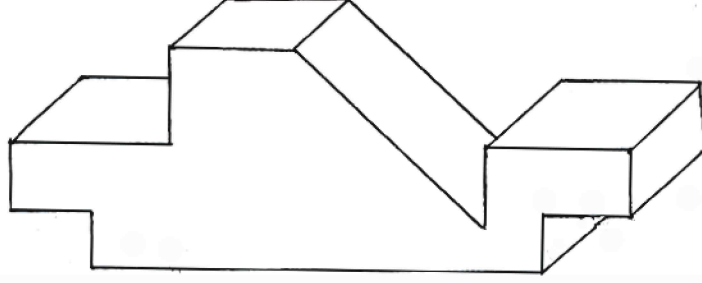
(3) 10 وڃي 30 منٽ

(4) 9 وڃي 30 منٽ

Space for Rough Work

آڪرن جا ميٽر : ABCDE FGHIJ KLMNO PQRST UVWXY

46. هيٺ ڏنل لڪڙيءَ جي ٽڪر کي ڪيترا مٿاڇرا (سطح) آهن؟



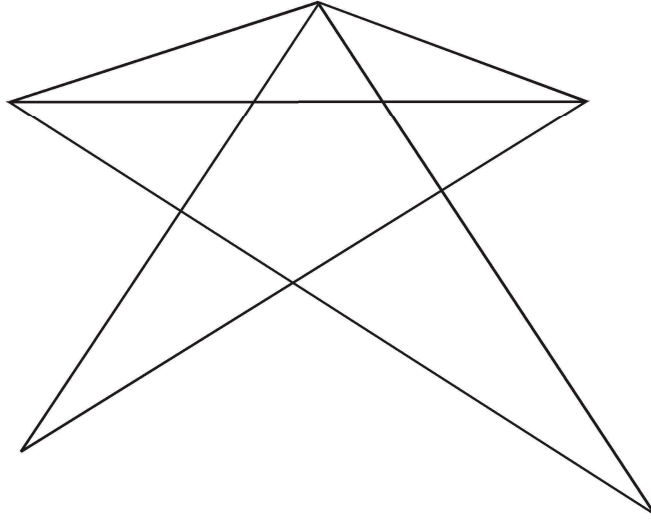
13 (2)

15 (1)

11 (4)

16 (3)

47. هيٺ ڏنل شڪل ۾ ڪل ڪيترا ٽڪنڊا آهن؟



13 (2)

14 (1)

17 (4)

15 (3)

Space for Rough Work

آڪرن جا ميٽر : ABCDE FGHIJ KLMNO PQRST UVWXY

سوال 48 ۽ 49 لاءِ سوچنا : ڏنل عددن جي بيهڪ ۽ اڏاوت سمجھي سوالِي نشانِيءَ

جي جاءِ تي ايندڙ صحيح جواب چونڊيو.

48. $8 \times 1 = ?$ تہ $9 \times 4 = 17$, $7 \times 2 = 41$, $10 \times 3 = 73$,

65 (2)

67 (1)

69 (4)

63 (3)

49. $4 \begin{array}{|c|} \hline 7 \\ \hline 20 \\ \hline 5 \\ \hline \end{array} 2$ $7 \begin{array}{|c|} \hline 4 \\ \hline 27 \\ \hline 2 \\ \hline \end{array} 3$ $5 \begin{array}{|c|} \hline 1 \\ \hline 22 \\ \hline 6 \\ \hline \end{array} 3$ $2 \begin{array}{|c|} \hline 7 \\ \hline ? \\ \hline 9 \\ \hline \end{array} 8$

24 (2)

27 (1)

26 (4)

32 (3)

50. هڪ قطار ۾ گووند آخريءَ کان ستين جاءِ تي بيٺو آهي ۽ گوپال وچ ۾ 23

(ٽيوهين) جاءِ تي آهي تہ ٻنهي جي وچ ۾ ڪيترا ٻار آهن ؟

15 (2)

14 (1)

16 (4)

17 (3)

Space for Rough Work

آڪرن جا ميٽر : ABCDE FGHIJ KLMNO PQRST UVWXY

51. سوراج ڪُجهه مفاصلو اوڀر طرف وڌي گوني ڪندڙ ۾ ڪاٻي پاسي پاسي مٽيو ۽ 50 ميٽر اڳتي هليو. اُتان هُو ساڄي طرف 135° ڪندڙ ۾ مٽيو ۽ 15 ميٽر اڳتي

هليو، ته هاڻي هُنجي ڪاٻي پاسي ڪهڙو طرف هوندو؟

(1) اُتر-اوڀر (2) اُتر-اولهه

(3) ڏکڻ-اولهه (4) ڏکڻ-اوڀر

52. هڪ لپ سال ۾ 15 مارچ تي منگل هو، ته هن کان پوءِ ساڳئي سال 13

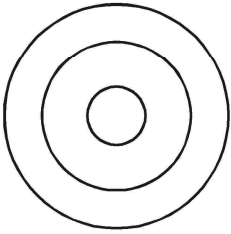
نومبر تي ڪهڙو ڏينهن ايندو؟

(1) آرتوار (2) چنڇر

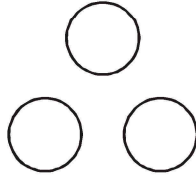
(3) ٻُڌر (4) سومر

سوال 53 ۽ 54 لاءِ سوچنا : سوال ۾ ڏنل ٻڌ ڪهڙي وين شڪل سان صحيح ڏيکارين ٿا. اهو ڳولهيو.

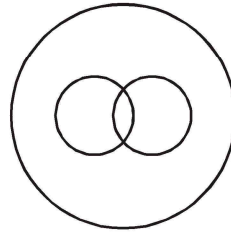
53. ڪاما (اڌم)، عجب جي نشاني، بيهڪ جي نشانيون.



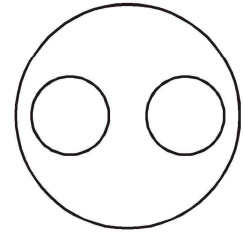
(1)



(2)



(3)

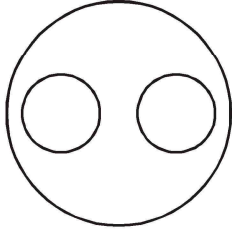


(4)

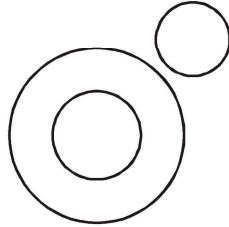
Space for Rough Work

آڪرن جا ميٽڙ : ABCDE FGHIJ KLMNO PQRST UVWXY

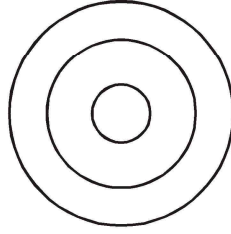
54. غير گرنگهيدار جانور، نانگ، ڪيڇئون



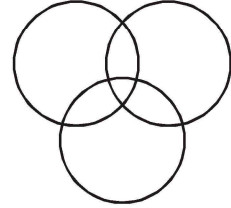
(1)



(2)



(3)



(4)

55. ڏنل چوڪنڊي ۾ سوالِي نشانيءَ جي جڳهه تي ڪهڙو صحيح جواب ايندو؟

53	17	67
11	?	23
41	83	13

29 (2)

43 (4)

37 (1)

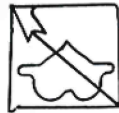
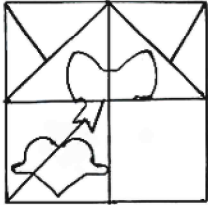
31 (3)

سوال 56 ۽ 57 لاءِ سوچنا : ڏنل سوالِي شڪل پوري ڪرڻ لاءِ مناسب جواب چونڊيو.

سوال شڪل

جواب شڪليون

56



(1)



(2)



(3)



(4)

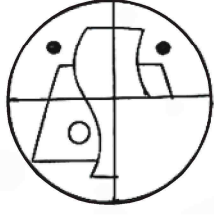
Space for Rough Work

آڪرن جا ميٽر : ABCDE FGHIJ KLMNO PQRST UVWXY

سوال شڪل

جواب شڪليون

.57



(1)



(2)



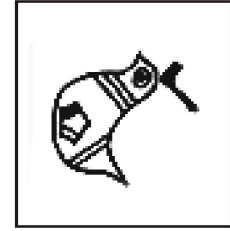
(3)




(4)

.58 سوالی شڪل سان هوبهو ملندڙ شڪل ڳولھيو :

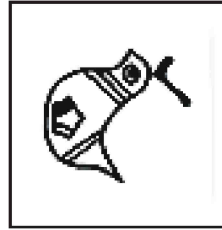
سوال شڪل



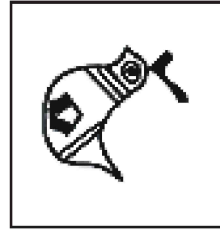
جواب شڪليون



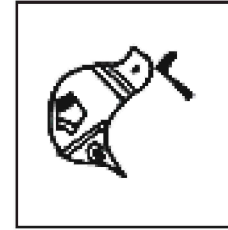
(1)



(2)



(3)




(4)

Space for Rough Work


اڪرن جا ميٽر : ABCDE FGHIJ KLMNO PQRST UVWXY

59. هيٺ ڏنل سوالِي شڪل جي کاغذ کي موڙي ڏنل هنڌن تان ڪپيو ۽ پوءِ کوليو ته اهو هيٺين شڪلين مان ڪيئن ڏسڻ ۾ ايندو؟

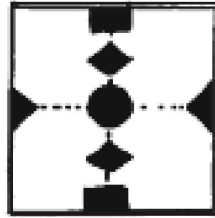
سوال شڪل



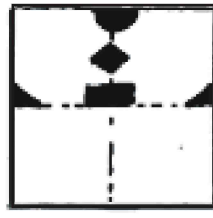
جواب شڪليون



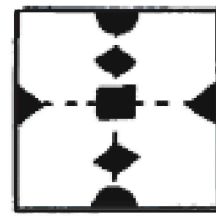
(1)



(2)




(3)



(4)

60. هيٺ ڏنل سوالِي شڪل ۾ لڪيل شڪل هيٺين مان ڳولهيو:

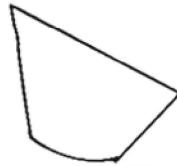
سوال شڪل



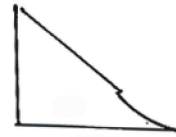
جواب شڪليون



(1)



(2)



(3)



(4)

Space for Rough Work

اڪرن جا ميٽر : ABCDE FGHIJ KLMNO PQRST UVWXY

61. 'اسان ڪالهه مهاڀليشور گهمڻ وياسين.'

ان جملي ۾ 'س' اڪر 'ب' اڪر کان ڪيترا دفعا وڌيڪ يا گهٽ آيل آهي؟

(1) 1 وڌيڪ

(2) 2 وڌيڪ

(3) 3 وڌيڪ

(4) 4 وڌيڪ

62. 'مضبوط' اکبار، طاقت، غلاظت، لفظن مان ڪيترا لفظ غلط لکيل آهن؟

(2) 1

(1) 3

(4) 4

(3) 2

Space for Rough Work

اڪرن جا ميٽر : ABCDE FGHIJ KLMNO PQRST UVWXY

63. هيٺين لفظن مان ڪهڙا لفظ 'ان' جي ماترا وارا آهن ؟ انب، نفرت، نوڪري، منجهند. (ٻه مناسب جواب ڳولهيو)

(1) منجهند (2) نوڪري

(3) نفرت (4) انب

64. ت، ر، پ، س اڪرن مان ٺهندڙ معنيٰ ڀريل لفظ جيڪو 'عجب' لفظ جو ساڳي معنيٰ وارو آهي. اهو ٺاهڻ لاءِ نمبروار ڪهڙا اکر ڪٽڻا پوندا ؟

(1) پ، ت، ر، س (2) ر، س، پ، ت

(3) ت، پ، ر، س (4) پ، ر، ت، س

65. اڪري مالها :

bddpqpdbbqpdqdb

مٿين ڏنل اڪري مالها ۾ وچ واري اڪر جي ڪاپي پاسي چوٿين اڪر کان (p) کان شروع ڪري) ساڄي طرف ستون اڪر ڪهڙو آهي ؟

(1) b (2) d

(3) p (4) q

Space for Rough Work

آكرن ڄا ميٽڙ : ABCDE FGHIJ KLMNO PQRST UVWXY


سوال 66 کان 69 لاءِ سوچنا : گروه ۾ اٺنھڪنڌڙ پڌ لھو :

پاڻي (2)

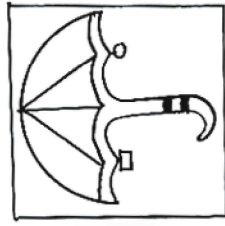
.66 (1) آب

ھوا (4)


(3) ڄل



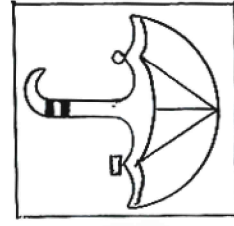
(1)



(2)



(3)



(4)

.67

2325 (2)

.68 (1) 3436

5249 (4)

(3) 7164

DVC (2)

.69 (1) GSF

KOL (4)

(3) EUD

Space for Rough Work

70. گروه سان ٺهڪندڙ پڊ ڳولھيو. (ٻه مناسب جواب چونڊيو)

924, 1342, 3498

1331 (2)

1214 (1)

3905 (4)

4441 (3)

71. پھرين ٻن پڊن جو لاڳاپو سڃاڻي سوالي نشاني جي جاء تي مناسب جواب چونڊيو (ٻه مناسب جواب چونڊيو)

? : بانٻو (لڪڙي) :: ڪاٺ جو تيل : سويابين

(2) چمڙي

(1) لاک

(4) توڪري

(3) ڪاغذ

72. پھرين ٻن پڊن جو لاڳاپو ڌيان سان جاچي ڪري سوالي نشانيءَ جي جاء تي ايندڙ مناسب پڊ چونڊيو. (ٻه مناسب جواب چونڊيو)

? : ويڌن :: ضرورت : گھرج

(2) خوشي

(1) ناچ

(4) تڪليف

(3) ماجرا

Space for Rough Work

آڪرن جا ميٽر : ABCDE FGHIJ KLMNO PQRST UVWXY

سوال 73 کان 75 لاءِ سوچنا : هيٺ ڏنل هر سوالن ۾ پهرين ٻن پڊن جو لاڳاپو
ڏيان سان جاچي ڪري سوالي نشانيءَ جي جاءِ تي ايندڙ صحيح پڊ

چونڊيو.

.73 237 : 1728 :: 412 : ?

637 (2)

3024 (1)

343 (4)

2401 (3)

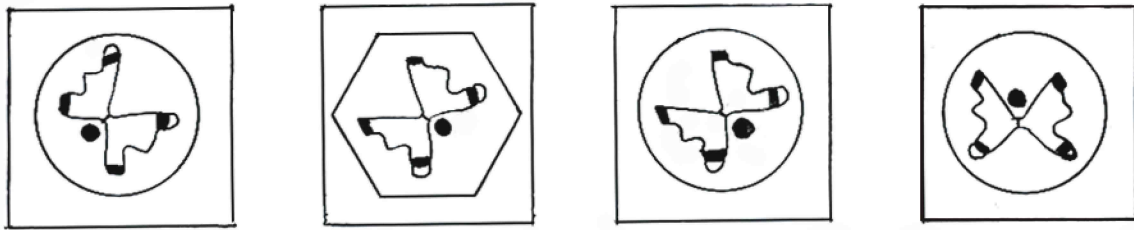
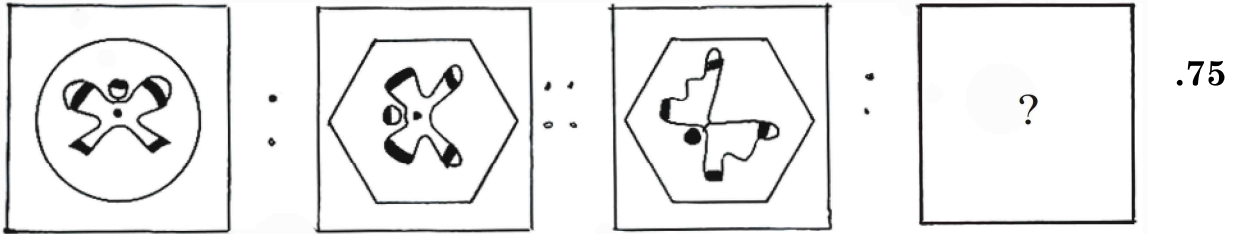
.74 CFI : WTQ :: DHL : ?

VPM (2)

VRN (1)

UQM (4)

UPM (3)



(1)

(2)

(3)

(4)

Space for Rough Work

Space for Rough Work

Space for Rough Work