

PRE UPPER PRIMARY SCHOLARSHIP EXAMINATION (Std. 5th), FEBRUARY 2018

Seat No.

0 2 0 2

Set

A

Paper No. II

Medium : Urdu

Time : 1:30 to 3:00

Pages : 32

Third Language and Intelligence Test

Total Marks :150

Read the following instructions carefully before you answer the questions.

- (1) This question paper contains two sections. In Section I there are 1 to 25 questions of Third Language and in Section II there are 26 to 75 questions of Intelligence Test. All 75 questions are compulsory.
- (2) All questions carry 2 marks each.
- (3) Time limit to solve the question paper is 90 minutes.
- (4) Separate answer sheet is given to record the answers. Each question has been given four alternatives. Read them carefully. Select the correct answer and shade the correct answer in the answer sheet.
Example :- If the correct alternative for Q. No. 6 is 2, then record your answer as follows:
Question No. 6 ① ● ③ ④
- (5) Answer recorded in any other form will not be considered. Such answer will be credited with 'Zero' mark.
Example:
- (6) Use blue or black ball pen to darken the circle. Pencil is not allowed. Circles darkened by pencil will not be credited.
- (7) Once you have darkened the circle as correct alternative you cannot change it.
- (8) If more than one circle are darkened or overwriting is done, the answer will not be accepted.
- (9) The rough work is to be done in the space given under each page do on the last page or the question paper.
- (10) If you do not know the answer to any question, do not spend much time on it and pass on to the next one. If the time permits you can come back to the question which you have left in the first instance and try them again.
- (11) If you find any question incomplete or with error, then or not ask anything to the Supervisor or Centre Incharge.
- (12) For any error/mistake/objection issues, school or parents should not send written application to Block Education Officer or Education Officer. These error/ mistake/objection issues should be register online through respective school login only.
- (13) The error/ mistake/ objection issues should be register online within 10-days from the publication of Interim answer key on MSCE website.
- (14) Questions can be cancelled due to printing mistake or any other reason, on the basis of the suggestions given by the Committee of Experts.
- (15) Along with the question paper of the respective medium, the English version of question paper is also provided. In case of doubt please refer to the English version of the same question.

विभाग I

तृतीय भाषा

Instructions for Q. Nos. 1 to 3 : Read the passage carefully and answer the following questions.

The horse is a common tame animal. After the cow, buffalo and the goat; it is the most useful animal. A horse is used for riding, in hunting. It draws our carts. It is very faithful.

1. Select the correct option.

The horse is most _____ animal.

- (1) useless (2) harmful (3) careless (4) useful

2. Choose the animal which is not mentioned in the given passage.

- (1) cow (2) bullock (3) buffalo (4) goat

3. Select the correct alternative.


A horse is not used for _____

- (1) riding (2) drawing carts
(3) nothing (4) hunting

4. Select the mismatched pair.

- (1) actor – tractor (2) cricket – sachet
(3) tower – power (4) plastic – elastic

5. Observe the picture carefully and select the proper motto.



- (1) We love books (2) Protect all animals
(3) Health is wealth (4) Protect all plants

6. Arrange the numbers properly and make the meaningful word.

a	r	e	f	t	v	i	u	o
1	2	3	4	5	6	7	8	9

- (1) 41893762 (2) 416982753 (3) 213457698 (4) 541628739

7. The sign  indicates that one should _____.

- (1) go straight (2) turn left (3) up ward (4) turn right

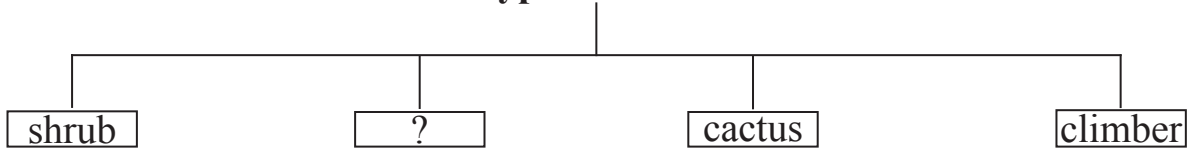
8. Select the correct alternative.

We should cut our nails _____.

- (1) daily (2) early (3) carelessly (4) regularly

9. Choose the correct alternative.

Type of Plants



- (1) bud (2) root (3) stem (4) herb

10. Choose the correct option for making a request.

My friend Arnav forgot his eraser and wants to borrow it _____.

- (1) I brought your eraser. (2) Please, give me your eraser.
 (3) Can I give my eraser to you? (4) Find my eraser.

11. Complete the grid by choosing proper set of alphabets.

c									
r									
	s	t	r	i			h		
w					r				
					a				
					n				
						a	g	l	e

- (1) a, i, g (2) p, k, l (3) o, k, e (4) o, c, e

12. Choose the correct option for the given word.

shape

- (1) aroma (2) rough (3) brick (4) vapour

13. Select the correct punctuation mark that mentioned in the given sentence.

Well done Rahim!

- (1) Exclamation mark (2) Question mark
(3) Full stop (4) Comma

14. If pigs: squeal : then wolves : ?

- (1) howl (2) growl (3) squeak (4) croak

15. Observe the picture and choose the correct expression.



- (1) How sad! (2) What a surprise?
(3) How miserable! (4) What a pity!

16. Fill in the blank by using the correct article.

The cow is _____ useful animal.

- (1) an (2) a (3) the (4) no article.

17. Select the correct option.

Vedant and his team won the football match.

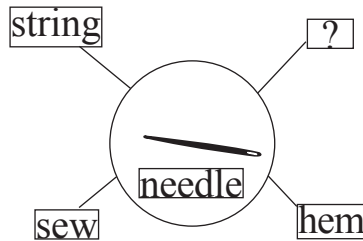
Their friends said, _____.

- (1) Congratulations! (2) Best of luck!
(3) Happy birthday! (4) Good bye!

18. Choose the correct sentence showing correct position of a comma (,).

- (1) I ordered potatoes, sugar, eggs, and coffee.
(2) I ordered, potatoes, sugar, eggs and coffee.
(3) I ordered potatoes, sugar, eggs and coffee.
(4) I ordered potatoes sugar eggs, and coffee.

19. Select the correct option.



- (1) toss (2) spill (3) blink (4) stitch

20. Solve the riddle.

It has three blades. They go round and round.

It gives cool air. What is it?

- (1) a fan (2) a lamp (3) a refrigerator (4) an oven

21. Select the correct speech for the given picture.

- (1) What's wrong?
(2) I don't know.
(3) I can't hear you.
(4) I don't like it.



22. Select the suitable phrase for the given sentence.

_____ there lived a king.

- (1) Long long ago (2) Many years from now
(3) Day after tomorrow (4) Just now

23. Choose the correct punctuation mark for the given sentence.

Are you ready:

- (1) Full stop (2) Question mark (3) Comma (4) Apostrophe

24. Fill in the blanks with the correct option.

I wash my hands _____ and _____ eating.

- (1) near and close (2) up and down
(3) over and under (4) before and after

25. Select the proper alternative.

I brush my teeth _____ a day.

- (1) two (2) twice (3) too (4) first

Section II

Intelligence Test

26. تم پر جو افتار پڑی ہے اسے مردانہ وار برداشت کرو۔
مندرجہ بالا جملہ میں دو حروفی الفاظ تین حروفی الفاظ سے کتنے زیادہ یا کم ہیں؟

(1) 2 سے زیادہ (2) 1 سے زیادہ (3) 2 سے کم (4) 1 سے زیادہ


سوال نمبر 27 تا 31 کے لئے ہدایت:-

گروہ سے تعلق نہ رکھنے والا رکن پہنچانے؟

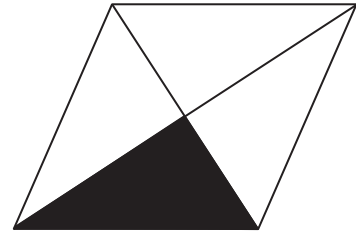
27. (1) 17 (2) 290 (3) 730 (4) 71

28. (1) 319 (2) 232 (3) 251 (4) 174

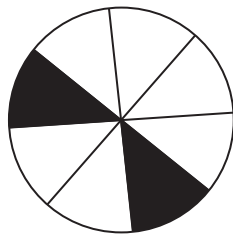
29. (1) مندر (2) نتائج (3) انوار (4) مقابر



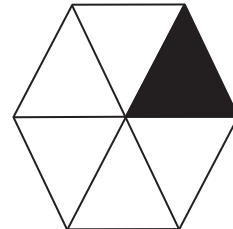
(2)



(1) 30



(4)



(3)

कच्च्या कामासाठी जागा

Section II

Intelligence Test

26. "Merit consists in doing good to others, sin in doing harm to others." In this sentence how many words having five letters each are more or less than the words having two letters each?

- (1) more by 2 (2) less by 1 (3) less by 2 (4) more by 1

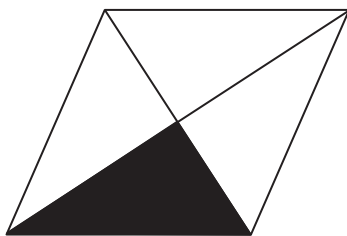
Instructions for Q. Nos. 27 to 31 : Find out the odd term.

27. (1) 17 (2) 290 (3) 730 (4) 71


28. (1) 319 (2) 232 (3) 251 (4) 174

29. (1) Preliminary (2) Prehistoric (3) Prepaid (4) Preposition


30. (1)



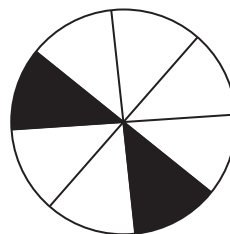
(2)



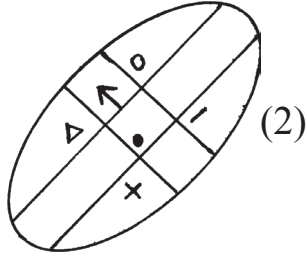
(3)



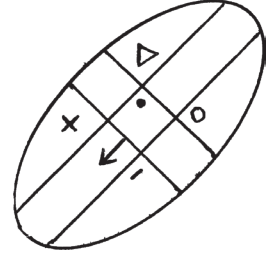
(4)



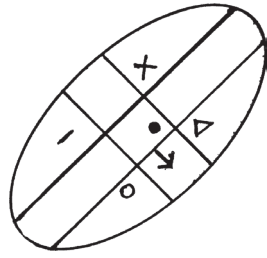
Space for Rough Work



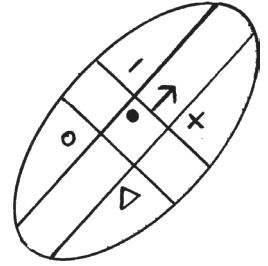
(2)



(1) .31



(4)



(3)

سوال نمبر 32 تا 33 کے لئے ہدایت:-

ذیل کے عددی سلسلے کی ترتیب کو مد نظر رکھتے ہوئے سوالیہ علامت کی جگہ آنے والا عدد متبادلات میں سے منتخب کریں۔

.32 114, 85, 62, 43, ? 13

21 (4)

24 (3)

18 (2)

26 (1)

.33 11, 12, 16, 52, ? 92, 96

83 (4)

61 (3)

56 (2)

77 (1)

.34. تقلمین، ارسلان کے شمال میں 10 میٹر کے فاصلے پر اور احمد کے شمال مغرب میں 20 میٹر کے فاصلے پر کھڑا ہے تو احمد، ارسلان کی کون سی سمت میں کھڑا ہے؟

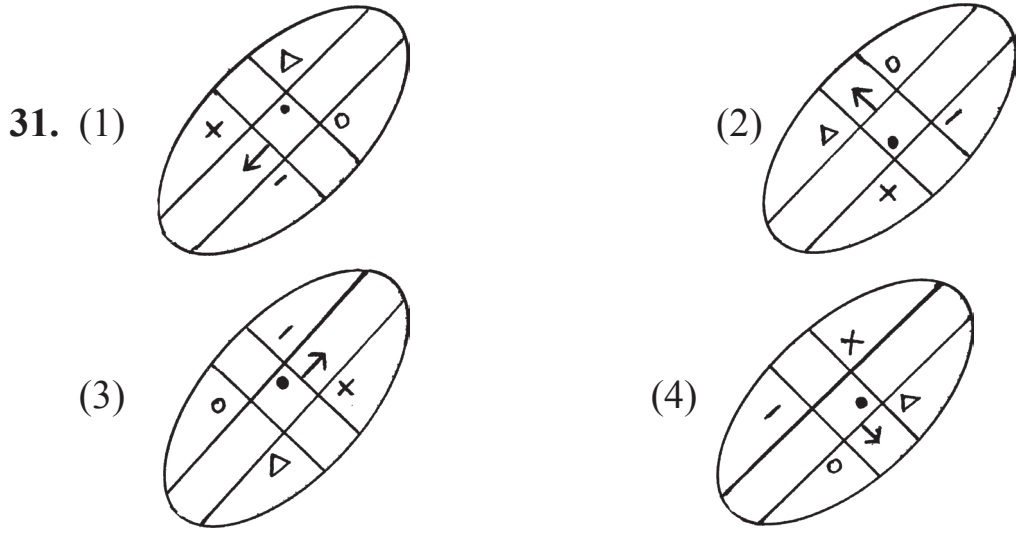
(4) شمال

(3) جنوب

(2) مغرب

(1) مشرق

कच्च्या कामासाठी जागा



Instructions for Q. Nos. 32 to 33 :Observe the number series and find the correct alternative to replace the question mark. (?)

32. 114, 85, 62, 43, ? 13
 (1) 26 (2) 18 (3) 24 (4) 21

33. 11, 12, 16, 52, ? 92, 96
 (1) 77 (2) 56 (3) 61 (4) 83

34. Aman is standing 10 metres away from Obama facing North and 20 metres away from Rafiq facing NORTH-WEST, then in which direction is Rafiq standing to Obama?
 (1) East (2) West (3) North (4) South

Space for Rough Work

35. ذیل کے متبادلات کے اشکال کے بائیں جانب آئینہ رکھا جائے تو کونسی شکل آئینے میں ہو بہو نظر آئے گی؟

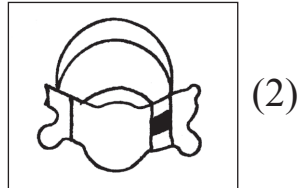
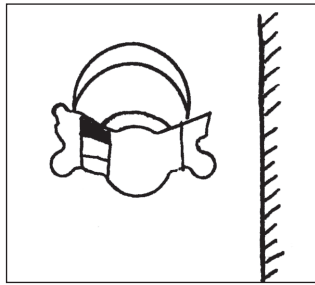
YNY (2)

HTH (1)

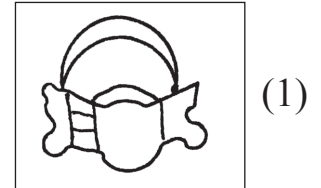
OSO (4)

I Z I (3)

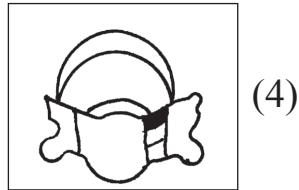
36. ذیل کی سوالیہ شکل کا آئینے میں عکس کیسا دکھائی دے گا؟ صحیح شکل متبادل میں سے منتخب کریں۔



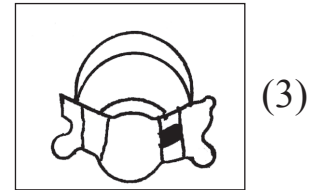
(2)



(1)



(4)



(3)

37. اگست مہینے میں 6 تاریخ کو جمعہ ہو تو، اسی مہینے کے آخری بدھ کو کونسی تاریخ ہوگی؟

25 (2)

31 (1)

30 (4)

27 (3)

कच्च्या कामासाठी जागा

35. If the mirror is held from the left side of the given figures. which figure will look as it is?

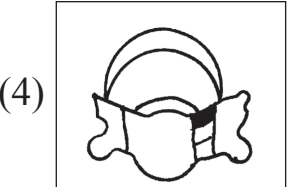
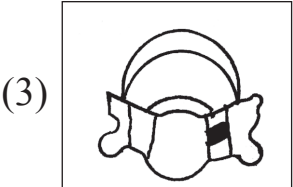
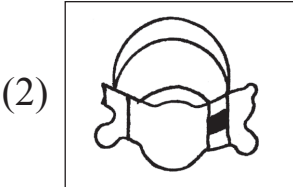
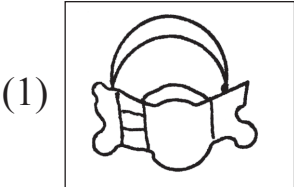
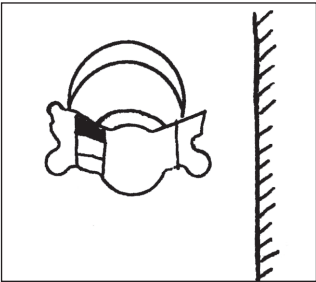
(1) HTH

(2) YNY

(3) I Z I

(4) OSO

36. Find the correct figure from the alternatives which is the mirror image of the question figure.



37. If 6th August was Friday, then in the same month what date it will be on last Wednesday?

(1) 31

(2) 25

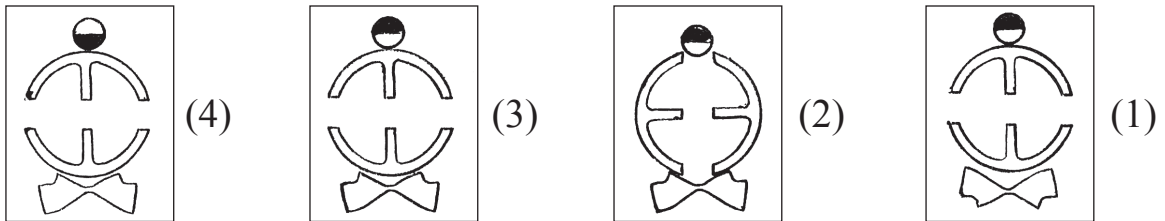
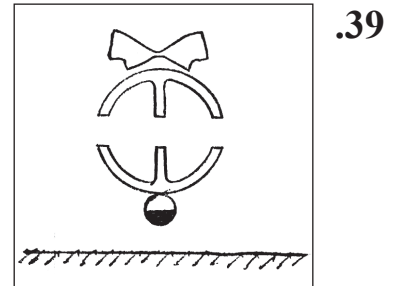
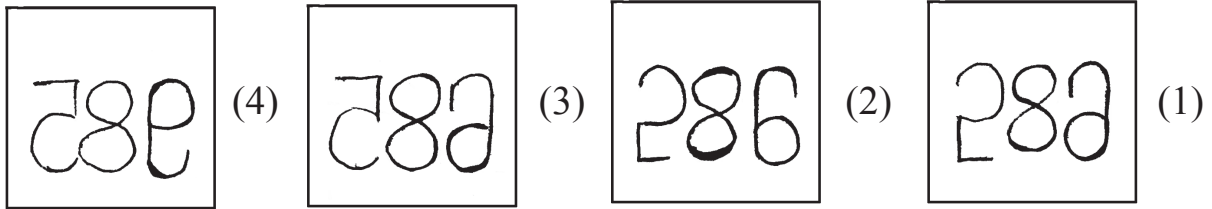

(3) 27

(4) 30

Space for Rough Work

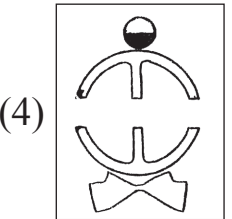
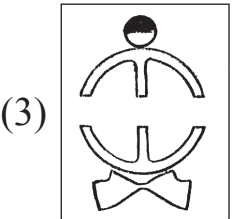
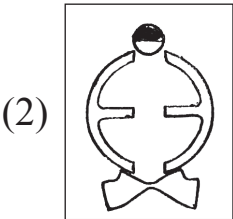
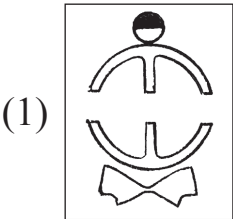
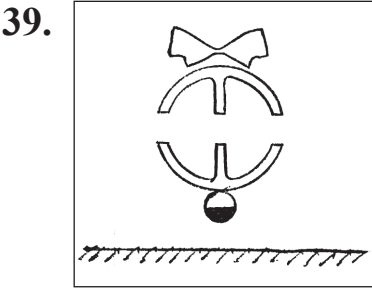
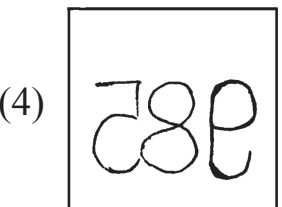
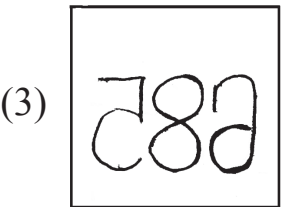
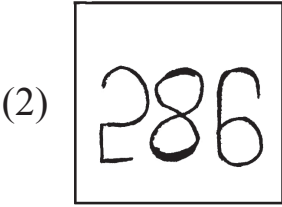
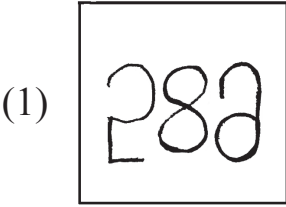

سوال نمبر 38 تا 39 کے لئے ہدایت:-

ذیل کی سوالیہ شکل کا پانی میں عکس کیسا دکھائی دے گا؟ صحیح شکل متبادل میں سے منتخب کریں۔



कच्च्या कामासाठी जागा

Instructions for Q. Nos. 38 to 39 : Select the correct figure that is water image of the question figure from the alternatives.



Space for Rough Work

40. صدف کی دوسری سالگرہ 25 جولائی 2009 سنچر کو تھی تو اس کی پیدائش کون سے دن ہوگی؟

- (1) پیر
(2) منگل
(3) بدھ
(4) جمعرات

41. ذیل کے حروفی سلسلے میں کونسے حروف مساوی مرتبہ آئے ہیں؟

حروفی سلسلہ A B C D B A C A D C D A C D B C

- (1) D اور A
(2) C اور D
(3) B اور A
(4) B اور D

سوال نمبر 42 تا 43 کے لئے ہدایت:- ذیل کے سوالوں میں پہلے رکن کا دوسرے رکن سے جو تعلق ہے۔ ویسا ہی تعلق تیسرے اور چوتھے ارکان میں ہے۔ وہ پہچان کر سوالیہ علامت کی جگہ آنے والا رکن متبادلات میں سے منتخب کریں۔

42. گوا : پنچی :: آسام : ؟

- (1) رانچی
(2) کوہیما
(3) دس پور
(4) گنگٹوک

43. 3564 : 6 :: 7827 : ؟

- (1) 2
(2) 8
(3) 12
(4) 10

44. 36 : 10 :: 27 : ؟

- (1) 26
(2) 16
(3) 15
(4) 24

कच्च्या कामासाठी जागा

Alphabets : A B C D E F G H I J K L M N O P Q R S T U V W X Y

40. Rekha's second birthday was on Saturday 25th July 2009, then on what day was she born?

- (1) Monday (2) Tuesday
(3) Wednesday (4) Thursday

41. In the given alphabetical series which letters are repeated same number of times?

Letters : A B C D B A C A D C D A C D B C

- (1) A and D (2) D and C
(3) A and B (4) D and B

Instructions for Q. Nos. 42 to 46 : There exists a certain relation between first and second term. The same relation exists between third and fourth term. Considering this choose the correct alternative to replace the question mark (?)

42. Goa : Panaji :: Aassam : ?

- (1) Ranchi (2) Kohima (3) Dispur (4) Gangtok

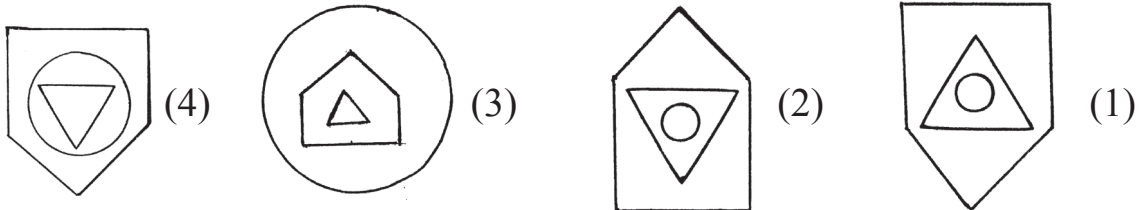
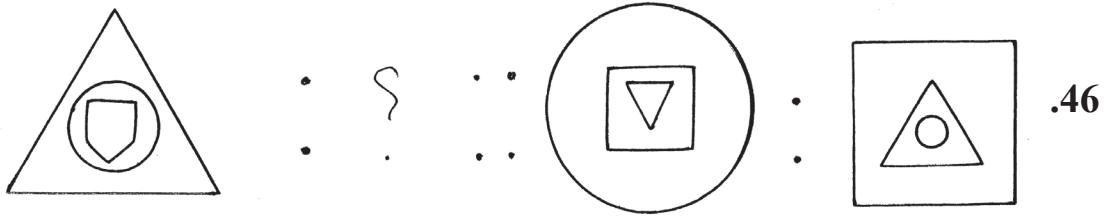
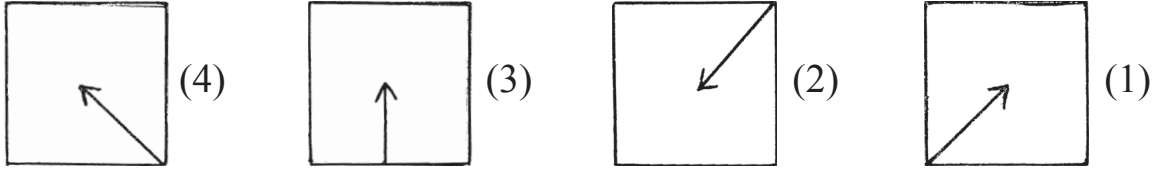
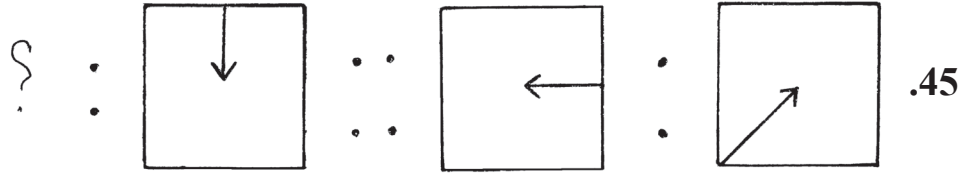
43. 3564 : 6 :: 7827 : ?

- (1) 2 (2) 8 (3) 12 (4) 10

44. 36 : 10 :: 27 : ?

- (1) 26 (2) 16 (3) 15 (4) 24

Space for Rough Work



47. ذیل کے عددی سلسلہ میں عددوں کا مقام تبدیل کرنے پر کتنے مفرد اعداد تیار ہوں گے؟

عددی سلسلہ : 31, 59, 35, 19, 17, 34, 16, 89, 74

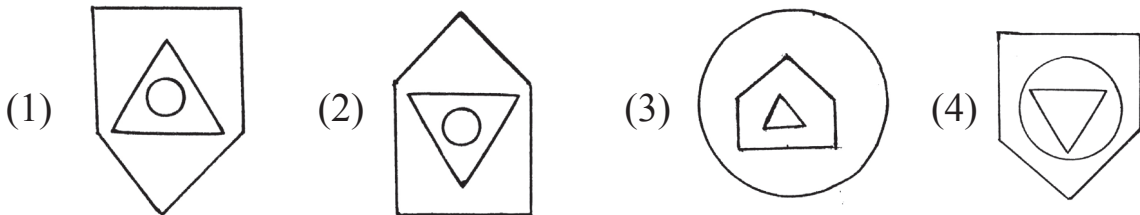
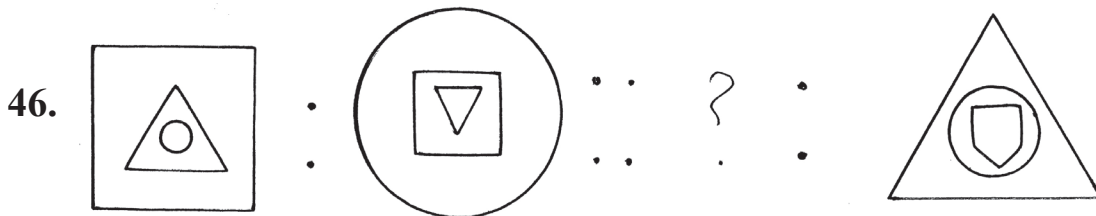
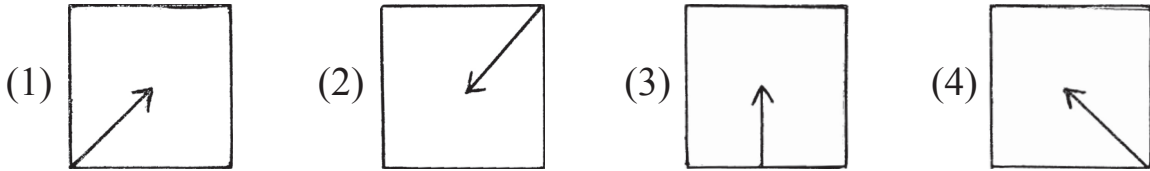
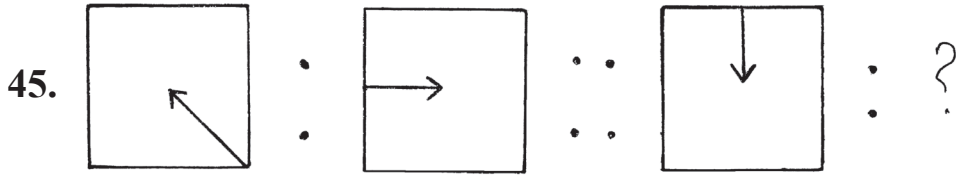
6 (4)

4 (3)

7 (2)

5 (1)

कच्च्या कामासाठी जागा



47. By interchanging the digits of the numbers in the given number series how many Prime numbers will form?

Letters: 31, 59, 35, 19, 17, 34, 16, 89, 74

- (1) 5 (2) 7 (3) 4 (4) 6

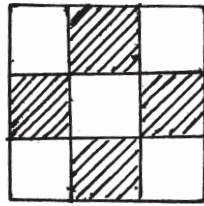
Space for Rough Work

48. ह्रुनी सुलुह : ABCDE FGHIJ KLMNO PQRST UVWXY

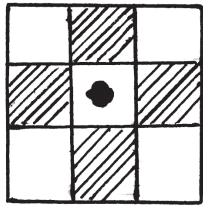
मनुदरुुु डलल ह्रुनी सुलुह मलल 'G' اور 'R' कु दरुडलन हुनुनु ह्रुनु हल- अन कु $\frac{3}{5}$ गुनल ह्रुनु मनुदरुु डलल मलल सुु कुन सुु ह्रुनु कु दरुडलन हल?

'H' اور 'D' (4) 'O' اور 'H' (3) 'S' اور 'K' (2) 'H' اور 'B' (1)

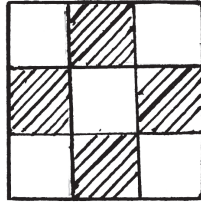
सुवल नुडरु 49 तु 50 कु लनु हदलत:- डलल मलल दु गुनु सुवललु शुुल सुु हुु डहुु मनु वलल शुुल तुडलदलत मलल सुु तुललश कुरलल-.



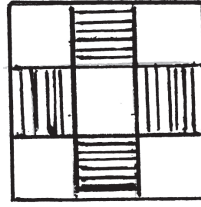
49



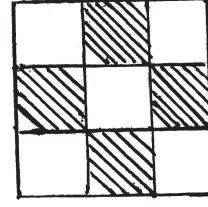
(4)



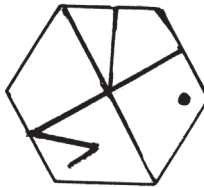
(3)



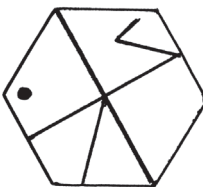
(2)



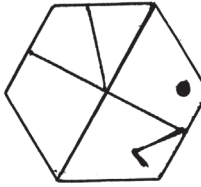
(1)



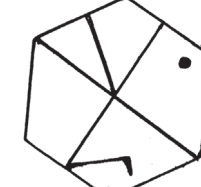
50



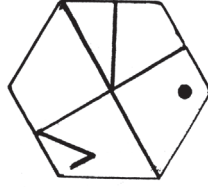
(4)



(3)



(2)



(1)

ककुुडल कलडलसलठी डलगल

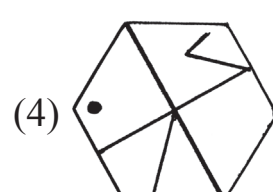
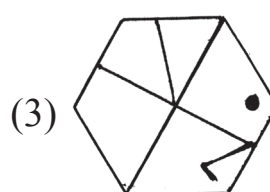
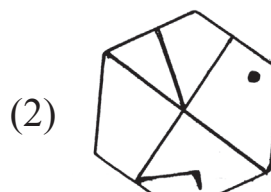
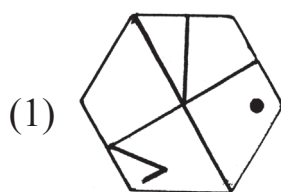
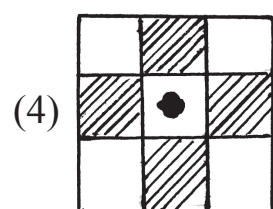
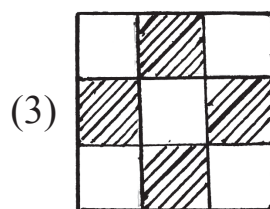
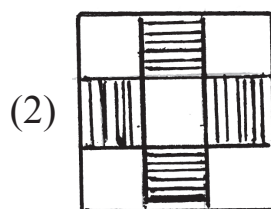
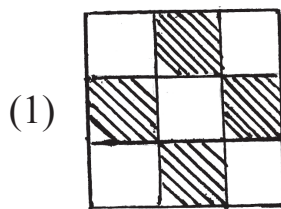
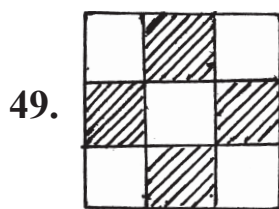
Alphabets : A B C D E F G H I J K L M N O P Q R S T U V W X Y

48. Alphabetical Series : A B C D E F G H I J K L M N O P Q R S T U V W X Y

Find out between which two letters the $\frac{3}{5}$ th of the letters between G and R occurs in the above alphabetical series.

- (1) B and H (2) K and S (3) H and O (4) D and H

Instructions for Q. Nos. 49 to 50 : Find out the figure from the alternatives which exactly matches the question figure.



Space for Rough Work

51. ذیل کے چوکون میں سوالیہ علامت کی جگہ آنے والا عدد متبادل میں سے منتخب کریں؟

2	8	5
7	3	9
3	?	4

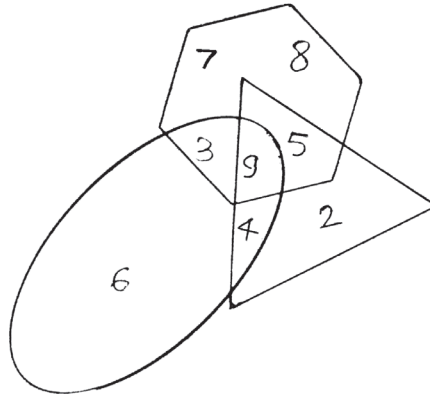
10 (4)

6 (3)

0 (2)

1 (1)

سوال نمبر 52 تا 53 کے لئے ہدایت:- ذیل کے وین خاکے کا مشاہدہ کر کے اس پر منحصر سوالوں کے جوابات متبادلات میں سے منتخب کریں۔



52. صرف مثلث، صرف بیضوی اور صرف مسدس میں موجود اعداد کی جمع کتنی ہوگی؟

27 (4)

15 (3)

23 (2)

16 (1)

53. تینوں اشکال میں موجود مشترک عدد کونسا ہے؟

3 (4)

9 (3)

5 (2)

4 (1)

54. ایک اشارتی زبان میں '5' کو '4' کہا جائے۔ '3' کو '7' کہا جائے۔ '4' کو '2' کہا جائے تو اسی اشارتی زبان میں

$$4 + 3 \times 5 = ? \text{ (کتنا)}$$

60 (4)

30 (3)

36 (2)

19 (1)

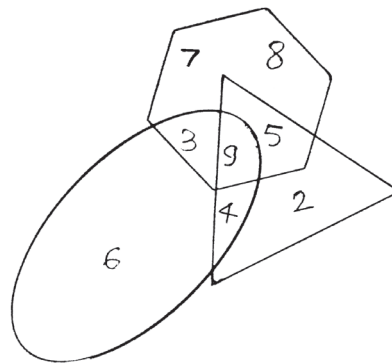
कच्चा कामासाठी जागा

51. See the number arrangement and find the number that will replace the question mark from the alternatives.

2	8	5
7	3	9
3	?	4

- (1) 1 (2) 0 (3) 6 (4) 10

Instructions for Q. Nos. 52 to 53 : Observe the given Venn diagram and answer the questions based on that by selecting the correct alternative.



52. What is the total of the numbers given in the triangle, oval and hexagon only?

- (1) 16 (2) 23 (3) 15 (4) 27

53. Which number is common in the three figures?

- (1) 4 (2) 5 (3) 9 (4) 3

54. In a code language '5' is called '4', '3' is called '7', '4' is called '2', then in the same language $4 + 3 \times 5 = ?$ (how much)

- (1) 19 (2) 36 (3) 30 (4) 60

Space for Rough Work

55. ایک اشاراتی زبان میں \otimes یعنی $\div 7$ ہو تو

$$14 \otimes \bullet = 10$$

$$3 \bullet \square = 13$$

$$42 \otimes \square = ? \text{ کتنا}$$

5 (4)

6 (3)

9 (2)

4 (1)

سوال نمبر 56 تا 60 کے لئے ہدایت:- ذیل کے سوالوں کے شروعات میں تین ارکان دئے گئے ہیں۔ ان کی کچھ خصوصیات کی بناء پر ایک گروہ تیار ہوتا ہے۔ اس گروہ میں شامل ہونے والا رکن متبادلات میں سے منتخب کریں۔

56. دماغ، پھیپھڑے، دل

پیر (4)

جگر (3)

ہاتھ (2)

زبان (1)

57. 125, 27, 343

1 (4)

49 (3)

261 (2)

216 (1)

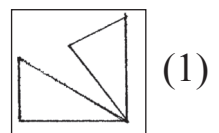
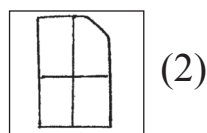
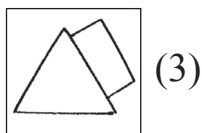
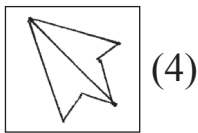
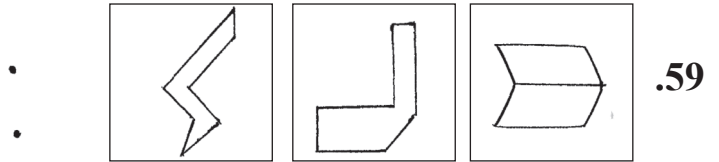
58. 9372, 7612, 8525

9824 (4)

3701 (3)

6083 (2)

5824 (1)



कच्च्या कामासाठी जागा

55. In a code language \otimes means $\div 7$

like wise $14 \otimes \bullet = 10$

$3 \bullet \square = 13$

Then $42 \otimes \square =$ how much?

- (1) 4 (2) 9 (3) 6 (4) 5

Instructions for Q. Nos. 56 to 60 : In each of the following questions three words are given with some common relation, so their group is formed. Select the word from the alternatives given which has the same common feature of the given group.

56. Brain, Lungs, Heart, _____

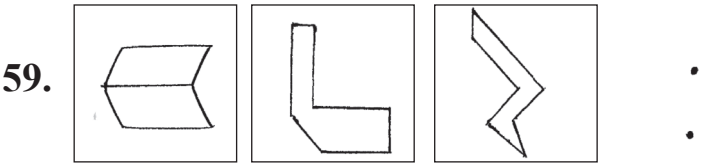
- (1) tongue (2) hand (3) liver (4) leg

57. 343, 27, 125, _____

- (1) 216 (2) 261 (3) 49 (4) 1

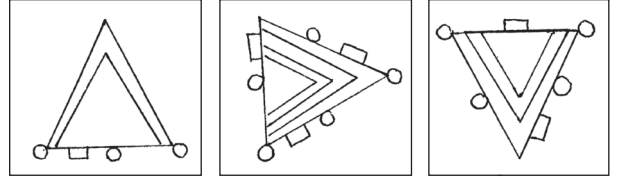
58. 8525, 7612, 9372, _____

- (1) 5824 (2) 6083 (3) 3701 (4) 9824

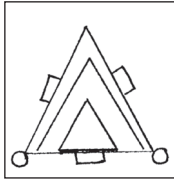


- (1)  (2)  (3)  (4) 

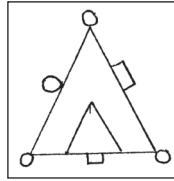
Space for Rough Work



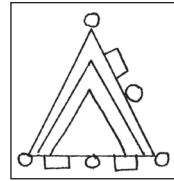
.60



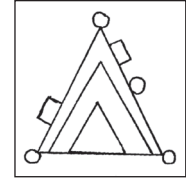
(4)



(3)



(2)



(1)

.61. ذیل کے جدول کا مشاہدہ کر کے اس پر منحصر سوالوں کے جوابات متبادلات میں سے منتخب کریں۔

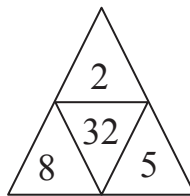
حروف	A	B	C	H	I	O	P	R
علامتیں	Δ	∇	\bullet	+	\times	<	\neq	=

'POOR' اس لفظ کا متضاد لفظ کس طرح لکھا جائے گا؟

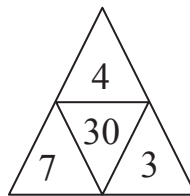
$$+ \bullet \times = (2) \qquad = < < \neq (1)$$

$$+ \nabla \times = (4) \qquad \nabla \Delta \neq \angle (3)$$

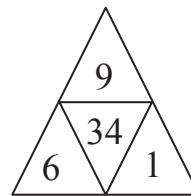
.62. سوالیہ علامت کی جگہ آنے والے اعداد متبادل میں سے منتخب کریں؟



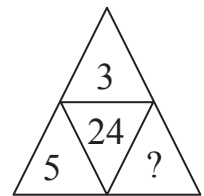
3 (4)



4 (3)



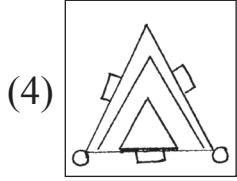
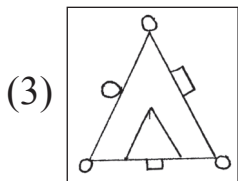
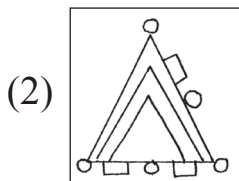
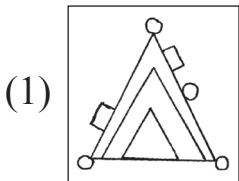
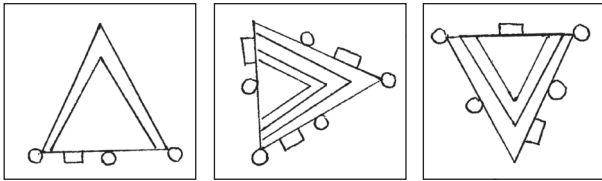
5 (2)



2 (1)

कच्च्या कामासाठी जागा

60.



61. In the following table letters are replaced by symbols.

Letters	A	B	C	H	I	O	P	R
Symbols	Δ	\blacktriangledown	\bullet	+	\times	<	\neq	=

Using above symbols, how will opposite of 'POOR' be written?

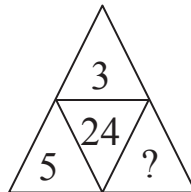
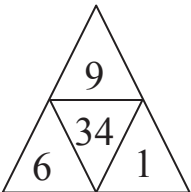
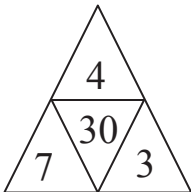
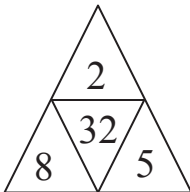
(1) $\neq < < =$

(2) $= \times \bullet +$

(3) $\angle \neq \Delta \blacktriangledown$

(4) $= \times \blacktriangledown +$

62. Observe the arrangement of numbers. Find the correct alternative to replace the question mark (?)



(1) 2

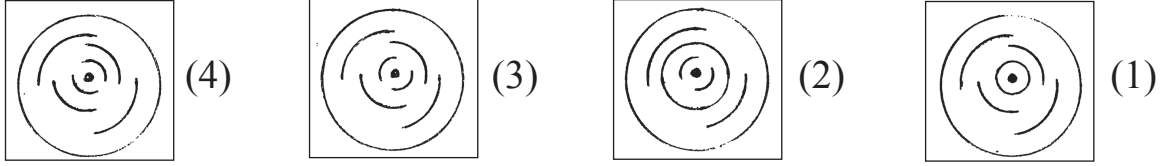
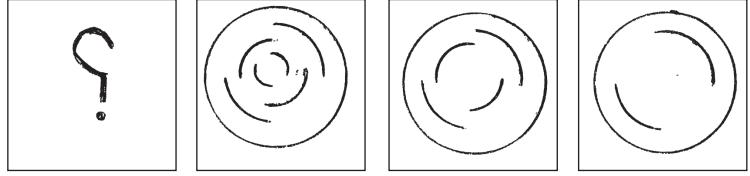
(2) 5

(3) 4

(4) 3

Space for Rough Work

63. ذیل کے اشکال میں ایک خاص قسم کی ترتیب ہے۔ وہ ترتیب پہچان کر سوالیہ علامت کی جگہ کو نسی شکل آئے گی؟ تلاش کریں۔



64. ہاتھی کو شیر کہا جائے؟ شیر کو خرگوش کہا جائے، خرگوش کو شیر بہر کہا جائے، شیر بہر کو بھالو کہا جائے تو ہمارا قومی جانور کسے کہا جائے گا؟

(1) شیر (2) خرگوش (3) ہاتھی (4) شیر بہر

65. ذیل کے علامتی سلسلہ میں سوالیہ علامت کی جگہ کو نسا علامتی گروہ آئے گا؟



66. ذیل کے عددی سلسلہ میں غلط رکن پہچانئے۔

11, 27, 51, 83, 102, 171

102 (4)

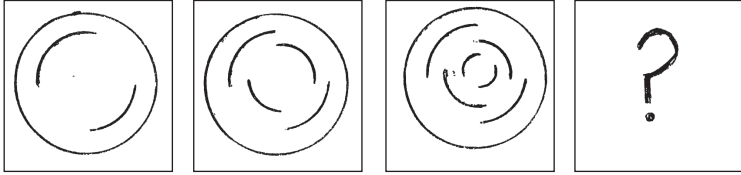
171 (3)

27 (2)

51 (1)

कच्च्या कामासाठी जागा

63. There is a typical order in the given figures observe them and select the correct alternative to replace the question mark (?)

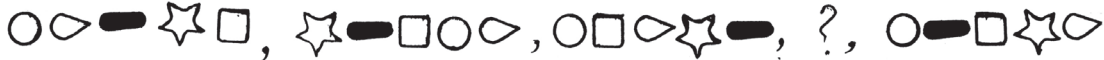


- (1) (2) (3) (4)

64. If elephant is called tiger, tiger is called rabbit, rabbit is called lion, and lion is called bear, then who will be called our national animal?

- (1) tiger (2) rabbit (3) elephant (4) lion

65. Observe the given series and find out which symbols will replace the question mark (?)



- (1) (2) (3) (4)

66. In the given number series find out the odd term.

11, 27, 51, 83, 102, 171

- (1) 51 (2) 27 (3) 171 (4) 102

Space for Rough Work

67. ایک اشاراتی زبان میں NET=765, ANT = 276, BAT = 278 میں 'BEAN' یہ لفظ کس طرح لکھا جائے گا؟ (حروف اور اعداد کی ترتیب ایک جیسی ہوگی ایسا ضروری نہیں ہے۔)

8356 (4)

7685 (3)

8526 (2)

8572 (1)

68. مندرجہ ذیل میں کونسا عمل نامناسب ہے۔ وہ متبادلات میں سے منتخب کریں۔

(1) عالیہ استعمال شدہ پھولوں سے کمپوسٹ کھاد تیار کرتی ہے۔

(2) ادیبہ ہمیشہ بازار سے خریدی ہوئی اشیاء پلاسٹک کی تھیلیوں میں ہی لاتی ہے۔

(3) رخسانہ سماجی کاموں میں حصہ لیتی ہے۔

(4) فلک آلودگی کے خلاف اشتہار کرتی ہے۔

69. بیٹے کی موجودہ عمر والدہ کی موجودہ عمر سے $\frac{1}{2}$ گنا سے 4 کم اور خالہ کی موجودہ عمر سے $\frac{1}{3}$ گنا سے 2 سے زیادہ ہے اگر والدہ کی موجودہ عمر 42 سال ہو تو خالہ کی دو سال قبل کی عمر کتنی ہوگی؟

40 (4)

47 (3)

45 (2)

43 (1)

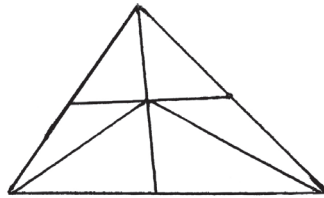
70. ذیل کی شکل میں کل کتنے مثلث ہے؟

9 (1)

13 (2)

15 (3)

12 (4)



71. پانچ لوگوں کے دوڑ کے مقابلے میں جمیل کے آگے احمد تھا۔ احمد اور سمیر کے درمیان غفور اور جمیل اور احمد کے درمیان حافظ تھا تو نیچوں نیچ میں کون ہوگا؟

احمد (4)

غفور (3)

سمیر (2)

جمیل (1)

कच्च्या कामासाठी जागा

67. In a code language BAT = 278, ANT = 276, NET = 765, then in the same code how 'BEAN' is written? (It is not necessary that the order of the letters and number is same.)

- (1) 8572 (2) 8526 (3) 7685 (4) 8356

68. From the given statements whose activity is incorrect. Choose the correct alternative.

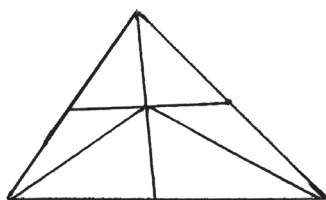
- (1) Aditi prepares compost manure from the dried flowers and leaves.
 (2) Sharvin always brings things from the market in plastic bags.
 (3) Rukhsana actively participates in the social activities.
 (4) Palak promotes antipollution advertisement.

69. A son's present age is 4 less than $\frac{1}{2}$ of the mother's present age and 2 more than $\frac{1}{3}$ rd of the aunt's present age. If the present age of his mother is 42 years then what was the age of his aunt two years ago?

- (1) 43 (2) 45 (3) 47 (4) 40

70. How many triangles are there in the given figure?

- (1) 9
 (2) 13
 (3) 15
 (4) 12

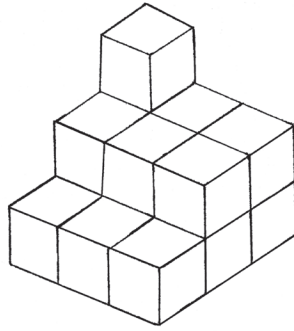


71. In a running race of 5 students, Ahmed was ahead of John. Gautam was between Ahmed and Sameer. Harbhajan was between John and Ahmed. who was at the centre?

- (1) John (2) Sameer (3) Gautam (4) Ahmed

Space for Rough Work

72. ذیل کی شکل میں ظاہر کئے گئے طریقے سے مساوی جسامت کے مکعبی کنڈوں کو ترتیب میں لگا کر ایک مجسمہ تیار کیا گیا تو بتائیے اس میں کل کتنی سطحیں نظر آئے گی؟



11 (4)

10 (3)

8 (2)

12 (1)

73. ایک 1.5 کلو میٹر لمبائی کے راستے کے دونوں جانب 60 میٹر فاصلے پر ایک بجلی کا کھمبہ، اس طرح بجلی کے کھمبے لگانے پر کل کتنے کھمبے درکار ہوں گے؟

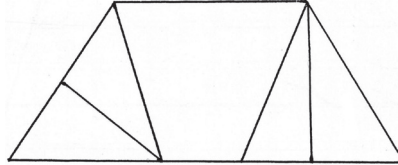
52 (4)

50 (3)

26 (2)

25 (1)

74. ذیل کی شکل میں کتنے ذوارلعبۃ الاصلاح ہیں؟



6 (4)

7 (3)

4 (2)

5 (1)

75. جماعت میں استاد نہ ہونے پر دو طلباء کی لڑائی شروع ہوئی، اس وقت جماعت کے مونیٹر کی حیثیت سے تم پہلا کام کیا کرو گے؟

(1) وہ دونوں کیسے لڑتے ہیں وہ دیکھتے رہیں گے۔

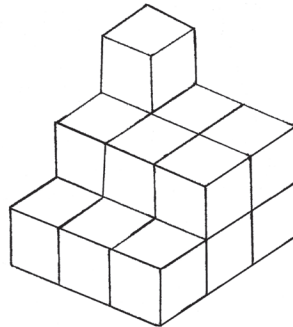
(2) لڑائی کے واقعہ سے معلم جماعت کو آگاہ کریں گے۔

(3) دونوں کو سمجھا کر صلح کرانے کی کوشش کریں گے۔

(4) ان دونوں کی مخالفت کریں گے۔

कच्च्या कामासाठी जागा

72. The clues of same dimension are arranged according to the given figure and a new figure is formed. How many faces will be there of such figure?

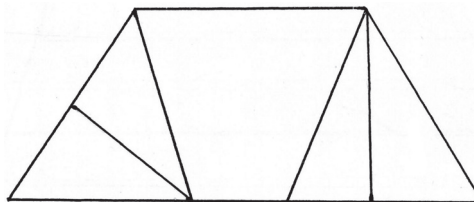


- (1) 12 (2) 8 (3) 10 (4) 11

73. If the electric poles are erected at 60m distance on 1.5 km long road on both the sides, how many poles will be erected?

- (1) 25 (2) 26 (3) 50 (4) 52

74. What is the number of quadrilaterals in the adjacent figure?



- (1) 5 (2) 4 (3) 7 (4) 6

75. The teacher is not in the class and two students enter into a quarrel. What will you do as a monitor?

- (1) You will see how they fight.
- (2) Inform the subject of fight to the class teacher.
- (3) You will convince them and try to sort out the issue.
- (4) You will prohibit both of them.

Space for Rough Work

Space for Rough Work