

Section I

3rd Language

Q. 1 to Q. 3 Read the passage carefully and answer the following questions.

Poseidon was the Greek god of the sea. He carried trident which was the symbol of his power. He split mountains with his trident and rolled the broken parts into the sea. He had a glittering palace in the depths of the Aegeon Sea.

1. Who was the Greek god of the sea ?

- (1) Poseidon (2) Greek
(3) Aegeon (4) Power

2. What did Poseidon carry ?

- (1) palace (2) trident
(3) depth (4) sea

3. The trident was the symbol of _____ .

- (1) idea (2) depth
(3) money (4) power

4. Choose the correct punctuation mark which is not present in the given box.

,	?
!	.

- (1) ? (2) !
(3) ; (4) .

Space for Rough Work

5. Complete the word register.

drum, cymbals, flute, _____

- (1) sieve
- (2) stain
- (3) tambourine
- (4) grater

6. Look at the greeting card. Read the message. Choose the proper date.

“Dear Teacher
We love you
So much !”
.....Your students.

- (1) On 5th September
- (2) On 15th August
- (3) On 2nd October
- (4) On 14th November

7. Find out the odd term.

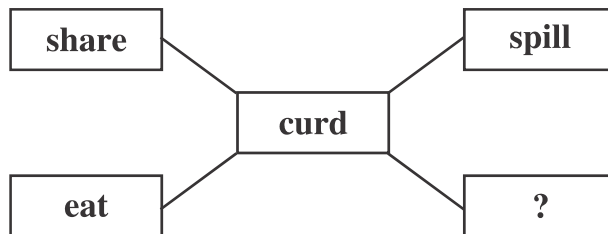
- (1) Cucumber
- (2) Fenugreek
- (3) Spinach
- (4) Coriander

8. Select the correct option.

The arrow  shows _____ direction.

- (1) right
- (2) upward
- (3) left
- (4) downwards

9. Select the proper action word.



- (1) wash
- (2) cut
- (3) peel
- (4) churn

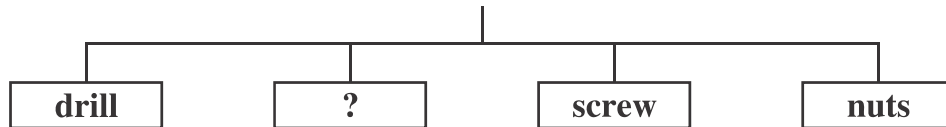
Space for Rough Work

10. She eats breakfast _____ her parents.

- (1) off (2) by
(3) with (4) at

11. Choose the correct alternative.

Tools used by Mechanic.



- (1) roast (2) space
(3) cylinder (4) spanner

12. Select the correct answer.

How many letters should be capital in the given sentence.

i live in aurangabad.

- (1) 3 (2) 1
(3) 0 (4) 2

13. Solve the riddle.

I use a stethoscope and examine patients.

Who am I?

- (1) a mechanic (2) a potter
(3) a cobbler (4) a doctor

Space for Rough Work

14. Choose the correct punctuation mark for the given sentence.

What a great surprise.

- (1) Apostrophe (2) Exclamation mark
(3) Comma (4) Full Stop

15. Complete the motto.

_____ are our friends.

- (1) Library (2) Books
(3) Teacher (4) School

16. Arrange the numbers properly and make a meaningful word.

o	r	e	j	u	n	y
1	2	3	4	5	6	7

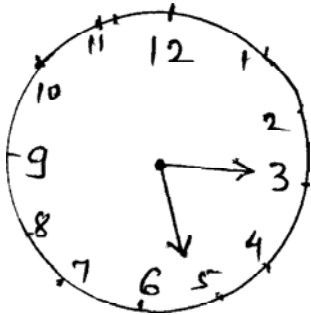
- (1) 1452673 (2) 4172635
(3) 4152637 (4) 1542637

17. Choose correct alternative to seek a permission.

- (1) I will open the window (2) Open the window
(3) Please open the window (4) May I open the window ?

18. Choose the correct option.

What time is it ?



- (1) Quarter past three
(2) Quarter past five
(3) Five past three
(4) Three past five

Space for Rough Work

19. Select the correct alternative

Let's make a _____ for shopping.


- (1) list (2) least
(3) lest (4) leest

20. Fill in the blank by using the correct article.

_____ Eiffel Tower is in Paris.

- (1) A (2) The
(3) An (4) No article

21. Look at the given picture. Choose the correct conversation.



- (1) A : The bubbles look so lovely !
B : Let's buy two.
- (2) A : Here are your potatoes. Would you like to buy tomatoes ?
B : Sure.
- (3) A : Please give us two full glasses.
B : Mamma, I want some ice in my juice.
- (4) A : Do you like roasted corn cobs ?
B : Oh, I love them with salt.

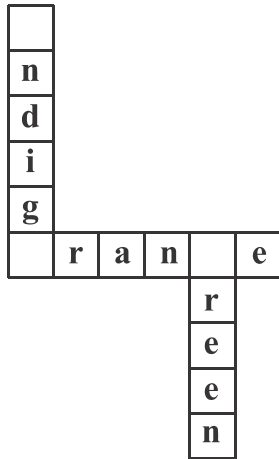
Space for Rough Work

22. Select the correct option.

My number is 12. So I am _____ in the row.

- (1) twelfth
- (2) twelfth
- (3) twelve
- (4) tweth

23. Complete the puzzle.



- (1) b, l, m
- (2) k, g, i
- (3) i, o, g
- (4) v, p, i

24. Choose the word that comes alphabetically first

- (1) Tuesday
- (2) Friday
- (3) Sunday
- (4) Monday

25. Choose the incorrect pair.

- (1) a tiny star
- (2) a rich man
- (3) a rainy day
- (4) a sharp day

Space for Rough Work

विभाग II

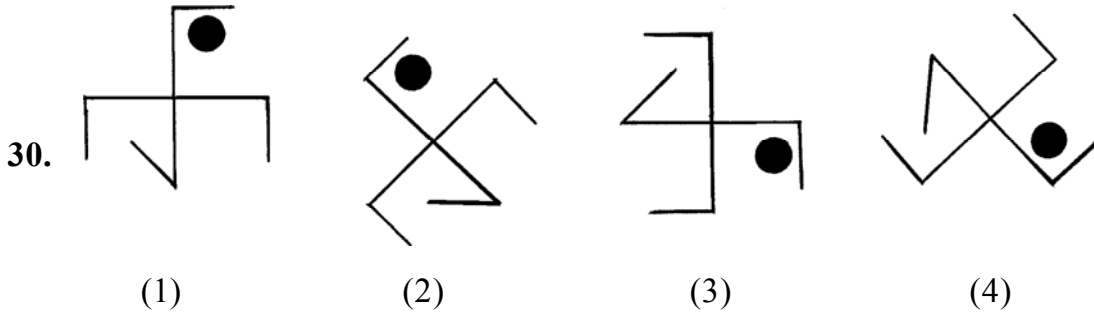
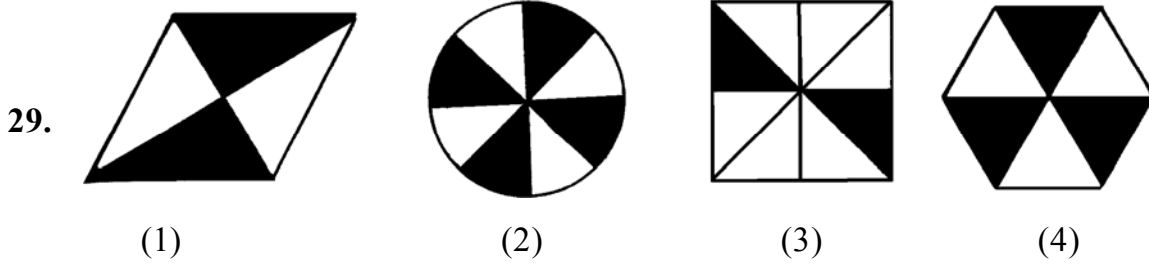
बुद्धिमत्ता चाचणी

26. 'कमल, तगर, प्रहार, मरम, प्रसार' के प्रत्येक शब्द के मध्य भाग में आनेवाले अक्षरों को लेकर उनसे अर्थपूर्ण शब्द तैयार करो। उस अर्थपूर्ण शब्द के मध्य भाग में आनेवाला अक्षर कौन सा है ? लिखो।

- (1) हा (2) सा (3) ग (4) र

प्र. 27 ते 31 के लिए सूचना : समूह में न बैठनेवाला पद पहचानो।

27. (1) आमासय (2) ग्रसिका
 (3) छोटी आँत (4) फेफड़े
28. (1) राजस्थान : गंगापुर (2) महाराष्ट्र : पाटण
 (3) मध्यप्रदेश : भीमभेंटक (4) गुजरात : लांघणज



31. (1) 153 (2) 136 (3) 102 (4) 115

Space for Rough Work

Section II

Intelligence Test

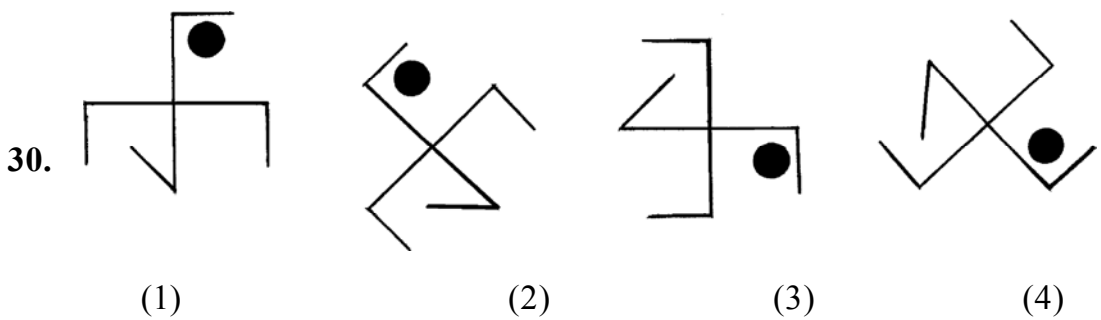
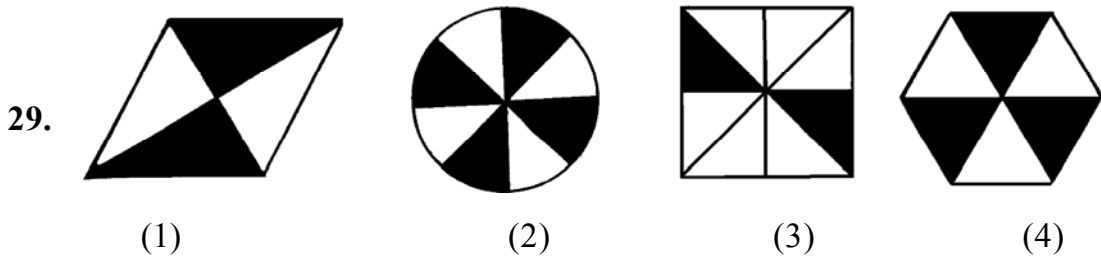
26. Make a meaningful word taking the second letter of the given words. 'PLAY, IVY, HENCE, SCORE, PEAR, FROG' From that meaningful word which letter will be at the 3rd place from right ?

- (1) E (2) V (3) L (4) R

Q27 to Q31 Direction: Find the odd term

27. (1) Stomach (2) Food Pipe
 (3) Small intestine (4) Lungs

28. (1) Rajasthan: Gangapur (2) Maharastra: Patane
 (3) Madhya Pradesh: Bhimbetka (4) Gujarat: Langhnaj



31. (1) 153 (2) 136 (3) 102 (4) 115

Space for Rough Work

32. निम्न संख्यामालिका में प्रश्नचिह्न की जगह कौन सी संख्या आयेगी ?

13, 17, 25, 32, 37, ?

- (1) 47 (2) 42 (3) 45 (4) 46

33. 'मित्र, संघ, कारागृह, गर्दी, प्रदूषण, वस्तु' इस शब्दसमूह में जोड़ाक्षरयुक्त शब्दों की अपेक्षा जोड़ाक्षर हीन शब्द कितने कम या अधिक हैं ?

- (1) 2 कम (2) 1 कम (3) 2 अधिक (4) 3 कम

34. यदि गाय को घोड़ा, घोड़े को हाथी, हाथी को बकरी और बकरी को ऊंट कहा जाय तो सूँड़वाला प्राणी कौन सा है ?

- (1) हाथी (2) गाय (3) बकरी (4) ऊंट

प्र. 35 से 39 तक के लिए सूचना : प्रश्न के शुरूवात में तीन पद दिये गये हैं। उनमें कुछ विशेषताएँ हैं। जिससे उनका एक समूह तैयार होता है। इस समूह में बैठने वाला पद पर्याय में से निश्चित करो।

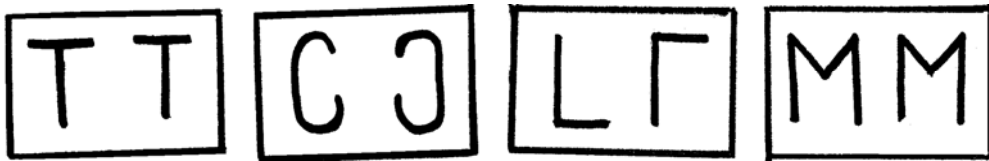
35. खुजली, खसरा, दाद

- (1) मलेरिया (2) कालरा (3) चेचक (4) जुलाब

36. भौरा, तितली, मक्खी

- (1) बिच्छू (2) मच्छर (3) केचुआ (4) जोंक

37.



(1)

(2)

(3)

(4)

Space for Rough Work

32. Find the number which will replace the question mark (?) in the given number series.

13, 17, 25, 32, 37, ?

- (1) 47 (2) 42 (3) 45 (4) 46

33. 'Give me the strength lightly to bear my joys and sorrows.' In the statement how many times vowels have occurred ?

- (1) 13 times (2) 8 times (3) 7 times (4) 16 times

34. If calf is called cub, cub is called lamb, lamb is called kitten, kitten is called kid, kid is called puppy then what is the young ones of sheep called ?

- (1) kid (2) cule (3) kitten (4) pup

Q35 to Q39 Direction: In each of the following question three words are given with some common characteristics so their group is formed. Select a word from the options given, which has the same common feature of the given group.

35. Itching, Cough & Cold, Corn, _____

- (1) cold fever (2) cholera (3) measles (4) dysentery

36. Choir, heap, pile, _____

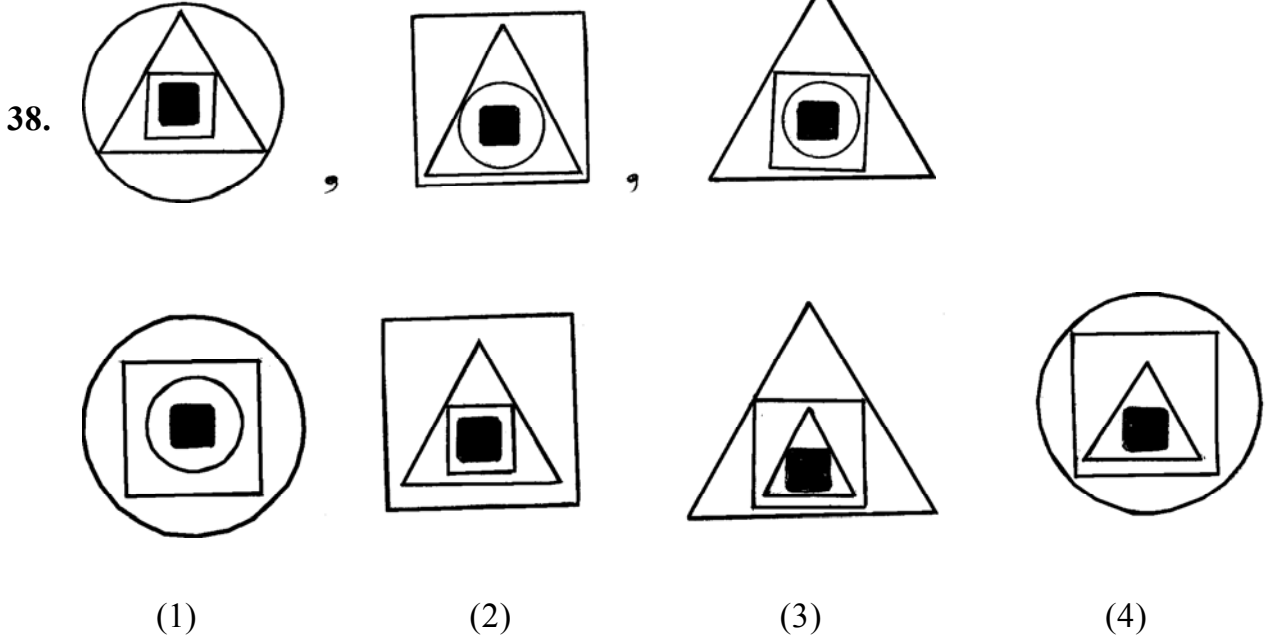
- (1) humming (2) crowd (3) march (4) mile

37. 



- (1) (2) (3) (4)

Space for Rough Work



39. $2\frac{1}{4}, 4\frac{2}{8}, 3\frac{1}{4}$ _____

(1) $5\frac{4}{16}$

(2) $5\frac{1}{2}$

(3) $6\frac{2}{4}$

(4) $7\frac{1}{8}$

40. एक पंक्ति में कविता का शुरू से 28वा व अन्त से 32 वाँ क्रमांक है। इस पंक्ति के मध्य में रहने वाली सुवर्णा के पीछे मनीषा खड़ी है। सुवर्णा व मनीषा के बीच में 10 लड़कियाँ हैं। तो इस पंक्ति में मनीषा का अंत से क्रमांक लिखो।

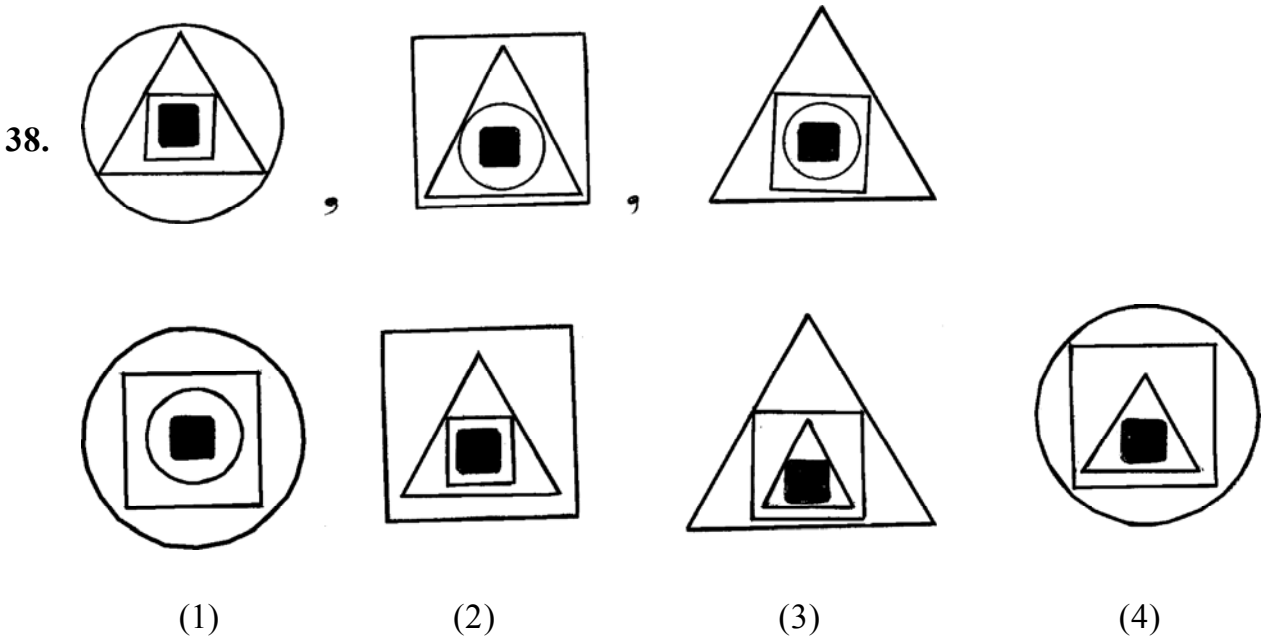
(1) 20 वाँ

(2) 18 वाँ

(3) 40 वाँ

(4) 19 वाँ

Space for Rough Work



39 $2\frac{1}{4}, 4\frac{2}{8}, 3\frac{1}{4}$ _____

- (1) $5\frac{4}{16}$ (2) $5\frac{1}{2}$
 (3) $6\frac{2}{4}$ (4) $7\frac{1}{8}$

40. In a queue Kavita's position is 28th from the start and 32rd from the last. In the same queue Manisha is standing behind Suvarna who is standing in the middle position of the row. In between Suvarna and Manisha there are 10 girls then what will be the order of Manisha from the last ?


- (1) 20th (2) 18th
 (3) 40th (4) 19th

Space for Rough Work

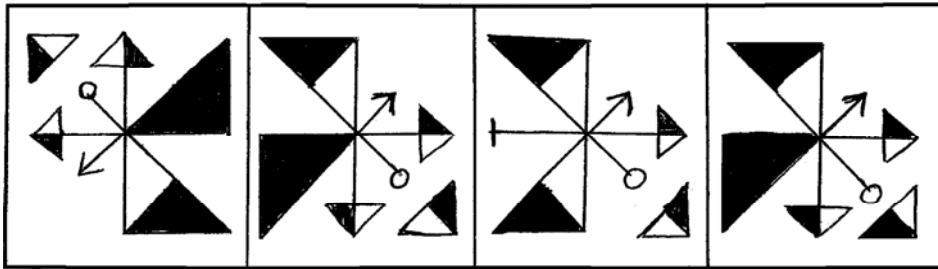
अक्षरमाला : ABCDE FGHIJ KLMNO PQRST UVWXYZ

प्र. 41 व 42 के लिए सूचना : आगे दी गई प्रश्नाकृति को पानी पर खड़ी करने पर उसका पानी में प्रतिबिंब कैसा दिखाई देगा उसे उत्तर आकृतियों में से खोजो ।

41. प्रश्न-आकृति



उत्तर-आकृति




(1)

(2)


(3)

(4)

42. प्रश्न-आकृति



उत्तर-आकृति



(1)

(2)

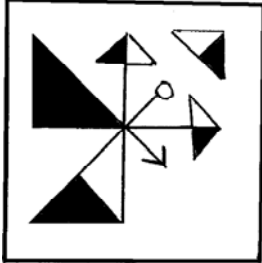
(3)

(4)

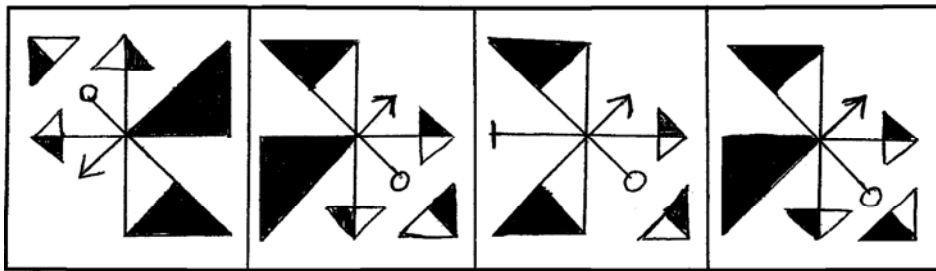
Space for Rough Work

Q41. and Q42 Direction: If the question figure is held vertical above water surface, identify its water reflection and select the correct alternative.

41. Question



Answer



(1)

(2)


(3)

(4)

42. Question



Answer



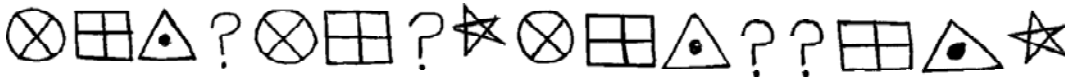


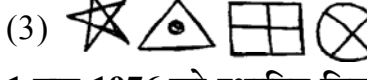
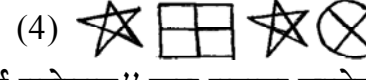
(1)

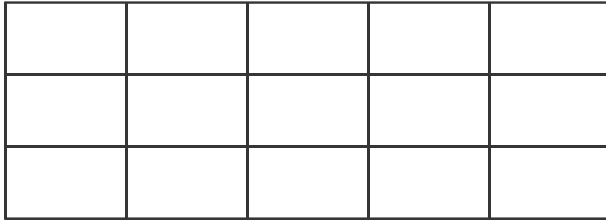
(2)

(3)

(4)

Space for Rough Work

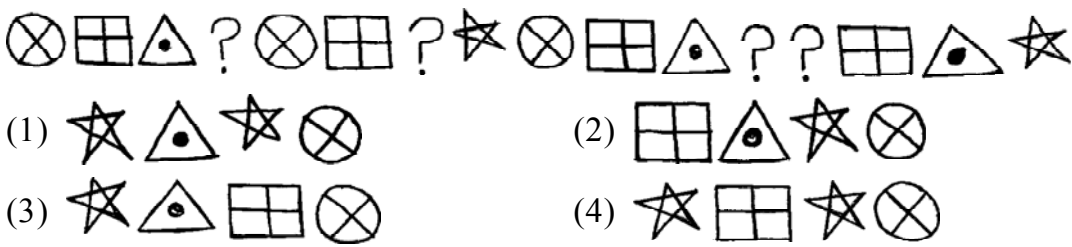
43. सूर्योदय के समय विश्वास चलने के लिए निकला तब सूर्य उसके बाईं तरफ था। दो किलोमीटर चलने के बाद वह दाहिनी तरफ समकोण में मुड़ा। कुछ दूर चलने के बाद वह फिर दाहिनी ओर समकोण में मुड़ा हो तो अब उसके बांये हाथ की ओर कौन सी दिशा होगी ?
 (1) पूर्व (2) पश्चिम (3) उत्तर (4) दक्षिण
44. कविता, सविता व सलमा के उम्र का योग 4 वर्ष पहले 28 वर्ष था तो 4 वर्ष के बाद उनके उम्र का योग कितना होगा ?
 (1) 32 (2) 40 (3) 36 (4) 52
45. सुयश क्रिकेट व फुटबाल खेलता है, राजेन्द्र केवल हॉकी खेलता है, शैलेश फुटबाल व कबड्डी खेलता है तथा दीपक फुटबाल को छोड़कर सभी खेल खेलता है। तो कबड्डी खेलने वाले कौन ?
 (1) दीपक व राजेन्द्र (2) केवल शैलेश (3) सुयश व शैलेश (4) दीपक व शैलेश
46. आगे दी गयी चिह्नों की मालिका में प्रश्नचिह्न की जगह कौन सा चिह्न समूह आयेगा ?

 (1)  (2) 
 (3)  (4) 
47. 1 जून 1976 को स्थापित विद्यालय का "स्वर्ण महोत्सव" कब मनाया जायेगा ?
 (1) 1 जून 2001 (2) 1 जून 2036 (3) 1 जून 2026 (4) 1 जून 2025
48. दी गई आकृति में चतुर्भुजों की संख्या कितनी ?



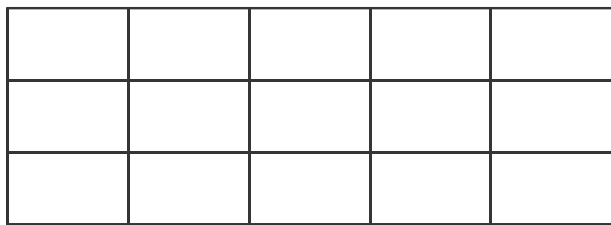
- (1) 15 (2) 21 (3) 90 (4) 120
49. निम्नलिखित संख्यामालिका में गलत पद पहचानों।
 3, 11, 27, 57, 123, 251
 (1) 123 (2) 57 (3) 27 (4) 11

Space for Rough Work

43. During the sunrise, Vishwas started walking that time the sun was to his left. He walked 2 km and turned 90° to his right. Again he walked for a while and turned 90° to his right, then which direction is to his left now ?
 (1) East (2) West (3) North (4) South
44. Total ages of Kavita, Savita and Salma four years before was 28 years, then what will be the total of their ages four years hence ?
 (1) 32 (2) 40 (3) 36 (4) 52
45. Suyash plays cricket and football, Rajendra plays only hockey, Shailesh plays football and Kabaddi and Deepak plays all sports except football, then who play Kabaddi ?
 (1) Deepak and Rajendra (2) Only Shailesh
 (3) Suyash and Shailesh (4) Deepak and Shailesh
46. Which group of symbols will occur at the place of question mark in the given series of symbols ?



47. 'Golden Jubilee' celebrations of the school will be on which day whose 'Foundation Day' is 1st June, 1976 ?
 (1) 1 June 2001 (2) 1 June 2036 (3) 1 June 2026 (4) 1 June 2025
48. How many squares are there in the given figure ?



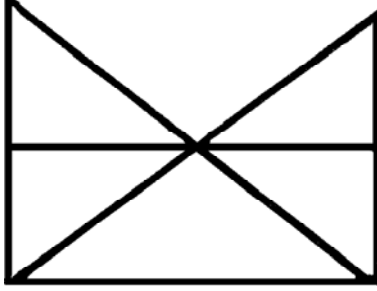
- (1) 15 (2) 21 (3) 90 (4) 120
49. Find the odd term of the given number series.
3, 11, 27, 57, 123, 251
 (1) 123 (2) 57 (3) 27 (4) 11

Space for Rough Work

50. सन 2015 का 'स्वतंत्रता दिवस' रविवार को था। तो सन 2016 का 'शिक्षण दिवस' किस दिन था ?

- (1) शनिवार (2) बुधवार (3) रविवार (4) शुक्रवार

51. दी गई आकृति में त्रिभुज व चतुर्भुज की क्रम से संख्या कितनी है ?



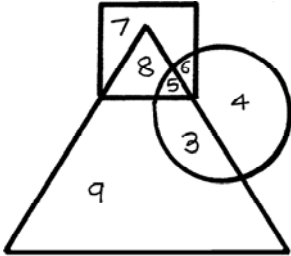
- (1) 11 व 7 (2) 9 व 5 (3) 11 व 5 (4) 11 व 3

52. निम्न संख्यामालिका में प्रश्नचिह्न के स्थान पर कौन सी संख्या आयेगी ?

121, 169, 225, 289, ?

- (1) 334 (2) 400 (3) 246 (4) 361

53. आगे दी गई आकृति में वृत्त में क्रीडांगण स्वच्छ करने वाले विद्यार्थी, त्रिभुज में बाग स्वच्छ करने वाले विद्यार्थी व चतुर्भुज में कक्षा स्वच्छ करने वाले विद्यार्थी दिखाये गये हैं। आकृति का निरीक्षण करके पूछे गए प्रश्न का उत्तर पर्याय में से चुनो।

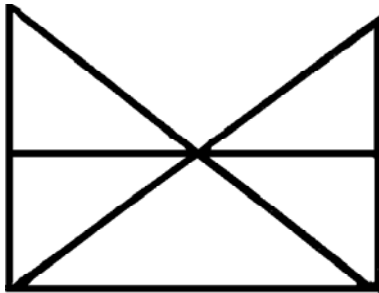


केवल क्रीडांगण व बाग स्वच्छ करनेवाले विद्यार्थी कितने हैं ?

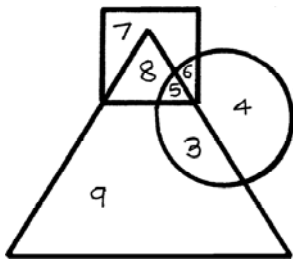
- (1) 3 (2) 7 (3) 6 (4) 5

Space for Rough Work

50. In 2015, Independence Day was on Sunday. On which day 'Literacy Day' will fall in the year 2016?
 (1) Saturday (2) Wednesday (3) Sunday (4) Friday
51. Each of the alternatives given below the figure indicate the number of triangles and quadrilaterals respectively. Observe the figure and choose the correct option.




- (1) 11 and 7 (2) 9 and 5 (3) 11 and 5 (4) 11 and 3
52. Which number will replace the question mark in the given number series.
 121, 169, 225, 289 ?
 (1) 334 (2) 400 (3) 246 (4) 361
53. In the given Venn diagram the students who clean the ground are shown in the circle, those who clean the garden are shown in the triangle and those who clean the classrooms are shown in the square. Observe the figure and answer the question by choosing the correct alternative.



- How many students clean only ground and the garden ?
 (1) 3 (2) 7 (3) 6 (4) 5

Space for Rough Work

54. दी गई आकृति में घनाकृति गुटके कितने ?



(1) 7

(2) 19

(3) 16

(4) 20

प्र. 55 व 56 के लिए सूचना : प्रश्नों में प्रश्नाकृति की दर्पण में प्रतिमा कैसे दिखेगी उसे पर्यायी उत्तर आकृतियों में से निश्चित करो ।

55. प्रश्न-आकृति



उत्तर-आकृति



(1)



(2)




(3)



(4)

Space for Rough Work

54. How many cubicle boxes are there in the given figure ?



- (1) 7 (2) 19 (3) 16 (4) 20

Q55 and Q56 Direction: Find out the mirror image of each of the following question figure from the alternatives given.

55. Question



Answers



(1)



(2)



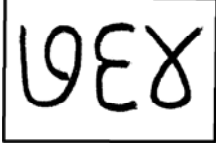
(3)



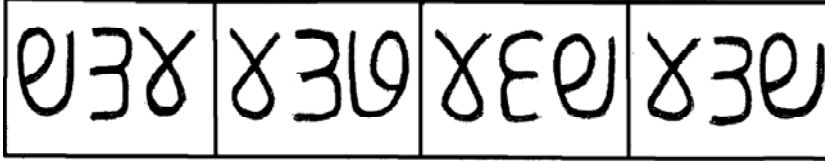
(4)

Space for Rough Work

56. प्रश्न-आकृति



उत्तर-आकृति



(1)

(2)

(3)

(4)

57. प्रश्न में दी गई वेन आकृति किस पर्याय के घटकों से सही जुड़ेगी वह पर्याय चुनो ।



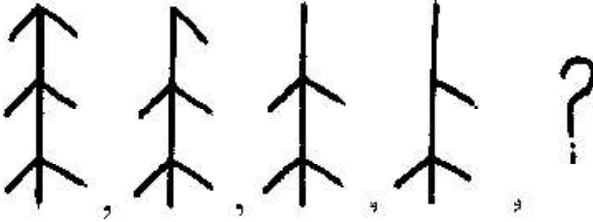
(1) अन्नघटक, पिष्टमय पदार्थ, गेहूँ

(2) भारत, महाराष्ट्र, कर्नाटक

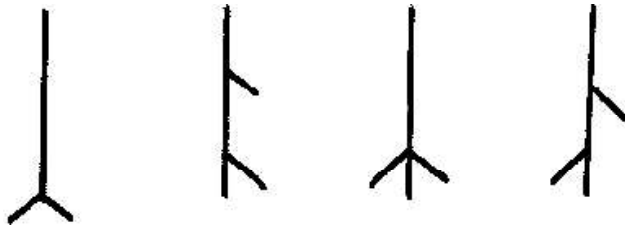
(3) खेल, क्रिकेट, बैटबॉल

(4) तेलंगाना, राजस्थान, गोवा

58. निम्न आकृतियों में विशिष्ट प्रकार का क्रम है । वह क्रम पहचानकर प्रश्नचिह्न के स्थान पर कौन सी आकृति आयेगी उसे खोजो ।



उत्तर-आकृति



(1)

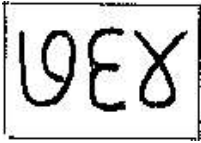
(2)

(3)

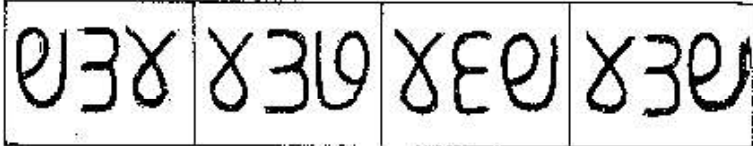
(4)

Space for Rough Work

56. Question

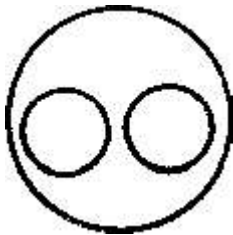


Answers




(1) (2) (3) (4)

57. Select the alternative which will match exactly to the Venn diagram given in the question.

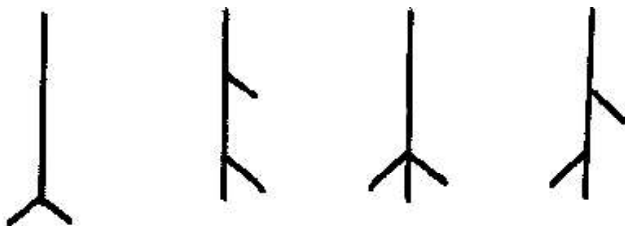


- (1) Components of food, starchy food, Wheat
- (2) India, Maharashtra, Karnataka
- (3) Sport, Cricket, Batball
- (4) Telangana, Rajasthan, Goa

58. In the given figures there is a specific order. Observe the order and find out the figure to replace the question mark.





Answers



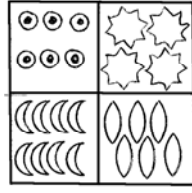
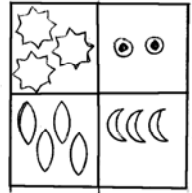
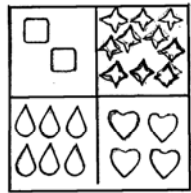
(1) (2) (3) (4)

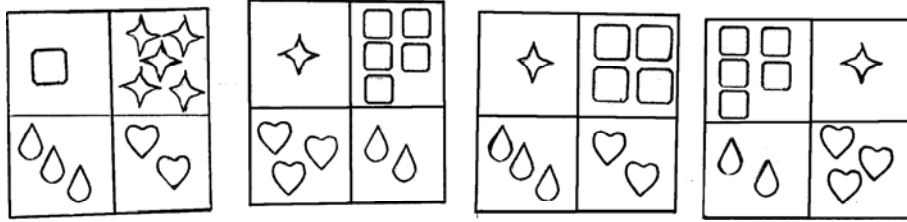
Space for Rough Work

प्र. 59 से 63 तक के लिए सूचना : आगे दिये गये प्रश्नों में पहले व दूसरे पदों का जैसा संबंध है वैसा ही संबंध तीसरे व चौथे पदों में है । वह संबंध खोजकर प्रश्नचिह्न की जगह पर योग्य पर्याय लिखो ।

59.  : बंदरगाह :  : ?

- (1) किला (2) दीपगृह (3) हवाईमार्ग (4) खदान

60.  :  ::  : ?



- (1) (2) (3) (4)

61.  ::  : ?

- (1)  (2) 
 (3)  (4) 

62. 8 : 504 :: 6 : ?

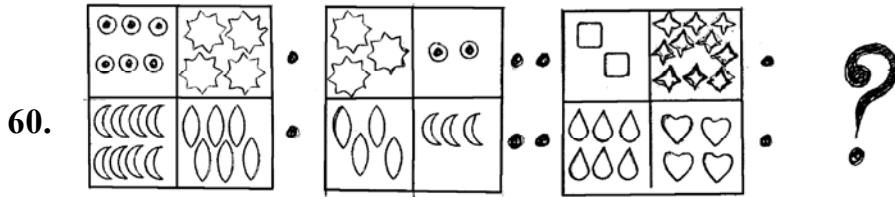
- (1) 222 (2) 216 (3) 210 (4) 209

Space for Rough Work

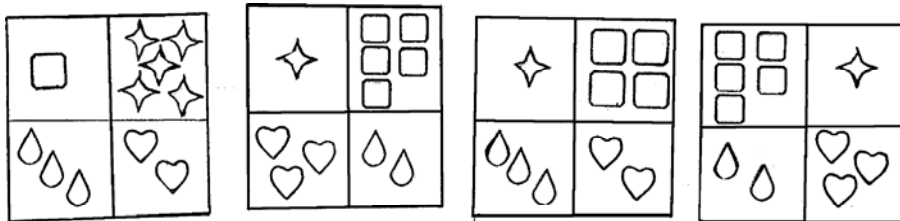
Q59 to Q63 Direction: In the following question the first and second figure have a specific relationship between them. The same relationship exists between the third and the fourth figure. Find the correct figure from the alternatives to replace the question mark.



- (1) Fort (2) Light house (3) Airways (4) Mine




Answers



- (1) (2) (3) (4)



- (1)  (2) 
 (3)  (4) 



- (1) 222 (2) 216 (3) 210 (4) 209

Space for Rough Work

63. 241 : 4124 :: 372 : ?

- (1) 6218 (2) 3214 (3) 6148 (4) 6281

64. 7, 8, 3, 2, 5, 6, 4, 2, 8, 7, 2, 3, 6, 8, 9, 4, 6 उपरोक्त संख्यामालिका में सम अंक के तुरंत बाद सम अंक व सम अंक के पहले संलग्न विषम अंक ऐसा कितनी बार हुआ है ?

- (1) दो (2) तीन (3) चार (4) एक

प्र. 65 व 66 के लिए सूचना : निम्न प्रश्न आकृति की हू.ब.हू. मिलने वाली आकृति पर्याय में से खोजो ।

65. प्रश्न-आकृति

उत्तर-आकृति

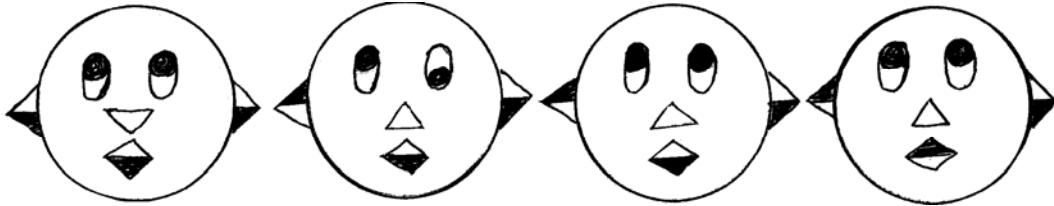


- (1) (2) (3) (4)

66. प्रश्न-आकृति



उत्तर-आकृति



- (1) (2) (3) (4)

Space for Rough Work

63. 241 : 4124 :: 372 : ?

- (1) 6218 (2) 3214 (3) 6148 (4) 6281

64. In the given series, how many times even number is preceded by odd number and is immediately followed by an even number

7, 8, 3, 2, 5, 6, 4, 2, 8, 7, 2, 3, 6, 8, 9, 4, 6

- (1) two (2) three (3) four (4) one

Q65 and Q66 Direction: Find out the figures which exactly matches with the question figure from the four alternative figures given below.

65 Question

Answers

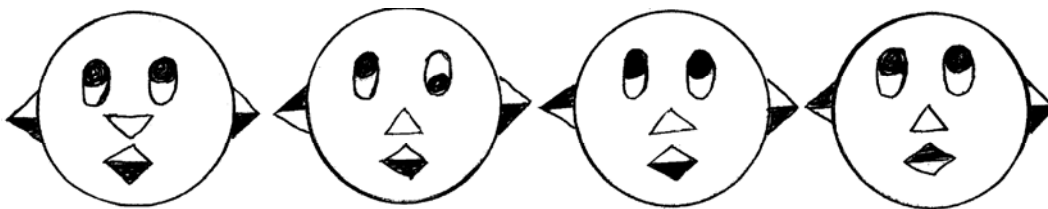


- (1) (2) (3) (4)

66. Question



Answers



- (1) (2) (3) (4)

Space for Rough Work

अक्षरमाला : ABCDE FGHIJ KLMNO PQRST UVWXYZ

67. ABCDE FGHIJ KLMNO PQRST UVWXY

उपरोक्त अंग्रेजी अक्षरमालिका में दाहिनी ओर से 15वाँ अक्षर कौन सा ?

- (1) O (2) L (3) K (4) P

68. प्रश्नचिह्न के स्थान पर आने वाली संख्या पर्याय में से खोजकर लिखो ।

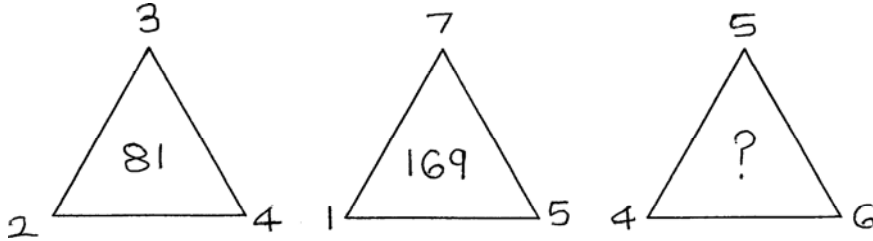
5	3	16
6	4	?
7	2	45

- (1) 25 (2) 10
(3) 61 (4) 20

69. एक सांकेतिक भाषा में 2 को 5 कहा जाय, 3 को 4 कहा जाय और 7 को 9 कहा जाय तो $3 + 2 \times 7 =$ कितना ?

- (1) 17 (2) 49
(3) 35 (4) 81

70. प्रश्नचिह्न के स्थान पर आने वाली संख्या पर्याय में से खोजकर लिखो ।



- (1) 225 (2) 196
(3) 256 (4) 235

Space for Rough Work

Alphabets : ABCDE FGHIJ KLMNO PQRST UVWXYZ

67. ABCDE FGHIJ KLMNO PQRST UVWXY

In the given alphabetical series which is the 15th letter from the right end ?

- (1) O
- (2) L
- (3) K
- (4) P

68. Which number from the alternatives will replace the question mark in the box ?

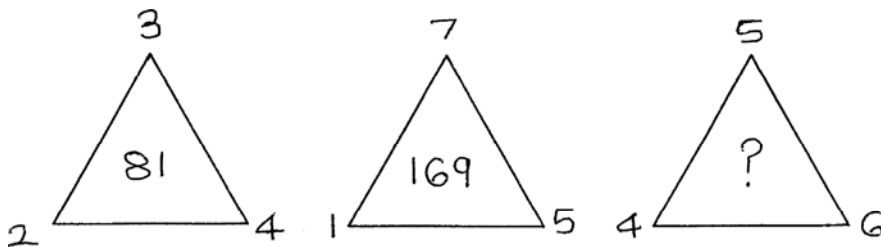
5	3	16
6	4	?
7	2	45

- (1) 25
- (2) 10
- (3) 61
- (4) 20

69. In a code language 2 is called 5, 3 is called 4 and 7 is called 9 then $3 + 2 \times 7 =$ how much ?

- (1) 17
- (2) 49
- (3) 35
- (4) 81

70. Choose the correct option to replace the (?) question mark.



- (1) 225
- (2) 196
- (3) 256
- (4) 235

Space for Rough Work

अक्षरमाला : ABCDE FGHIJ KLMNO PQRST UVWXYZ

71. एक सांकेतिक भाषा में पवन = 456, वजन = 542 व नल = 74, हो तो 'जलजल' शब्द कैसे लिखा जाएगा ?
(सूचना : अंक व अक्षरों का क्रम समान हो, ऐसा नहीं)

- (1) 4747 (2) 4444
(3) 2424 (4) 2727

प्र. 72 व 73 के लिए सूचना : अक्षर व चिह्न के तालिका को देखकर आगे के प्रश्नों का उत्तर लिखो ।

च	ढ	र	व	ग	ह	काना	मात्रा
☆	□	○	×	△	⊗	=	

72. 'चेहरा' शब्द किन चिह्नों से दिखाओगे ?

- (1) ☆ || ⊗ ○ = (2) ☆ = ⊗ ○ ||
(3) ☆ || ⊗ ○ || (4) ☆ || ○ ⊗ =

73. △ = □ × || चिह्नों से कौन सा शब्द तैयार होता है ?

- (1) गाढव (2) गेढवा
(3) गाढवे (4) गाढेव

74. शिक्षक ने तुम्हारे मित्र द्वारा लिखे गये निबंध की बहुत प्रशंसा की तो तुम क्या करोगे ?

- (1) शिक्षक को पक्षपाती कहेंगे । (2) मित्र से बातचीत बंद कर देंगे ।
(3) मित्र का अभिनंदन करेंगे । (4) मेरा निबंध सब से अच्छा है ऐसा सभी से कहेंगे ।

75. जलसंग्रह दूषित न हो इसके लिए निम्न में से कौन सी कृति योग्य होगी ?

- (1) जलसंग्रह में स्नान करना (2) जलसंग्रह में कपड़े न धोना
(3) जलसंग्रह के पास शौच के लिए बैठना (4) जलसंग्रह पर जानवरों को धोना

Space for Rough Work

Alphabets : A B C D E F G H I J K L M N O P Q R S T U V W X Y Z

71. In a code language TIN is written as 456 FIN is written as 542 and NO is written as 74 then how to write FONT is the same language ?

- (1) 4526 (2) 6245
 (3) 2657 (4) 2746

(Note - Letters and numbers are not necessarily in order)

Q72 and Q73 Direction: Observe the table of letters and symbols and answer the question given below:

R	S	T	E	M	A	O	Y
☆	□	⊙	×	△	⊗	=	

72. Which symbol will be used to write the word 'MAYOR' ?

- (1) △ ⊗ || = ☆ (2) × △ ⊗ = ||
 (3) △ ⊗ = ☆ || (4) ⊙ □ × = ☆

73. Which word will be formed by using the symbols '□ ⊙ × ⊗ △ × ☆'?

- (1) STEEMER (2) STEEMAR
 (3) STEAMER (4) STAEMER

74. What will you do if your teacher appreciates the essay written by your friend ?

- (1) will not talk to the teacher (2) will not talk to your friend
 (3) will congratulate your friend (4) will tell everyone that only your essay is good.

75. Which activity you think is correct to prevent the water reservoir from getting polluted ?

- (1) To bathe in the reservoir (2) Not to wash clothes
 (3) Sit near the reservoir for toilet (4) To bathe the animals

Space for Rough Work

Space for Rough Work