

PRE UPPER PRIMARY SCHOLARSHIP EXAMINATION (Std. 5th), FEBRUARY 2020

Seat No.

--	--	--	--	--	--	--	--	--	--	--

0 5 0 2

Set

A

Paper No. II

Pages : 16

Medium : English

Third Language and Intelligence Test

Time : 1:30 to 3:00

Total Marks : 150

Read the following instructions carefully before you answer the questions.

- (1) This question paper contains two sections. In Section I there are 1 to 25 questions of Third Language and in Section II there are 26 to 75 questions of Intelligence Test. All 75 questions are compulsory.
- (2) All questions carry 2 marks each.
- (3) Time limit to solve the question paper is 90 minutes.
- (4) Separate answer sheet is given to record the answers. Each question has been given four alternatives. Read them carefully. Select and shade the correct answer in the answer sheet.
Example :- If the correct alternative for Q. No. 6 is 2, then record your answer as follows :
Question No. 6 - ①●③④
- (5) Answer recorded in any other form will not be considered. Such answer will be credited with 'Zero' mark.
- (6) Use blue or black ball pen to darken the circle. Circles darkened by pencil will not be credited.
- (7) If more than one circles are darkened or overwriting is done, the answer will not be accepted.
- (8) Answer once recorded can not be changed.
- (9) The rough work is to be done in the space given under each page or on the last page of the question paper.
- (10) The exam has limited time, in case you are not able to solve a question, kindly solve the next question. In the end if time permits you can try to solve the unsolved questions.
- (11) If you find any question incomplete or with error, then do not ask anything to the Supervisor or Centre Incharge.
- (12) For any error / mistake / objection issues, school or parents should not send written application to Block Education Officer or Education Officer. These error / mistake / objection issues should be register online through respective school login only.
- (13) The error / mistake / objection issues should be register online within 10 - days from the publication of Interim answer key on MSCE website.
- (14) Suggetion & decision of expert committee will be applicable on printing or any other mistake in question paper.

SEAL S

SECTION-1

प्रश्न 1 ते 3 साठी सूचना- खालील उतरा वाचून त्यावर आधारित विचारांलल्या प्रश्नांची उत्तरे पर्यायांतून निवडा.

भारत हा कृषीप्रधान देश आहे. शेतीची मशागत करण्यासाठी बळीराजा बैलांची मदत घेतो. या बैलांच्या जीवनात एक दिवस सण साजरा होतो, तो दिवस म्हणजे बैलपोळा. बैलपोळ्यास बेंदूर असेही म्हणतात. वर्षभर शेतात कष्ट करणाऱ्या बैलांच्या पूजेचा हा दिवस असतो. त्यांच्याबद्दल सर्वजण कृतज्ञता व्यक्त करतात. या दिवशी बैलांना अंबोळ घालतात. अंगावर झुली घालून सजवतात. शिंपो रंगवतात, याशिंपो बांधतात. गाड्यात कवड्याच्या व घुंगरांच्या माळा घालतात. गावाच्या वेशीपासून ते हनुमानच्या मंदिरपर्यंत वाजतागाजत मिरवणूक काढतात. या दिवशी बैलांना नांगराला किंवा बैलगाडीला जुंपत नाहीत. चावकाचे फटकेही मारत नाहीत. सुग्रास अन्नाचा नैवेद्य दिला जातो. पुरणपोळी खायला देतात. ज्यांच्या घरी बैल नाहीत ते मातीच्या बैलाची मूर्ती आपणून पूजा करतात. भूतदया, प्राणीमात्रांवर प्रेम करणे. उपकार कर्त्याला विसरू नका व श्रम करणारा देवासमान असतो हा संदेश देणारा हा सण सर्वांनाच आवडतो.

1. उताऱ्यावरून पुढीलपैकी सत्यविधान कोणते?
 - (1) बेंदुराच्या दिवशी बैलांकडून शेतीची मशागत करून घ्यावी
 - (2) उपकारकर्त्यांची आठवण ठेवावी
 - (3) श्रम करणारा हा देवासमान नसतो
 - (4) बेंदूर सणाला बैलांविषयी कृतज्ञता व्यक्त होते.
2. पुढीलपैकी कोणती गोष्ट बैलपोळ्याला करत नाहीत?
 - (1) या दिवशी बैलांना शर्यतीसाठी बैलगाडीला जुंपतात
 - (2) बैलांच्या पाठीवर नक्षीदार झूल घालतात
 - (3) बैलांना पुरणपोळी खायला देतात
 - (4) बैलांच्या गळ्यात घुंगरांच्या माळा घालतात.
3. कोणता जोडशब्द उताऱ्यात आलेला आहे?

(1) कृषीप्रधान	(2) देवासमान	(3) वाजतागाजत	(4) बैलगाडी
----------------	--------------	---------------	-------------

SPACE FOR ROUGH WORK

प्रश्न 4 ते 6 साठी सूचना- खालील सुसंगत वाक्यांचा परिच्छेद वाचून त्यावर आधारित विचारांलल्या प्रश्नांची उत्तरे पर्यायांतून निवडा.

4. ११ नोव्हेंबर का दिन म्हणून साजरा करतात.

(1) शिक्षण दिन	(2) शिक्षक दिन	(3) वाचन प्रेरणा दिन	(4) विद्यार्थी दिन
----------------	----------------	----------------------	--------------------
5. हा दिवस याचा जन्मदिवस आहे.

(1) डॉ. ए.पी.जे. अब्दुल कलाम	(2) पं. जवाहरलाल नेहरू	(3) डॉ. बाबासाहेब आंबेडकर	(4) मौलाना अबुल कलाम आझाद
------------------------------	------------------------	---------------------------	---------------------------
6. ते स्वतंत्र भारताचे पहिले होते

(1) गृहमंत्री	(2) शिक्षणमंत्री	(3) उपपंतप्रधान	(4) राष्ट्रपती
---------------	------------------	-----------------	----------------
7. 'आभूषण' या शब्दाचा समानार्थी शब्द निवडा.

(1) शृंगार	(2) सुवर्ण	(3) दागिना	(4) बक्षीस
------------	------------	------------	------------
8. दिलेल्या वाक्यातील अधोरेखित शब्दाचा विरुद्धार्थी शब्द निवडा.

तेल्लेमध्ये वृद्ध व्यक्तिंना बसण्यासाठी राखीव जागा असते.

(1) तरुण	(2) दिव्यांग	(3) प्रौढ	(4) वयस्कर
----------	--------------	-----------	------------
9. चुकीची जोडी निवडा.

(1) पाण्याचा-खळखळाट	(2) नाण्यांचा-छनछनाट	(3) ढगांचा-कडकडाट	(4) पंखाचा-फडफडाट
---------------------	----------------------	-------------------	-------------------
10. दिलेल्या शब्दसमूहाबद्दल एक शब्द निवडा.

'चांदण्या रात्रीचा पंथरवडा'

(1) कृष्णपक्ष	(2) शुद्धपक्ष	(3) वक्रपक्ष	(4) पौर्णमासी
---------------	---------------	--------------	---------------

SPACE FOR ROUGH WORK

11. दिलेल्या पर्यायांतून समूहस्थक शब्द निवडा.
 (1) रांग (2) हार (3) जगा (4) पेंड
12. जसे मुंग्यांचे वारूळ तसे मधमाश्यांचे
 (1) घस्टे (2) जाळे (3) बीळ (4) मोहोळ
13. दिलेल्या अक्षरापासून तयार होणाऱ्या वाक्यप्रचाराचा अर्थ पर्यायांतून निवडा.

का	ग
णे	जा
त	न
	मा

 (1) तल्लीन होणे (2) गोथळत पडणे
 (3) मन भरून येणे (4) घाबरून जाणे
14. 'केलेला उपदेश वाया जाणे' या अर्थाची म्हण निवडा.
 (1) खांद्याच्या कपाळी गोटा (2) पालथ्या घड्यावर पाणी
 (3) गाढवाला गुळाची चव काय (4) आडात नाही तर पोहक्यात कुटून येणार
15. दिलेल्या वाक्यातील अधोरेखित शब्दाचा अर्थ निवडा.
 नदीच्या तीरावर बसून अनोखेने तीर सोडला.
 (1) किनारा (2) कोरंड (3) शर (4) धनुष्य
16. 'पाणी' हा शब्द कोणत्या शब्दास जोडून योग्य जोडशब्द तयार होत नाही?
 (1) पाऊस (2) दाणा (3) हवा (4) नदी
17. क, स, ट, र, स या पाच अक्षरापासून तयार होणाऱ्या अर्थपूर्ण शब्दातील अनुक्रमे कोणत्या क्रमांकांची अक्षरे घेतल्यास 'हात' या अर्थाचा शब्द तयार होईल.
 (1) दुसरे व चौथे (2) दुसरे व तिसरे
 (3) चौथे व दुसरे (4) चौथे व तिसरे

SPACE FOR ROUGH WORK

18. खालील पर्यायांतून नाम असलेला पर्याय निवडा
 (1) ओला (2) स्वच्छ (3) सावली (4) पाहिला
19. 'मखमली झुली रंगीत रिंगे' कपाळी बांधली रेशमी बाशिंगे.' या मध्ये कोणते क्रियापद आहे आहे?
 (1) रेशमी (2) झुली (3) बांधली (4) रंगीत
20. दिलेल्या पर्यायांतून नपुंसकलिंगी नसलेला शब्द निवडा.
 (1) वैराग्य (2) तोरण (3) अक्षर (4) बाशिंगे
21. निश्चितपणे एकवचनी शब्द निवडा.
 (1) पतंग (2) शेल (3) कक्षी (4) पक्षी
22. पुढीलपैकी कोणत्या वाक्याच्या शेवटी प्रश्नचिन्ह येईल?
 (1) बघ, आजची सकाळ किती सुंदर आहे (2) मधात औषधी गुण असतात
 (3) किती हा सुंदर देखावा (4) महेश, इतक्या घाईने कुठे चालतास
23. पुढीलपैकी शुद्ध शब्द निवडा.
 (1) वसतीगृह (2) वस्तीग्रह (3) वसतिगृह (4) वसतिग्रह
24. 'बालकवी' म्हणून कोणाला ओळखले जाते?
 (1) वि.वा. शिरवाडकर (2) कृष्णाजी केशव दामले
 (3) त्र्यंबक बापूजी टोंबरे (4) ग.दि. माडगुळकर
25. चुकीची जोडी निवडा.
 (1) चैत्र-गुढीपाडवा (2) फाल्गुन-होळी
 (3) श्रावण-नागापंचमी (4) आषाढ-वटपौर्णिमा

SPACE FOR ROUGH WORK

A B C D E F G H I J K L M N O P Q R S T U V W X Y

SECTION-II

INTELLIGENCE TEST

26. In the word 'ADJECTIVE' which letter is third to the left of the middle position letter ?

- (1) D
- (2) J
- (3) V
- (4) I

27. A B C D E F G H I J K L M N O P Q R S T U V W X Y

In the given letters series, what is the position of the letter from start which is fourth to the left of the letter which is tenth from the right side of the series.

- (1) 19
- (2) 12
- (3) 20
- (4) 6

28. How many total vowels are there in the given sentence ?

'Rupa gave letter to Ram.'

- (1) 5
- (2) 3
- (3) 8
- (4) 9

29. 3, 2, 7, 1, 0, 5, 6, 6, 4, 3, 6, 1, 7, 3, 3, 2

In the given number series, what is the difference between the square of the number which is 6th from left and which is 7th from right side ?

- (1) 34
- (2) 0
- (3) 8
- (4) 16

SPACE FOR ROUGH WORK

A B C D E F G H I J K L M N O P Q R S T U V W X Y

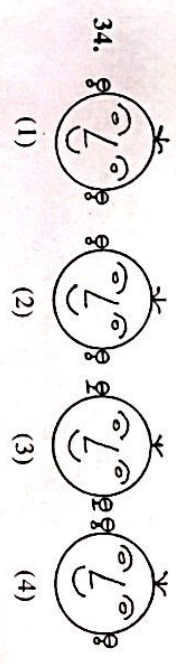
Note for : Q. 30 to Q. 34 : [Find odd man out]

30. (1) Puppet show (2) Television (3) Computer (4) Cinema

31. (1) May (2) July (3) June (4) August

32. (1) 2651 (2) 2246 (3) 5324 (4) 6215

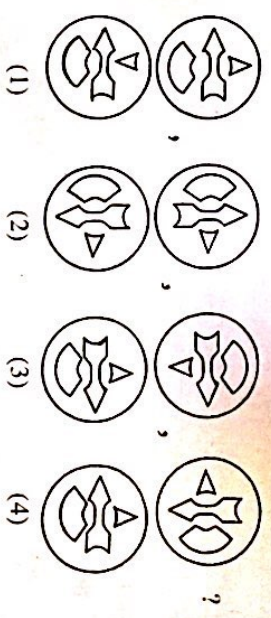
33. (1) 9338 (2) 7276 (3) 9295 (4) 4279



35. In the given number series, select the correct option to replace the question mark.

- 3, 4, 7, 10, 15, 22, 31, ?
- (1) 46
- (2) 40
- (3) 44
- (4) 42

36. In the given series of figures, select the correct option to replace the question mark.



SPACE FOR ROUGH WORK

A B C D E **F G H I J** **K L M N O** **P Q R S T** **U V W X Y**

37. Select the wrong term in the given number series.

- 2, 7, 28, 64, 126, 215
- (1) 28 (2) 64 (3) 215 (4) 7

38. Select the correct option to replace the question mark in the given number series.

- 14, 16, 19, 24, 31, 42, 55 ?
- (1) 65 (2) 72 (3) 75 (4) 70

39. Select the correct option to replace the question mark in the given groups of signs.

- $< > + \times +$, $> + \times + <$, $+ \times + < >$, $\times + < > \div$, ?
- (1) $< > + \times +$ (2) $+ \times + < >$
- (3) $+ \times < > +$ (4) $+ < > \div \times$

40. If Deer is called as Rabbit, Rabbit is called as Shekaroo, Shekaroo is called as Porcupise, Porcupise is called as Tiger, Tiger is called as Bear then which animal is the state animal ?

- (1) Shekaroo (2) Tiger
- (3) Rabbit (4) Porcupise

41. The sum of ages of Mother, Father and Son three years ago was 73. What will be the sum of their ages five years later ?

- (1) 97 (2) 75 (3) 78 (4) 88

SPACE FOR ROUGH WORK

A B C D E **F G H I J** **K L M N O** **P Q R S T** **U V W X Y**

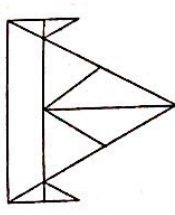
42. Anushka's score of marks is more than Aarya but less than Aaboli. Shevanti's score is same as Aarya but to more than Chameli. Who has scored the highest marks ?

- (1) Aarya (2) Aaboli
- (3) Shevanti (4) Anushka

43. Akshay said to Aarti 'your mother's father is my father's father.' What is the relation of Akshay with Aarti's mother ?

- (1) Son of husband's brother (2) Uncle
- (3) Grandson (4) Son of husband's sister

44. How many total number of triangles are there in the adjacent figure ?



- (1) 14 (2) 15 (3) 10 (4) 12

45. In the figure given below how many total number of quadrilaterals are there ?



- (1) 9 (2) 6 (3) 18 (4) 15

SPACE FOR ROUGH WORK

A B C D E F G H I J K L M N O P Q R S T U V W X Y

Note for Q. 46 and Q. 47 : Select the correct option to match the mirror image of the question figure.

46. Question Figure Answer Figure

- (1)
- (2)
- (3)
- (4)

47. Question Figure Answer Figure

- (1)
- (2)
- (3)
- (4)

Note for Q. 48 and Q. 49 : Select the correct option to match the water image of the question figure.

48. Question Figure Answer Figure

- (1)
- (2)
- (3)
- (4)

49. Question Figure Answer Figure

- (1)
- (2)
- (3)
- (4)

SPACE FOR ROUGH WORK

A B C D E F G H I J K L M N O P Q R S T U V W X Y

Note for Q. 50 to Q. 54 : There exists a relation between first and second term, similar relation holds true for third and fourth term. Accordingly select the correct option to replace the question mark.

50. Crops : farm :: fruits : ?

- (1) Orchard
- (2) Market
- (3) Mall
- (4) Shop

51. Sparrow : noun :: went : ?

- (1) Pronoun
- (2) Verb
- (3) Noun
- (4) Adjective

52. : :: : ?

- (1)
- (2)
- (3)
- (4)

53. 5 : 12 :: 6 : ?

- (1) 18
- (2) 15
- (3) 12
- (4) 21

54. 4396 : 6475 :: 3485 : ?

- (1) 4595
- (2) 4574
- (3) 5564
- (4) 4564

SPACE FOR ROUGH WORK

A B C D E F G H I J K L M N O P Q R S T U V W X Y

55. Which of the following action of Raju is correct, when he saw garbage lying at the place where small children were playing ?

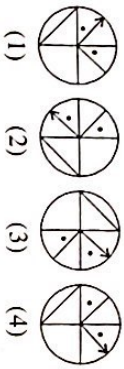
- (1) He picked up the garbage and threw it into the dustbin.
- (2) He neglected it.
- (3) He pushed out all the children from that place.
- (4) He purposely tell the security person to pick up the garbage.

Note for Q. 56 and Q. 57 : Select the figure perfectly matching to the question figure from the given options.

56. Question Figure



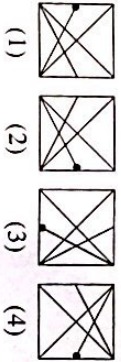
Answer Figure



57. Question Figure



Answer Figure



58. In a row there are 15 girls to the right side of Savita and 11 girls to her left, if she is standing at the middle then what is her position number ?

- (1) 12th
- (2) 13th
- (3) 14th
- (4) 15th

59. Students are standing for mass P.T. The number of rows and students in one row is same. If 15 students are standing in each row then what is the total number of students standing for mass P.T. ?

- (1) 225
- (2) 150
- (3) 250
- (4) 125

SPACE FOR ROUGH WORK

A B C D E F G H I J K L M N O P Q R S T U V W X Y

60. John is standing with his back towards the East. He turns to his right hand two times at right angle. Which direction is he facing now ?

- (1) West
- (2) South
- (3) East
- (4) North

61. Ahmed went 18 km in the west direction, then he went 11.5 km to the south, then he went 6.5 km to the east, then he went 11.5 km to the north and he stopped there. At what distance is he from the starting point ?

- (1) 11 km
- (2) 10.5 km
- (3) 12.5 km
- (4) 11.5 km

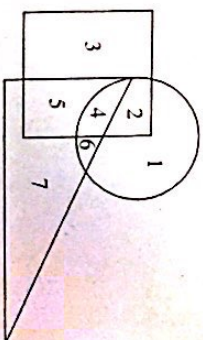
62. Mandar was born on 7th July 2007 Saturday. Which day will it be on his second birthday ?

- (1) Monday
- (2) Tuesday
- (3) Wednesday
- (4) Thursday

63. In a certain year if 15th August falls on Monday, then in the same year 6th September will fall on which day ?

- (1) Thursday
- (2) Monday
- (3) Tuesday
- (4) Wednesday

64. Observe the venn diagram carefully and answer the following questions. Which of the following number is seen only in the triangle ?

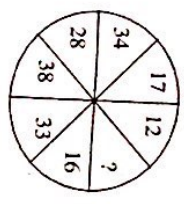


- (1) 7
- (2) 6
- (3) 5
- (4) 4

SPACE FOR ROUGH WORK

ABCDE FGHIJ KLMNO PQRST UVWXY

65. Identify the correct option to replace the question mark in the given pattern.



- (1) 42
- (2) 32
- (3) 12
- (4) 22

Note for Q. 66 to Q. 70 : The term given in each question have same common characteristic. Select the correct option to match the group.

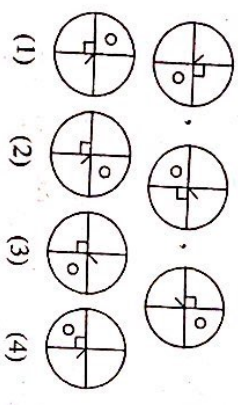
66. Iron, bricks, sand,

- (1) Cotton
- (2) Coal
- (3) Thread
- (4) Cement

67. Brain, Lungs, Heart

- (1) Skin
- (2) Ears
- (3) Stomach
- (4) Eyes

68.



69. 65, 83, 92

- (1) 54
- (2) 87
- (3) 47
- (4) 39

70. 2520, 6273, 7092

- (1) 8085
- (2) 2823
- (3) 6018
- (4) 8127

SPACE FOR ROUGH WORK

ABCDE FGHIJ KLMNO PQRST UVWXY

71. In a certain code language if 62 = 14, 47 = 15, 95 = 23 then 38 = ?

- (1) 11
- (2) 14
- (3) 36
- (4) 8

72. In a certain code language if 6 = 14, 7 = 17 and 3 = 5 then 4 = ?

- (1) 4
- (2) 6
- (3) 2
- (4) 8

73. In a certain code language if CAP = □○○, CAT = ○◎□, PAN = △○○ then TAN = ?

- (1) □△◎
- (2) □□○
- (3) ◎△□
- (4) △○○

74. In a certain code language if KMD = < > v, KNM = ^ > <, NKD = v ^ > then MND = ?

[Note : The signs and alphabets may not be in the same order.]

- (1) ^ v >
- (2) ^ < >
- (3) ^ v <
- (4) > < v

75. Teacher appeals to all students that as the yearly inspection is near all have to complete their assignment note books. Your assignment note book is completed, but you know that, one slow learner student of class has not completed his assignment note book, what will you do ?

- (1) I will tell my bench partner to give his assignment note book to that slow learner.
- (2) I will help him to complete his assignment note book.
- (3) I will not give my assignment note book to any one.
- (4) I will tell the teacher that he misplaces the note books.

SPACE FOR ROUGH WORK