

पूर्व उच्च प्राथमिक शिष्यवृत्ती परीक्षा (इयत्ता 5 वी), जुलै 2022

बैठक क्र.

संच



0 1 0 2

पेपर क्र. - II

वेळ : 01:30 ते 03:00

माध्यम : मराठी



एकूण गुण : 150

तृतीय भाषा व बुद्धिमत्ता चाचणी

पृष्ठ : 32

प्रश्नपत्रिका सोडविण्यापूर्वी कृपया खालील सूचना काळजीपूर्वक वाचा :

- (1) या प्रश्नपत्रिकेत दोन विभाग आहेत. त्यापैकी विभाग I मध्ये तृतीय भाषा विषयासाठी 1 ते 25 व विभाग II मध्ये बुद्धिमत्ता चाचणी विषयासाठी 26 ते 75 असे एकूण 75 प्रश्न आहेत. सर्व प्रश्न सोडविणे आवश्यक आहे.
- (2) प्रत्येक प्रश्नासाठी 2 गुण आहेत.
- (3) प्रश्नपत्रिका सोडविण्यासाठी एकूण 90 मिनिटांचा कालावधी दिला जाईल.
- (4) उत्तरे नोंदविण्यासाठी स्वतंत्र उत्तरपत्रिका दिलेली आहे. प्रत्येक प्रश्नक्रमांकासमोर चार पर्यायासाठी क्रमागत वर्तुळे दिलेली आहेत. त्यातील अचूक उत्तराचा पर्याय क्रमांक असलेले वर्तुळ पुढील उदाहरणात दाखविल्याप्रमाणे रंगवा. उदा. प्रश्न क्र. 6 च्या बरोबर उत्तराचा पर्याय क्र. 2 असेल, तर तो पुढीलप्रमाणे नोंदवावा.
प्रश्न क्र. 6 ① ● ③ ④
- (5) खालीलप्रमाणे नोंदविलेली उत्तरे ग्राह्य धरण्यात येणार नाहीत. असे उत्तर नोंदविल्यास त्या प्रश्नास 'शून्य' गुण दिले जातील. ✓ ② ● ✗
- (6) प्रत्येक प्रश्नासाठी एकापेक्षा अधिक वर्तुळात नोंदविलेली उत्तरे, खाडाखोड करून नोंदविलेली उत्तरे ग्राह्य धरण्यात येणार नाहीत.
- (7) एकदा नोंदविलेली उत्तरे पुन्हा बदलता येणार नाहीत.
- (8) पर्यायाची उत्तरे नोंदविताना फक्त काळ्या किंवा निळ्या रंगाच्या बॉलपेनचाच वापर करावा. पेन्सिलने नोंदविलेली उत्तरे ग्राह्य धरण्यात येणार नाहीत.
- (9) प्रश्नपत्रिकेत प्रत्येक पानावर खाली व शेवटच्या पानावर कच्चे काम करण्यासाठी मोकळी जागा आहे, तेथेच कच्चे काम करावे.
- (10) परीक्षेस मर्यादित वेळ असल्याने एखाद्या प्रश्नाचे उत्तर तुम्हाला येत नसल्यास पुढील प्रश्न सोडवा. शेवटी वेळ शिल्लक राहिल्यास उरलेल्या प्रश्नांसाठी पुन्हा प्रयत्न करावा.
- (11) एखाद्या प्रश्नात त्रुटी/चूक आढळल्यास त्याबाबत पर्यवेक्षक किंवा परीक्षा केंद्रसंचालक यांच्याकडे विचारणा करू नये.
- (12) प्रश्नातील त्रुटी/चूक/आक्षेपाबाबतचे निवेदन शाळेने किंवा पालकांनी गटशिक्षणाधिकारी किंवा शिक्षणाधिकारी यांच्याकडे लेखी स्वरूपात न पाठवता संबंधित शाळेच्या लॉगीन मधून ऑनलाईन पद्धतीनेच पाठवावे.
- (13) त्रुटी/चूक/आक्षेपाबाबतचे निवेदन ऑनलाईन पद्धतीने पाठविण्याची मुदत परीक्षा परिषदेच्या संकेतस्थळावर अंतरिम (तात्पुरती) उत्तरसूची प्रसिद्ध झाल्यापासून 10 (दहा) दिवसांपर्यंत राहिल.
- (14) मुद्रणदोष किंवा अन्य कारणांमुळे प्रश्न चुकीचा असल्याचे आढळल्यास तज्ञ समितीच्या अभिप्रायानुसार योग्य ती कार्यवाही केली जाईल.
- (15) मूळ माध्यमासोबत इंग्रजी भाषेतील प्रश्नपत्रिका दिलेली आहे. मूळ माध्यमातील संदिग्ध प्रश्नांबाबत इंग्रजी प्रश्न पहावेत.

SECTION - I

ENGLISH

Instructions for Q.01 to Q.03

Read the passage carefully and answer the following questions.

Mani is my favourite cat. Every morning mother gives her some milk. Sometimes she catches a mouse near the garbage pit. She likes climbing trees and watching the birds.

01. What does Mani catch?

- | | |
|-----------|-------------|
| (1) A pit | (2) A mouse |
| (3) Milk | (4) A bird |

02. Find the odd term.

- | | | |
|-----------------|---------------------------|--------------|
| (A) Morning | (B) Climbing | (C) Watching |
| (1) 'B' correct | (2) 'C' correct | |
| (3) 'A' correct | (4) 'A', 'B', 'C' correct | |

03. Find the rhyming word for 'Free'.

- | | |
|----------|----------|
| (1) She | (2) Give |
| (3) Like | (4) Tree |

04. Fill in the blank with the correct alternative.

Malhar caught a big golden fish _____ his net.

- | | |
|----------|----------|
| (1) in | (2) on |
| (3) over | (4) upon |

SPACE FOR ROUGH WORK

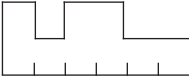
05. Choose the correct comparison for as timid as _____.

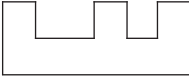
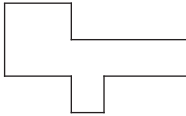
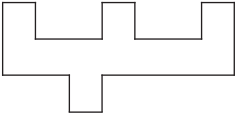
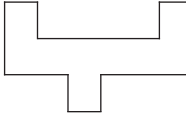
- (1) rabbit (2) elephant
(3) deer (4) vulture

06. Look at the picture and select the correct conversation from the given options.

- (1) A : Excuse me, uncle. Is this yours?
B : Oh, yes!
(2) A : Thank you so much for this gift.
B : You are welcome.
(3) A : What's the time?
B : It's two O'clock.
(4) A : Can you please help me.
B : Sure.



07. Ladder :  :: English : ?

- (1)  (2) 
(3)  (4) 

08. Find the smaller hidden word which indicates 'Head of the unit' from the word - Handkerchief.

- (1) Chick (2) Chief
(3) Hand (4) And


SPACE FOR ROUGH WORK

09. Complete the word register.

Violin, Tabla, _____ , _____.

- (1) Eraser, Sponge (2) Scene, Museum
(3) Tambourine, Cymbals (4) Mixer, Sieve

10. Identify the game and select the correct option.



- (1) Hop-scotch
(2) Hide and seek
(3) Marbles
(4) Skipping-rope

11. Choose the correctly spelt word.

- (1) Compitition
(2) Competition
(3) Compitision
(4) Competision

12. Identify the underlined punctuation mark in the given sentence.

Ah! At last I will have some rice.

- (1) Apostrophe
(2) Comma
(3) Question mark
(4) Exclamation mark

SPACE FOR ROUGH WORK

13. Select the proper option to complete the motto.

_____ is wealth.

- (1) Money
- (2) Health
- (3) Currency
- (4) Growth

14. Fill in the blank with correct option.

This advertisement gives offer for _____ festival.



- (1) Eid
- (2) Pune
- (3) Diwali
- (4) Christmas

15. Select the correct alternative.

_____ work quickly.

- (1) Lets'
- (2) let's
- (3) Let's
- (4) 'Lets

16. Find the odd man out.

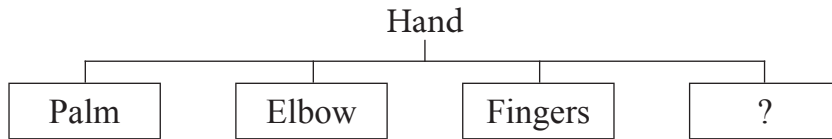
- (1) Shiny star
- (2) Tall tree
- (3) Clever house
- (4) Old man

17. Which of the following is a request? Choose the correct option.

- (1) May I come in?
- (2) I don't know.
- (3) What are you doing?
- (4) Please wait for me.

SPACE FOR ROUGH WORK

18. Look at the chart and find the correct option.



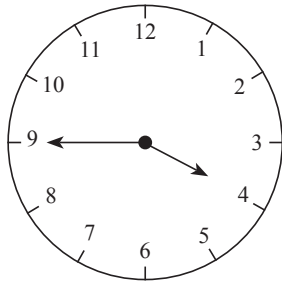
- (1) Beak (2) Tusk
(3) Stomach (4) Wrist

19. Select the correct option.

February is the _____ month of the year.

- (1) second (2) 2
(3) II (4) two

20. This clock shows the time _____.



- (1) quarter to four
(2) quarter past four
(3) quarter to three
(4) quarter past three

21. What will you write in the following timeline?

Present	Past	Future
↓	↓	↓
Find	?	Will find

- (1) Will find (2) Found
(3) Finds (4) Was finding

SPACE FOR ROUGH WORK

22. At the time of examination, what will you say to your friend? Choose the proper greeting.
- (1) All the best. (2) All in one.
(3) All is set. (4) All sit down.
23. Select the correct option.
Sunday comes after _____.
- (1) Monday (2) Thursday
(3) Saturday (4) Tuesday
24. Choose the correct alternative for the given sentence.
gaurav was the captain of 'a' division's team.
- (1) Capital 'G' for gaurav
(2) Capital 'A' for 'a' division
(3) Capital 'C' for captain
(4) Capital 'G' for gaurav and capital 'A' for 'a' division.
25. Count the number of question marks in the following conversation.
A : Hello, Ira speaking. Will you come to play with me?
B : Which game?
A : Off course! Basketball.
B : When?
A : At 5 p.m.
- (1) 2 (2) 4
(3) 0 (4) 3

SPACE FOR ROUGH WORK

A	B	C	D	E	F	G	H	I	J	K	L	M	N	O	P	Q	R	S	T	U	V	W	X	Y
---	---	---	---	---	---	---	---	---	---	---	---	---	---	---	---	---	---	---	---	---	---	---	---	---

SECTION - II

INTELLIGENCE TEST

26. How many two letter words are more or less than the four letter words in the given sentence?

“Raju helped Ram while he was climbing Shivneri Fort.”

- (1) More by 1 (2) Less by 1 (3) More by 2 (4) Less by 2

27. In the given alphabet series which letters have occurred same number of times?

K P G G P K G H T P D K G P T D P

- (1) P G (2) K T (3) T D (4) D P

28. In the given number series how many times does ‘3’ occur before ‘5’ but ‘4’ does not occur after ‘5’?

8 3 5 2 4 5 3 5 3 4 6 5 4 3 5 3 5 6 4 3 5 3 5 4 3 5 7


- (1) 7 times (2) 8 times (3) 6 times (4) 9 times

Q.29 to Q.33 Direction :

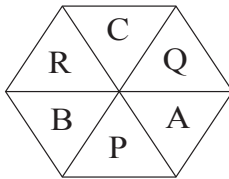
Select the odd term

29. (1) to see - to look (2) dirty - dusty
(3) hand - fore arm (4) poor - weak


30.



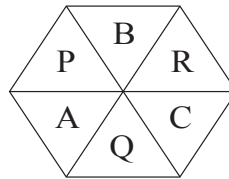
(1)



(2)



(3)



(4)

SPACE FOR ROUGH WORK

विभाग - II

बुद्धिमत्ता चाचणी


26. 'शिवनेरी गड चढताना थकलेल्या राजूला रामने आधार दिला.'
- या वाक्यात चार अक्षरी शब्दांपेक्षा दोन अक्षरी शब्द कितीने जास्त अगर कमी आहे?
- (1) 1 ने जास्त (2) 1 ने कमी (3) 2 ने जास्त (4) 2 ने कमी
27. ख प ग ग प ख ग घ ट प ड ख ग प ट ड प
- या अक्षरमालेत कोणती अक्षरे समान वेळा आली आहेत?
- (1) प ग (2) ख ट (3) ट ड (4) ड प
28. खालील संख्यामालिकेत '5' पूर्वी '3' आहे, मात्र '5' नंतर '4' नाही, असे किती वेळा झाले आहे?
- 8 3 5 2 4 5 3 5 3 4 6 5 4 3 5 3 5 6 4 3 5 3 5 4 3 5 7
- (1) 7 वेळा (2) 8 वेळा (3) 6 वेळा (4) 9 वेळा

प्रश्न क्र. 29 ते 33 साठी सूचना -

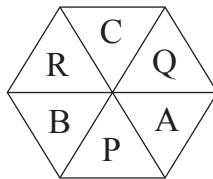
गटात न बसणारे पद ओळखून त्याच्या पर्याय क्रमांकांचे वर्तुळ रंगवा.

29. (1) डोळा - नयन (2) सूर्य - भास्कर
(3) हस्त - पाणि (4) गरीब - दिन

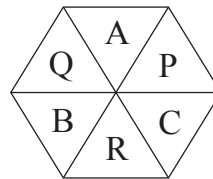
30.



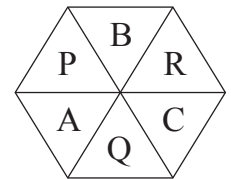
(1)



(2)



(3)



(4)

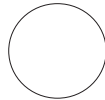
कच्च्या कामासाठी फक्त

A	B	C	D	E	F	G	H	I	J	K	L	M	N	O	P	Q	R	S	T	U	V	W	X	Y
---	---	---	---	---	---	---	---	---	---	---	---	---	---	---	---	---	---	---	---	---	---	---	---	---

31.



(1)



(2)



(3)



(4)

32.

(1) 4

(2) 17

(3) 7

(4) 12

33.

(1) 111

(2) 482

(3) 231

(4) 362

Q.34 and Q.35 Direction:

Consider the pattern in the given number series and select the correct option to replace the question mark.

34.

53, 61, 68, 82, ?, 103

(1) 92

(2) 91

(3) 89

(4) 95

35.

2, 4, 7, 12, 19, 30, ?, 60

(1) 47

(2) 43

(3) 49

(4) 45

36.

In the given series of symbols select the correct group from the options to replace the question mark.

$< + \times -$, $+ \times - <$, $\times - < +$, $- < + \times$, ?

(1) $< \times + -$

(2) $\times - < +$

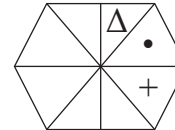
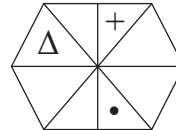
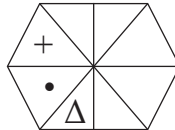
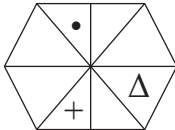
(3) $< + \times -$

(4) $> + \times -$

37.

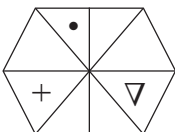
Select the correct figure from the options to replace the question mark.

Question Figures

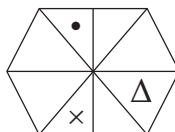


?

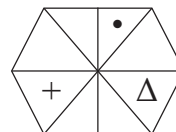
Answer Figures



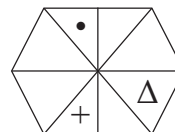
(1)



(2)



(3)



(4)

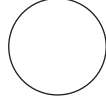
SPACE FOR ROUGH WORK

A	B	C	D	E	F	G	H	I	J	K	L	M	N	O	P	Q	R	S	T	U	V	W	X	Y
---	---	---	---	---	---	---	---	---	---	---	---	---	---	---	---	---	---	---	---	---	---	---	---	---

31.



(1)



(2)



(3)



(4)

32.

(1) 4

(2) 17

(3) 7

(4) 12

33.

(1) 111

(2) 482

(3) 231

(4) 362

प्रश्न क्र. 34 व 35 साठी सूचना -

मालिकेतील संख्यांच्या मांडणीतील सूत्र लक्षात घेऊन प्रश्नचिन्हाच्या जागी येणारी संख्या पर्यायातून निवडा.

34.

53, 61, 68, 82, ?, 103

(1) 92

(2) 91

(3) 89

(4) 95

35.

2, 4, 7, 12, 19, 30, ?, 60

(1) 47

(2) 43

(3) 49

(4) 45

36.

खालील चिन्हांच्या मालिकेत प्रश्नचिन्हाच्या जागी येणारा गट पर्यायातून निवडा.

$< + \times -$, $+ \times - <$, $\times - < +$, $- < + \times$, ?

(1) $< \times + -$

(2) $\times - < +$

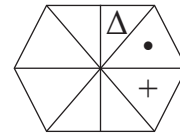
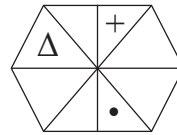
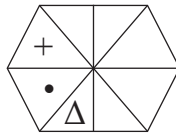
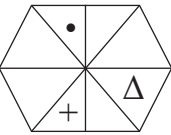
(3) $< + \times -$

(4) $> + \times -$

37.

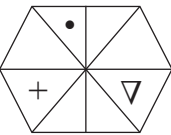
प्रश्नचिन्हाच्या जागी क्रमाने येणारी आकृती कोणती?

प्रश्नाकृती

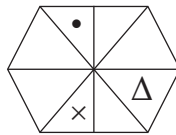


?

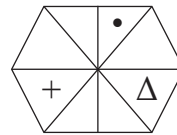
उत्तर आकृती



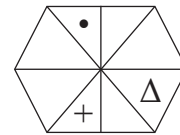
(1)



(2)



(3)



(4)

कच्च्या कामासाठी फक्त

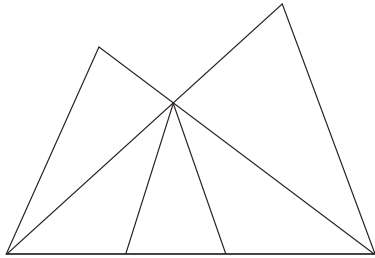
A	B	C	D	E	F	G	H	I	J	K	L	M	N	O	P	Q	R	S	T	U	V	W	X	Y
---	---	---	---	---	---	---	---	---	---	---	---	---	---	---	---	---	---	---	---	---	---	---	---	---

38. Select the wrong term in the given number series.

$$\frac{1}{3}, \frac{3}{6}, \frac{5}{11}, \frac{7}{17}, \frac{9}{27}, \frac{11}{38}$$

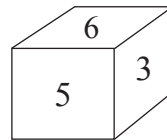
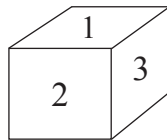
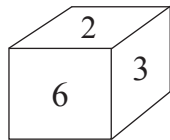
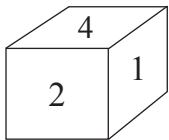
- (1) $\frac{3}{6}$ (2) $\frac{11}{38}$ (3) $\frac{7}{17}$ (4) $\frac{9}{27}$

39. In the adjacent figure how many triangles are there?



- (1) 8
(2) 10
(3) 11
(4) 5

40. In the following question various faces of a cube are shown. Study them and find the number which is on the face opposite to 5.



- (1) 2 (2) 6 (3) 1 (4) 4

41. If Horse is called Camel, Camel is called as Zebra, Zebra is called as Donkey, then which animal is called as 'Ship of Desert'.

- (1) Horse (2) Camel (3) Donkey (4) Zebra

42. Ajay is taller than Ramesh but shorter than Sadu. Sameedha is taller than Ajay but not as tall as Sadu. Who is the tallest?

- (1) Sadu (2) Sameedha (3) Ajay (4) Ramesh

SPACE FOR ROUGH WORK

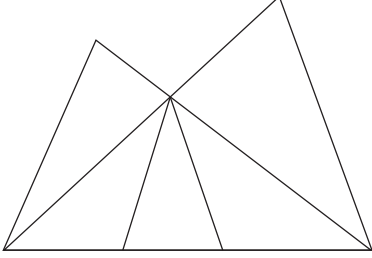
A	B	C	D	E	F	G	H	I	J	K	L	M	N	O	P	Q	R	S	T	U	V	W	X	Y
---	---	---	---	---	---	---	---	---	---	---	---	---	---	---	---	---	---	---	---	---	---	---	---	---

38. खालील संख्यामालिकेतील चुकीचे पद ओळखा.

$$\frac{1}{3}, \frac{3}{6}, \frac{5}{11}, \frac{7}{17}, \frac{9}{27}, \frac{11}{38}$$

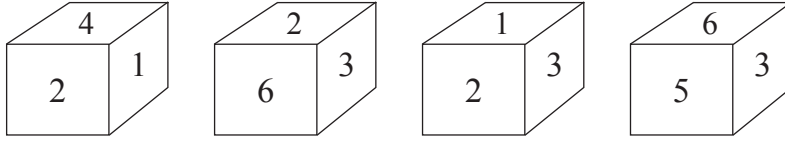
- (1) $\frac{3}{6}$ (2) $\frac{11}{38}$ (3) $\frac{7}{17}$ (4) $\frac{9}{27}$

39. सोबतच्या आकृतीत त्रिकोणांची संख्या किती आहे?



- (1) 8
(2) 10
(3) 11
(4) 5

40. खालील प्रश्नात एकाच घनाची पृष्ठे वेगवेगळ्या स्थितीत कशी दिसतील हे दाखविले आहे. या आकृत्यांचे निरीक्षण करून '5' हा अंक असलेल्या पृष्ठाच्या विरुद्ध पृष्ठावर कोणता अंक असेल ते पर्यायातून निवडा.



- (1) 2 (2) 6 (3) 1 (4) 4

41. घोड्याला उंट म्हटले, उंटाला झेब्रा म्हटले, झेब्राला गाढव म्हटले; तर वाळवंटातील जहाज कोणाला म्हणावे?

- (1) घोडा (2) उंट (3) गाढव (4) झेब्रा

42. अजय रमेशपेक्षा उंच असून सदूपेक्षा ठेंगणा आहे. समिधा अजयपेक्षा उंच असून सदू एवढी उंच नाही; तर सर्वात उंच कोण?

- (1) सदू (2) समिधा (3) अजय (4) रमेश

कच्च्या कामासाठी फक्त

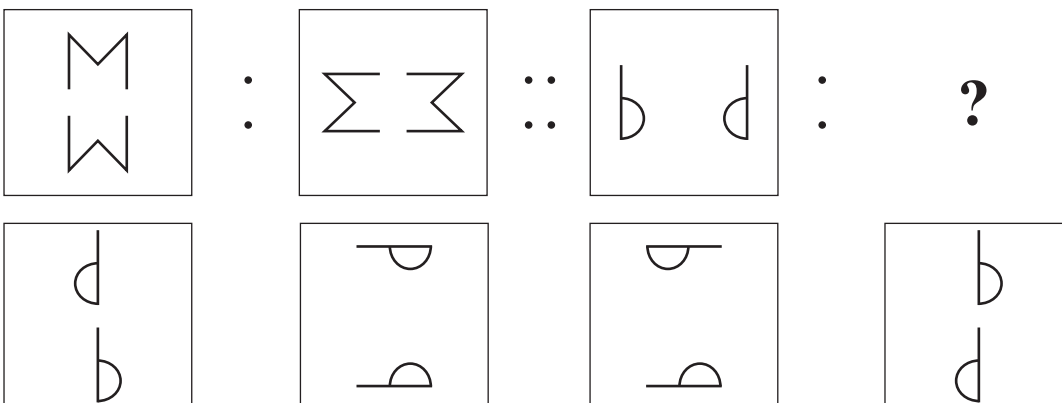
A	B	C	D	E	F	G	H	I	J	K	L	M	N	O	P	Q	R	S	T	U	V	W	X	Y
---	---	---	---	---	---	---	---	---	---	---	---	---	---	---	---	---	---	---	---	---	---	---	---	---

43. Five years ago John and Ahmed's age was $\frac{1}{3}$ and $\frac{1}{4}$ times respectively of Sharad's age at that time. If John's age was 8 yrs at that time then what is the addition of ages of all three, two years later?
- (1) 38 yrs (2) 53 yrs (3) 59 yrs (4) 40 yrs
44. There are two married sons and three grand children in Radha's family. Find minimum number of members in Radha's family.
- (1) 12 (2) 11 (3) 10 (4) 9

Q.45 to Q.49 Direction :

In the given questions first term has a specific relation with the second term. The same relation exists between third and fourth term. Identify the relation and select the correct option to replace the question mark.

45. Maharashtra : Governor :: India : ?
- (1) Prime Minister (2) President
(3) Chief Minister (4) Vice-President

46. 

(1) (2) (3) (4)

SPACE FOR ROUGH WORK

A	B	C	D	E	F	G	H	I	J	K	L	M	N	O	P	Q	R	S	T	U	V	W	X	Y
---	---	---	---	---	---	---	---	---	---	---	---	---	---	---	---	---	---	---	---	---	---	---	---	---

43. जॉन आणि अहमदचे पाच वर्षांपूर्वीचे वय शरदच्या त्यावेळच्या वयाच्या अनुक्रमे $\frac{1}{3}$ व $\frac{1}{4}$ पट असून जॉनचे त्यावेळचे वय 8 वर्षे असल्यास त्या तिघांच्या 2 वर्षांनंतरच्या वयांची बेरीज किती वर्षे असेल?

- (1) 38 वर्षे (2) 53 वर्षे (3) 59 वर्षे (4) 40 वर्षे

44. सौ. राधाकाकूंच्या घरात दोन विवाहित मुलगे आणि तीन नातवंडे आहेत, तर त्यांच्या घरात कमीत कमी किती माणसे असतील?

- (1) 12 (2) 11 (3) 10 (4) 9

प्रश्न क्र. 45 ते 49 साठी सूचना -

खालील प्रश्नात पहिल्या व दुसऱ्या पदाचा जसा संबंध आहे; अगदी तसाच संबंध तिसऱ्या व चौथ्या पदात आहे. तो संबंध शोधा व प्रश्नचिन्हाच्या जागी येण्याच्या उत्तराच्या पर्याय क्रमांकाचे वर्तुळ रंगवा.

45. महाराष्ट्र : राज्यपाल :: भारत : ?

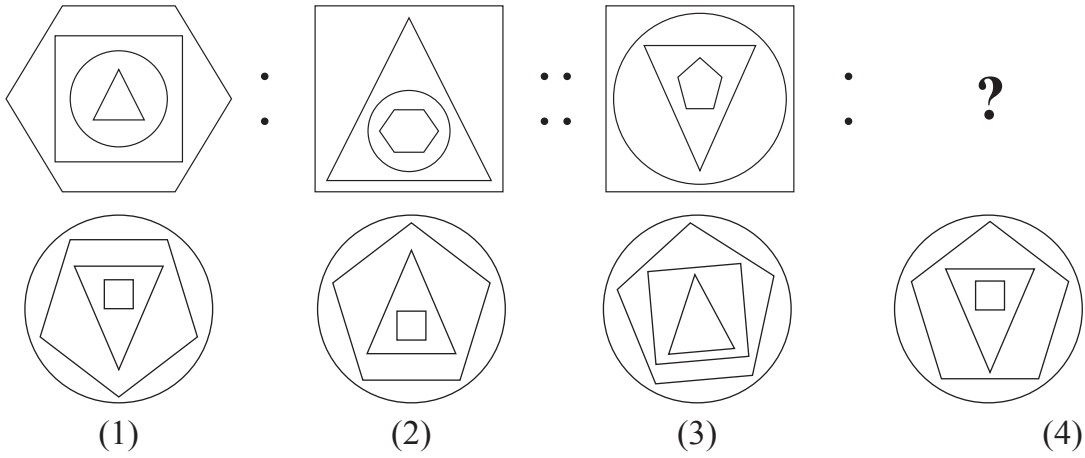
- (1) पंतप्रधान (2) राष्ट्रपती
(3) मुख्यमंत्री (4) उपराष्ट्रपती

46.

	:		::		:	?
(1)	(2)	(3)	(4)			

कच्च्या कामासाठी फक्त

47.



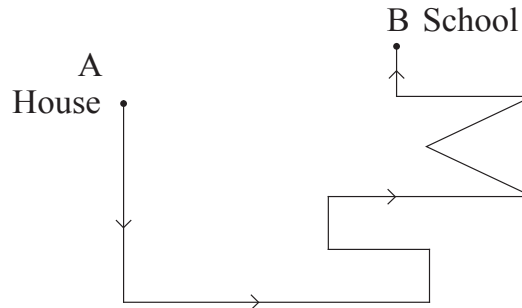
48. $13 : 169 :: 15 : ?$

- (A) 225 (B) 175 (C) 195
 (1) Only 'A' is correct (2) Only 'C' is correct
 (3) 'A' and 'B' both are correct (4) 'A' and 'C' both are correct

49. $27 : 14 :: 18 : ?$

- (1) 13 (2) 12 (3) 15 (4) 17

50. In the adjoining figure, if one walks from 'House' (A) to 'School' (B) in the direction of the arrows, how many times has he to turn to his left?



- (1) 6 times (2) 5 times (3) 11 times (4) 7 times

SPACE FOR ROUGH WORK

A	B	C	D	E	F	G	H	I	J	K	L	M	N	O	P	Q	R	S	T	U	V	W	X	Y
---	---	---	---	---	---	---	---	---	---	---	---	---	---	---	---	---	---	---	---	---	---	---	---	---

51. Rahul says, "There are 6 boys standing in front of me in a row and Amit is at the third position behind me." Amit says, "I am standing next to the boy who is exactly at the middle place in the row." How many boys are standing in the row?

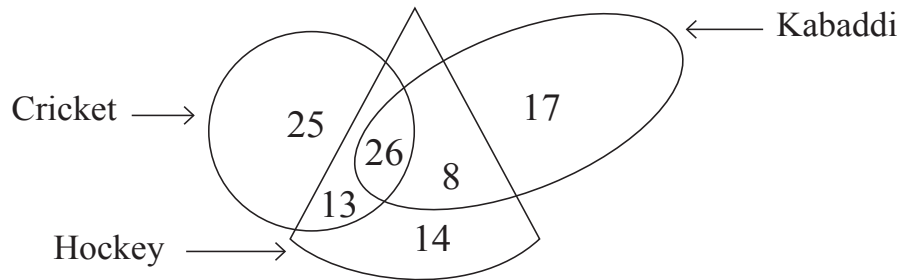
- (1) 18 (2) 19 (3) 21 (4) 23

52. In a certain year if Independence day occurs on Tuesday then in the same year which day would be the last day of the year?

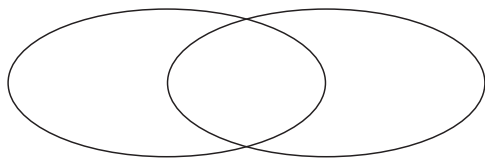
- (1) Sunday (2) Monday (3) Tuesday (4) Wednesday

53. The adjacent figure shows the number of players playing different games. Observe the figure and find how many players play at least two games?

- (1) 34
(2) 39
(3) 21
(4) 47



54. Select the correct option to describe the given venn diagram.



- (1) Male, Female, Doctors
(2) Numbers, Even numbers, Odd numbers
(3) Trees, Mango, Jackfruit
(4) Country, State, District

SPACE FOR ROUGH WORK

A	B	C	D	E	F	G	H	I	J	K	L	M	N	O	P	Q	R	S	T	U	V	W	X	Y
---	---	---	---	---	---	---	---	---	---	---	---	---	---	---	---	---	---	---	---	---	---	---	---	---

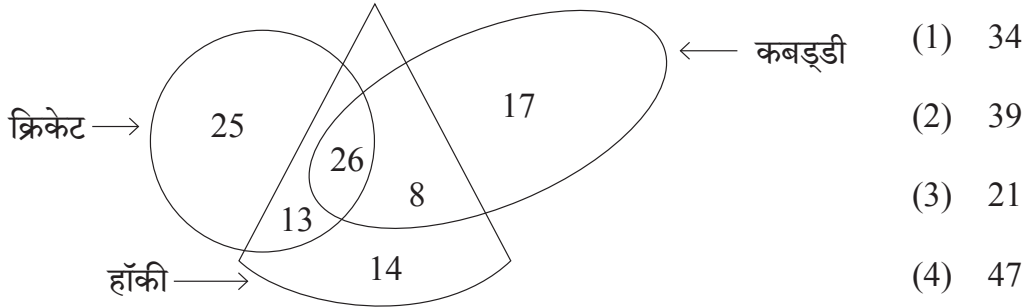
51. राहुल म्हणतो, “एका रांगेत माझ्यापुढे 6 मुले उभी असून माझ्यानंतर तिसऱ्या स्थानावर अमीत उभा आहे.” तर अमीत म्हणतो, “मी मधल्या मुलाच्या पुढे लगत उभा आहे.” तर त्या रांगेत किती मुले असतील?

- (1) 18 (2) 19 (3) 21 (4) 23

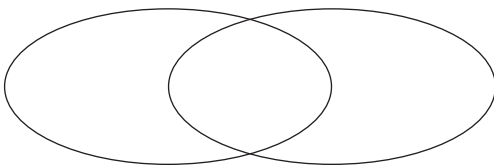
52. एका वर्षी स्वातंत्र्यदिन मंगळवारी आला असल्यास त्या वर्ष अखेरीचा वार कोणता असेल?

- (1) रविवार (2) सोमवार (3) मंगळवार (4) बुधवार

53. सोबतच्या आकृतीत खेळाडूंची संख्या दाखवली आहे. यावरून - किमान दोन खेळ खेळणाऱ्या खेळाडूंची संख्या किती आहे?



54. खालील वेन आकृतीचे अचूक वर्णन करणारा पर्याय कोणता?



- (1) पुरुष, स्त्रिया, डॉक्टर
(2) संख्या, समसंख्या, विषमसंख्या
(3) वृक्ष, आंबा, फणस
(4) देश, राज्य, जिल्हा

कच्च्या कामासाठी फक्त

55. In the given square pattern, select the correct option to replace the question mark.

11	67	17
41	?	47
23	31	5

- (1) 73
 (2) 61
 (3) 59
 (4) 53

Q.56 to Q.60 Direction :

A set of terms is given at the beginning of the question. These terms have some common characteristic. Find out the term from the alternatives that matches the given set of terms.

56. Step mother, Snow white, Spring time, ?

- (1) Distrust (2) Foot print
 (3) Black white (4) Day night

57. Hard, Challenging, Testing, ?

- (1) Easy (2) Joyful
 (3) Effortless (4) Difficult

58. 25, 123, 62, 6, ?

- (1) 341 (2) 216
 (3) 511 (4) 218

59. 297, 135, 501, 189, ?

- (1) 503 (2) 355
 (3) 243 (4) 781

SPACE FOR ROUGH WORK

A	B	C	D	E	F	G	H	I	J	K	L	M	N	O	P	Q	R	S	T	U	V	W	X	Y
---	---	---	---	---	---	---	---	---	---	---	---	---	---	---	---	---	---	---	---	---	---	---	---	---

55. खालील चौकोनात प्रश्नचिन्हाच्या जागी कोणती संख्या येईल?

11	67	17
41	?	47
23	31	5

- (1) 73
(2) 61
(3) 59
(4) 53

प्रश्न क्र. 56 ते 60 साठी सूचना -

प्रश्नाच्या सुरुवातीला काही पदे दिलेली आहेत. त्यांचा एका समान वैशिष्ट्यानुसार एक गट तयार हातो. या गटात बसणारे पद दिलेल्या पर्यायांतून निवडा.

56. बोलभांड, लग्नकार्य, शेतीवाडी, ?

- (1) पुर्नभरण
(2) बेलभांडार
(3) कामचुकार
(4) जर-तर

57. शत्रु, दुश्मन, वैरी, ?

- (1) वपू
(2) द्वेष
(3) संगर
(4) रिपू

58. 25, 123, 62, 6, ?

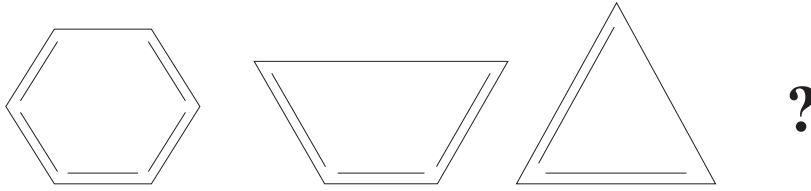
- (1) 341
(2) 216
(3) 511
(4) 218

59. 297, 135, 501, 189, ?

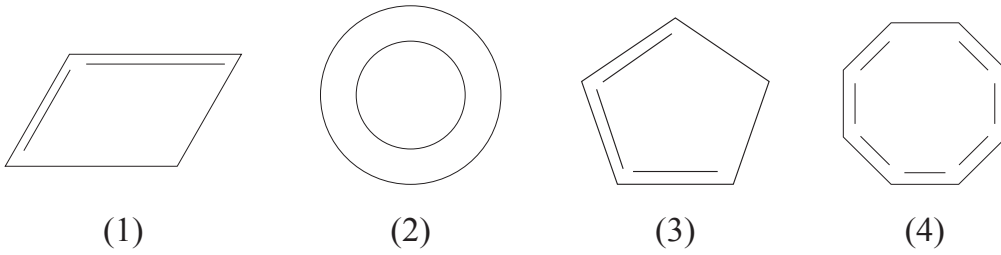
- (1) 503
(2) 355
(3) 243
(4) 781

कच्च्या कामासाठी फक्त

60. Question Figures



Answer Figures

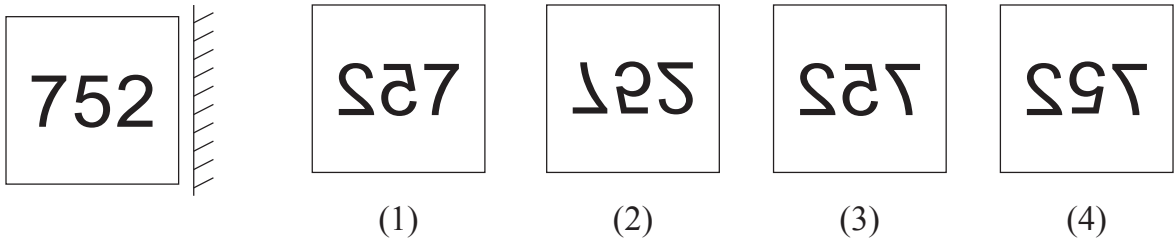


Q.61 and Q.62 Direction:

Select the mirror image of the given question figure from the options.

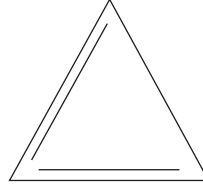
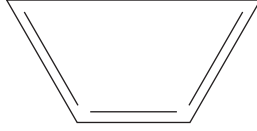
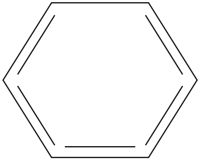
61. Question Figure

Answer Figures



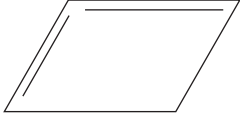
SPACE FOR ROUGH WORK

60. प्रश्नाकृती

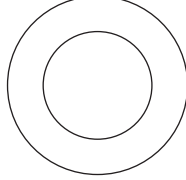


?

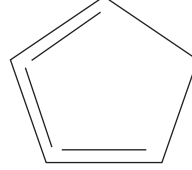
उत्तर आकृती



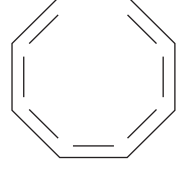
(1)



(2)



(3)



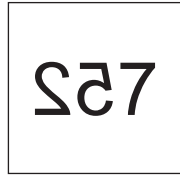

(4)

प्रश्न क्र. 61 व 62 साठी सूचना -

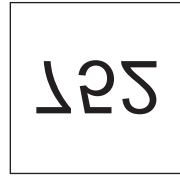
खालील प्रश्नाकृतीची आरशातील प्रतिमा कशी दिसेल ते पर्यायी उत्तर आकृत्यांमधून निश्चित करा व त्याचे वर्तुळ रंगवा.

61. प्रश्नाकृती

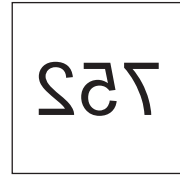
उत्तर आकृती



(1)



(2)



(3)

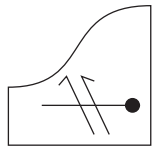
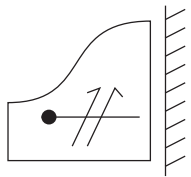


(4)

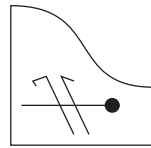
कच्च्या कामासाठी फक्त

62. Question Figure

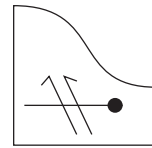
Answer Figures



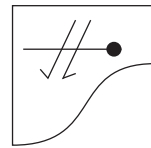
(1)



(2)



(3)



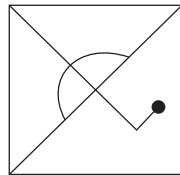
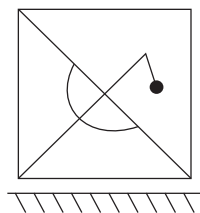
(4)

Q.63 and Q.64 Direction:

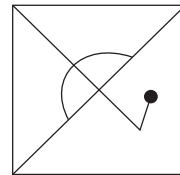
Select the water image of the given question figure from the options.

63. Question Figure

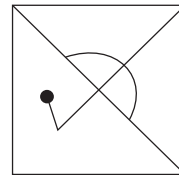
Answer Figures



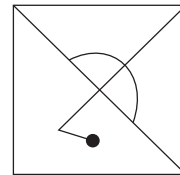
(1)



(2)



(3)



(4)

64. Question Figure

Answer Figures



(1)



(2)



(3)

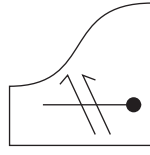
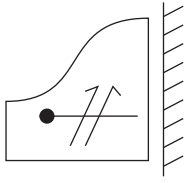


(4)

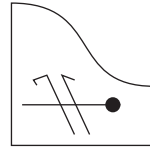
SPACE FOR ROUGH WORK

62. प्रश्नाकृती

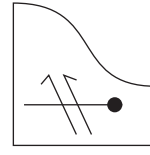
उत्तर आकृती



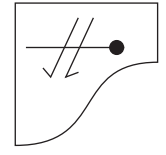
(1)



(2)



(3)



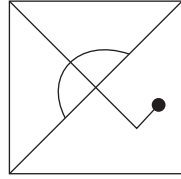
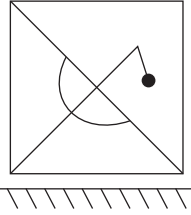
(4)

प्रश्न क्र. 63 व 64 साठी सूचना -

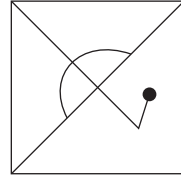
खालील प्रश्नाकृतीचे पाण्यातील प्रतिबिंब कसे दिसेल ते पर्यायी उत्तर आकृत्यांमधून निश्चित करा व त्याचे वर्तुळ रंगवा.

63. प्रश्नाकृती

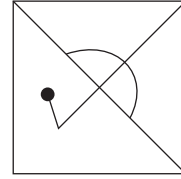
उत्तर आकृती



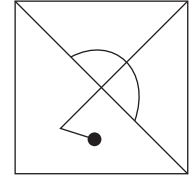
(1)



(2)




(3)




(4)

64. प्रश्नाकृती

उत्तर आकृती



(1)



(2)



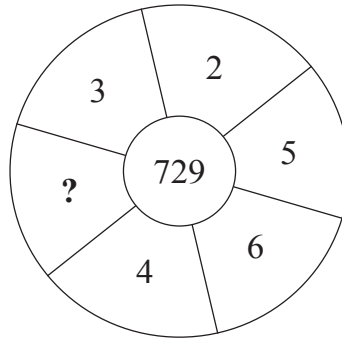
(3)



(4)

कच्च्या कामासाठी फक्त

65. Identify the pattern and select the correct option to replace the question mark.



- (1) 25 (2) 6 (3) 7 (4) 17

Q.66 and Q.67 Direction :

Word	BUT	TAP	BAT
Code	△ ● □	▼ △ ☆	△ ☆ ●

In a certain code language, symbols are used for different letters. The sequence of the letters and of the symbols may not necessarily be the same. Observe the code in the above frame and answer the questions.

66. Which symbol is represented by 'U'?

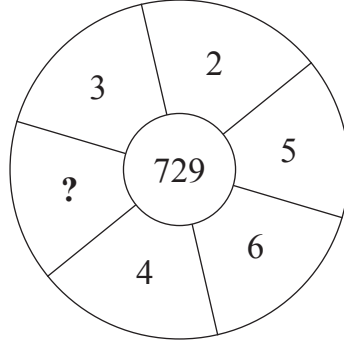
- (1) △ (2) ●
 (3) □ (4) ☆

67. How is 'TOP' written in the given code language?

- (1) △ ● ▼ (2) ▼ ● □
 (3) ☆ △ ▼ (4) △ □ ▼

SPACE FOR ROUGH WORK

65. खालील वर्तुळाकृतीत प्रश्नचिन्हाच्या जागी कोणती संख्या येईल ते पर्यायातून निश्चित करा.



- (1) 25 (2) 6 (3) 7 (4) 17

प्रश्न क्र. 66 व 67 साठी सूचना -

शब्द	BUT	TAP	BAT
सांकेतिक रूप	△ ● □	▼ △ ☆	△ ☆ ●

वरील सारणीतील शब्दांतील अक्षरे आणि चिन्हे यांचा क्रम सारखाच असेल असे नाही, हे लक्षात घेऊन प्रश्न क्र. 66 व 67 ची उत्तरे पर्यायातून निवडा.

66. 'U' या अक्षरासाठी कोणते चिन्ह येईल?

- (1) △ (2) ●
(3) □ (4) ☆

67. वरील सांकेतिक भाषेत 'TOP' हा शब्द कसा लिहाल?

- (1) △ ● ▼ (2) ▼ ● □
(3) ☆ △ ▼ (4) △ □ ▼

कच्च्या कामासाठी फक्त

Q.68 and Q.69 Direction:

Select the identical figure to the question figure from the options.

Question Figure Answer Figures

68.

(1) (2) (3) (4)

Question Figure Answer Figures

69.

(1) (2) (3) (4)

70. In a certain code language. If CAT = WYE, MEN = MUL and DOG = VKS then how will you write the word which is opposite gender of 'OX'?

- (1) KB (2) WOC (3) WKC (4) RBK

71.
ABCDE
FGHIJ
KLMNO
PQRST
UVWXY

In the given alphabet series which letter is at the sixth position on the right hand of the letter which is at fourth place to the left of the letter which is ninth from the right hand side of the series?

- (1) R (2) S (3) G (4) T

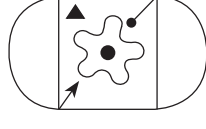
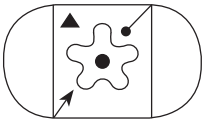
SPACE FOR ROUGH WORK

प्रश्न क्र. 68 व 69 साठी सूचना -

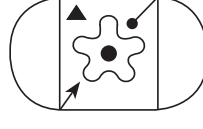
खालील प्रश्नाकृतीशी तंतोतंत जुळणारी आकृती पर्यायी उत्तर आकृत्यांमधून निवडा.

68. प्रश्नाकृती

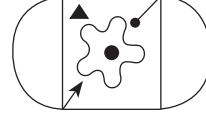
उत्तर आकृती



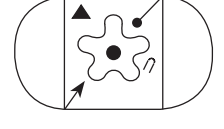
(1)



(2)




(3)




(4)

69. प्रश्नाकृती


उत्तर आकृती



(1)



(2)



(3)



(4)

70. एका सांकेतिक भाषेत CAT = WYE, MEN = MUL आणि DOG = VKS असे लिहितात, तर त्याच भाषेत 'OX' चा विरुद्धालिंगी शब्द कसा लिहाल?

(1) KB

(2) WOC

(3) WKC

(4) RBK

71.

A B C D E F G H I J K L M N O P Q R S T U V W X Y

वरील अक्षरमालेतील उजवीकडून नवव्या अक्षराच्या डावीकडील चौथ्या अक्षराच्या उजवीकडील सहावे अक्षर कोणते?

(1) R

(2) S

(3) G

(4) T

कच्च्या कामासाठी फक्त

A	B	C	D	E	F	G	H	I	J	K	L	M	N	O	P	Q	R	S	T	U	V	W	X	Y
---	---	---	---	---	---	---	---	---	---	---	---	---	---	---	---	---	---	---	---	---	---	---	---	---

72.

Letters	C	M	D	K	L	W	N	R	P
Numbers	7	8	5	4	2	9	6	0	3

Observe the given table and solve.

$$D + W \div P - (N + L) = ?$$

- (1) R (2) P (3) L (4) N

73. Purva is facing the south-east direction and she turns to her left two times at right angle and does Shirshasan. (up side down, with head down and legs up) which direction is pointed by her right hand?

- (1) South-west (2) North-east (3) South-east (4) North-west

74. You see an injured sparrow on your way to school. What will be your immediate action?

- (1) I will loudly call my friends.
(2) I will neglect the baby sparrow.
(3) I will inform the Head-master of my school about the incident.
(4) I will serve water from my water bottle and shift the sparrow to a safe place.

75. Whose action from the following is the most correct action?

- (1) Raju collected all the garbage from the varanda and burnt it.
(2) Sameer threw the wet garbage in the dustbin.
(3) Sameedha collected all the garbage from her house in a bag.
(4) Suresh converted wet garbage into manure.

SPACE FOR ROUGH WORK

A	B	C	D	E	F	G	H	I	J	K	L	M	N	O	P	Q	R	S	T	U	V	W	X	Y
---	---	---	---	---	---	---	---	---	---	---	---	---	---	---	---	---	---	---	---	---	---	---	---	---

72.

अक्षरे	C	M	D	K	L	W	N	R	P
अंक	7	8	5	4	2	9	6	0	3

वरील सारणीचे निरीक्षण करून -

$$D + W \div P - (N + L) = \text{किती?}$$

- (1) R (2) P (3) L (4) N

73. आग्नेय दिशेस तोंड करून उभी असलेली पूर्वा दोन वेळा डावीकडे काटकोनात वळली आणि तिने शीर्षासन केले; तर तिचा उजवा हात कोणत्या दिशेस असेल?

- (1) नैर्ऋत्य (2) ईशान्य (3) आग्नेय (4) वायव्य

74. तुमच्या शाळेत जाण्याच्या रस्त्यावर चिमणीचे पिलू तडफडत असल्याचे दिसताच तुम्ही त्वरित काय कराल?

- (1) आरडाओरडा करून मित्रांना बोलावेन.
(2) पिलाकडे दुर्लक्ष करेन.
(3) वरील घटना मुख्याध्यापकांच्या कानावर घालेन.
(4) स्वतःच्या बाटलीतील पाणी पिलाला पाजून सुरक्षित जागी ठेवेन.

75. खालीलपैकी कोणाची कृती सर्वाधिक योग्य ठरेल?

- (1) राजूने अंगणातील कचरा एकत्र करून जाळला.
(2) समीरने ओला कचरा कचराकुंडीत टाकला.
(3) समिधाने घरातील कचरा एकाच डब्यात गोळा केला.
(4) सुरेशने ओल्या कचऱ्यापासून खत तयार केले.

कच्च्या कामासाठी फक्त

SPACE FOR ROUGH WORK